

Name _____

Date _____



PERIMETER OF A RECTANGLE SHEET 3

Work out the perimeter of the following rectangles. They are not to scale.

1)

9 cm



3 cm

Perimeter = _____ cm

2)

6 in




4 in

Perimeter = _____ in

3)

7 ft



7 ft

Perimeter = _____ ft

4)

10 m



4 m

Perimeter = _____ m

5)

8 m




7 m

Perimeter = _____ m

6)

20 cm



20 cm

Perimeter = _____ cm

Name

Date



PERIMETER OF A RECTANGLE SHEET 3 ANSWERS

1)

9 cm




3 cm

Perimeter = 24 cm

2)

6 in




4 in

Perimeter = 20 in

3)

7 ft




7 ft

Perimeter = 28 ft

4)

10 m



4 m

Perimeter = 28 m

5)

8 m




7 m

Perimeter = 30 m

6)

20 cm



20 cm

Perimeter = 80 cm