




PERIMETER OF A RECTANGLE SHEET 3A

Work out the perimeter of the following rectangles. They are not to scale.

1)

9 cm



3 cm

Perimeter = _____

2)

6 mm




4 mm

Perimeter = _____

3)

7 cm



7 cm

Perimeter = _____

4)

10 m



4 m

Perimeter = _____

5)

8 m



7 m

Perimeter = _____

6)

20 cm



20 cm

Perimeter = _____



Name


Date



PERIMETER OF A RECTANGLE SHEET 3A ANSWERS

1)

9 cm




3 cm

Perimeter = 24 cm

2)

6 mm




4 mm

Perimeter = 20 mm

3)

7 cm



7 cm

Perimeter = 28 cm

4)

10 m



4 m

Perimeter = 28 m

5)

8 m




7 m

Perimeter = 30 m

6)

20 cm



20 cm

Perimeter = 80 cm

