

Name _____

Date _____

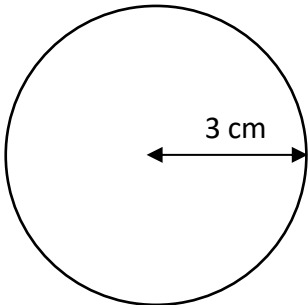


CIRCUMFERENCE OF A CIRCLE 2A

Work out the circumference of these circles using the radius measurements.

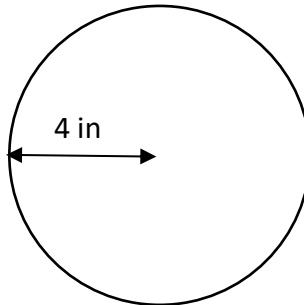
Give your answers to 1dp.

1)



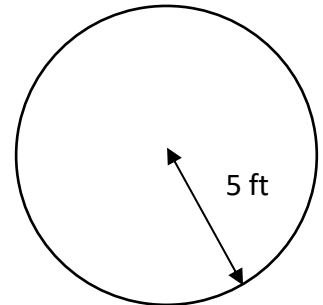
C = _____

2)



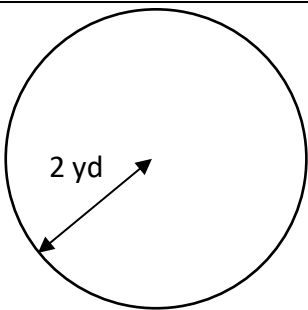
C = _____

3)



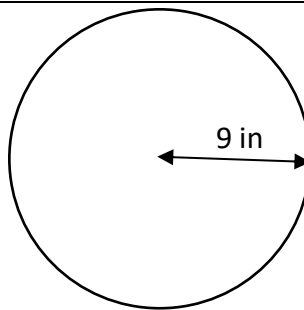
C = _____

4)



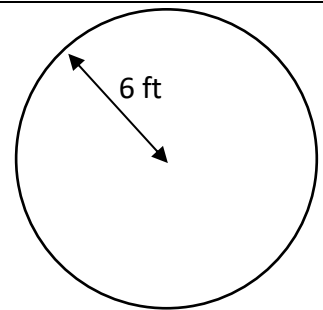
C = _____

5)



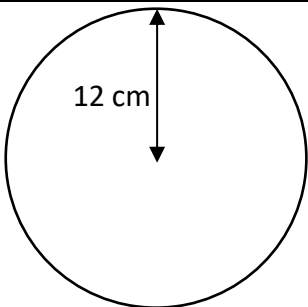
C = _____

6)



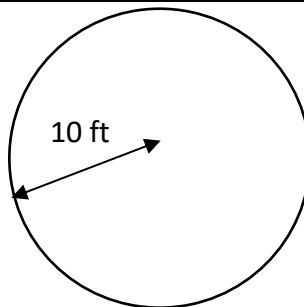
C = _____

7)



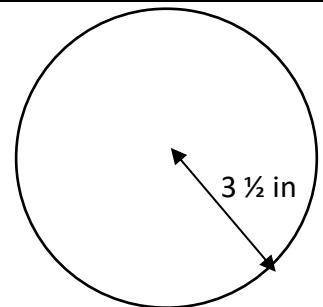
C = _____

8)



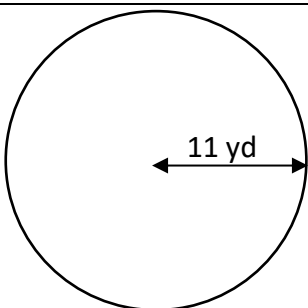
C = _____

9)



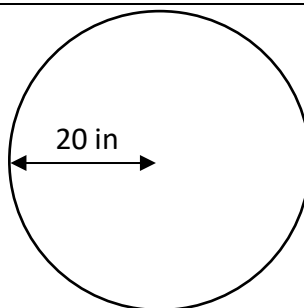
C = _____

10)



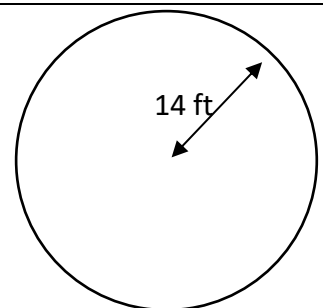
C = _____

11)



C = _____

12)



C = _____

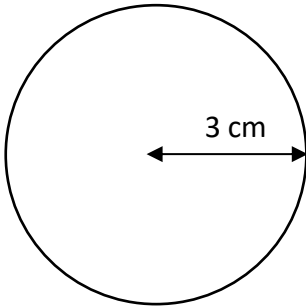
Name

Date



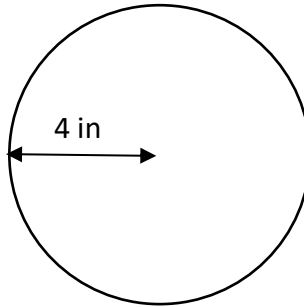
CIRCUMFERENCE OF A CIRCLE 2A ANSWERS

1)



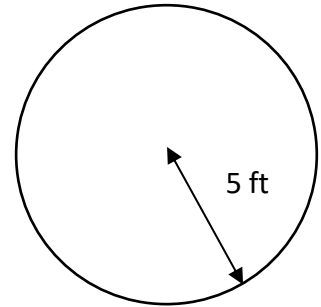
$$C = \underline{18.8 \text{ cm}}$$

2)



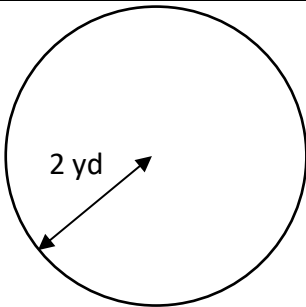
$$C = \underline{25.1 \text{ in}}$$

3)



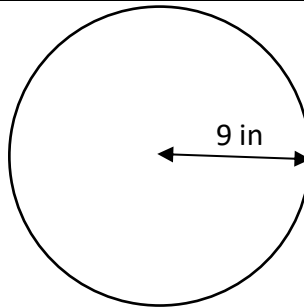
$$C = \underline{31.4 \text{ ft}}$$

4)



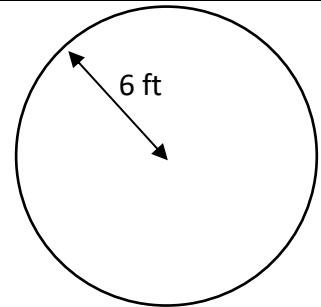
$$C = \underline{12.6 \text{ yd}}$$

5)



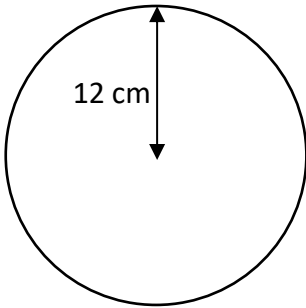
$$C = \underline{56.5 \text{ in}}$$

6)



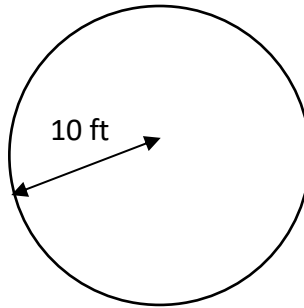
$$C = \underline{37.7 \text{ ft}}$$

7)



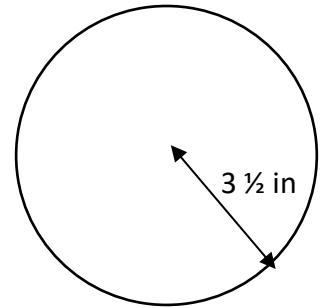
$$C = \underline{75.4 \text{ cm}}$$

8)



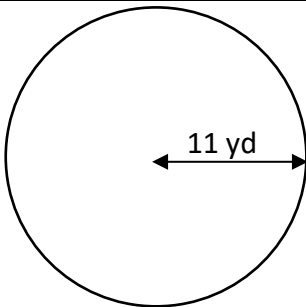
$$C = \underline{62.8 \text{ ft}}$$

9)



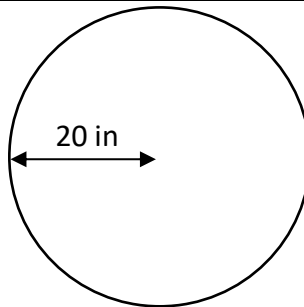
$$C = \underline{22.0 \text{ in}}$$

10)



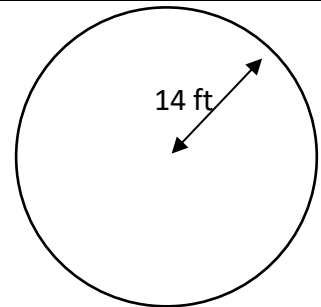
$$C = \underline{69.1 \text{ yd}}$$

11)



$$C = \underline{125.7 \text{ in}}$$

12)



$$C = \underline{88.0 \text{ ft}}$$