

Name _____

Date _____

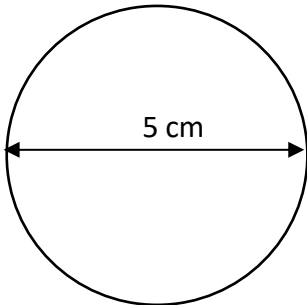


CIRCUMFERENCE OF A CIRCLE 3B

Work out the circumference of these circles using the diameter or radius measurements.

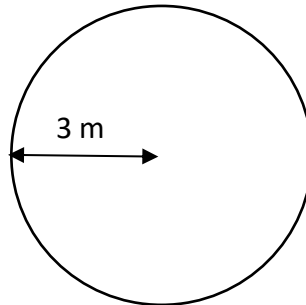
Give your answers to 1dp.

1)



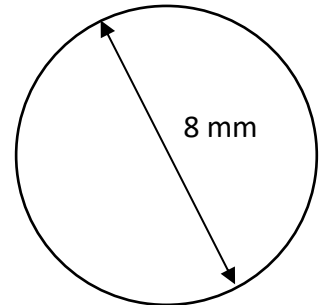
C = _____

2)



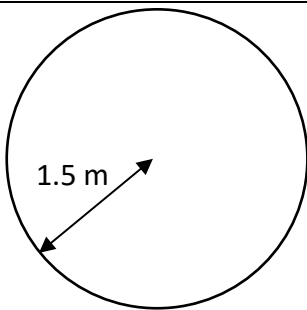
C = _____

3)



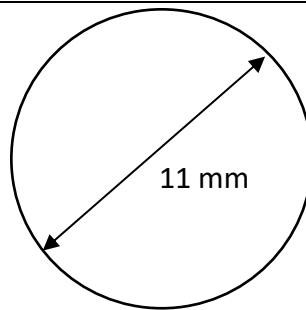
C = _____

4)



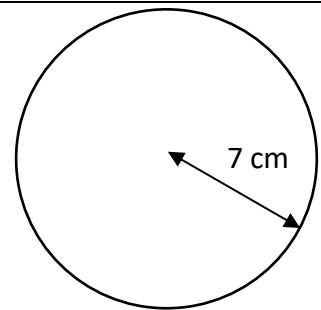
C = _____

5)



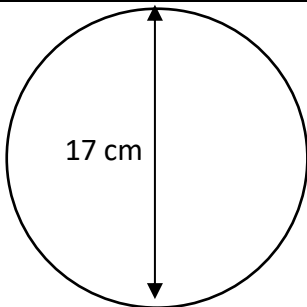
C = _____

6)



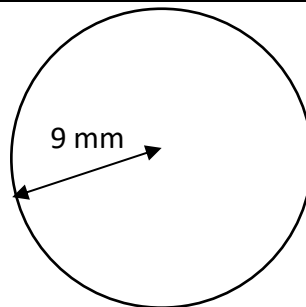
C = _____

7)



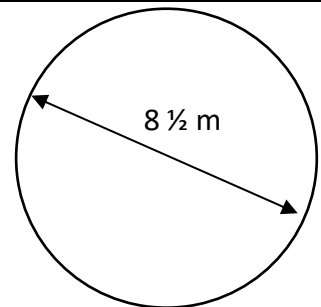
C = _____

8)



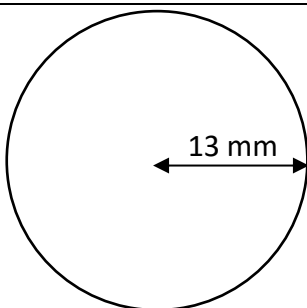
C = _____

9)



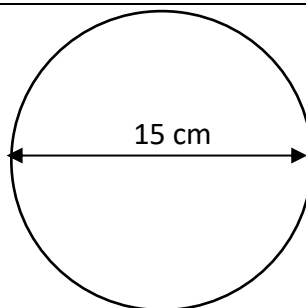
C = _____

10)



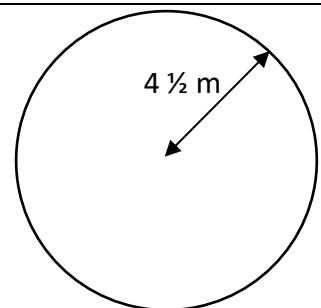
C = _____

11)



C = _____

12)



C = _____

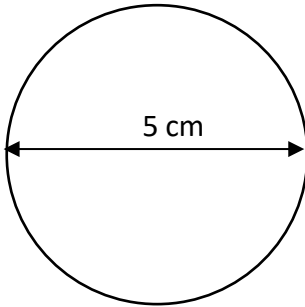
Name

Date



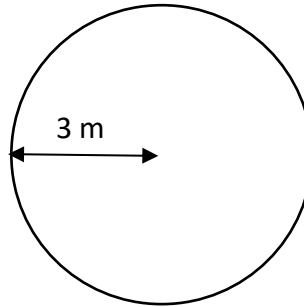
CIRCUMFERENCE OF A CIRCLE 3B ANSWERS

1)



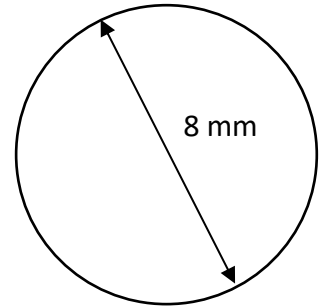
$$C = \underline{15.7 \text{ cm}}$$

2)



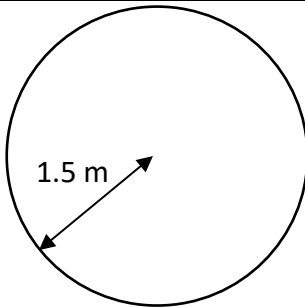
$$C = \underline{18.8 \text{ m}}$$

3)



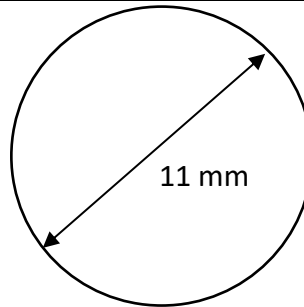
$$C = \underline{25.1 \text{ mm}}$$

4)



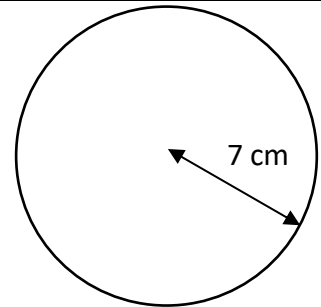
$$C = \underline{9.4 \text{ m}}$$

5)



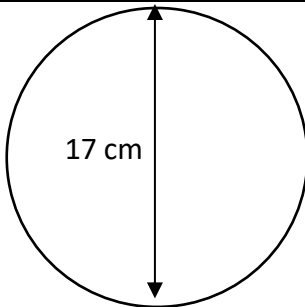
$$C = \underline{34.6 \text{ mm}}$$

6)



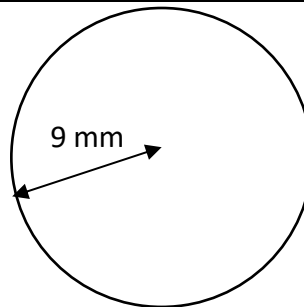
$$C = \underline{44.0 \text{ cm}}$$

7)



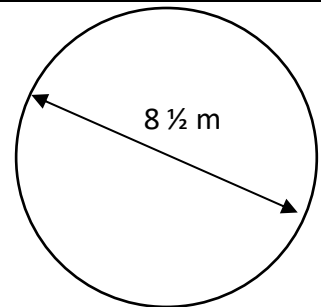
$$C = \underline{53.4 \text{ cm}}$$

8)



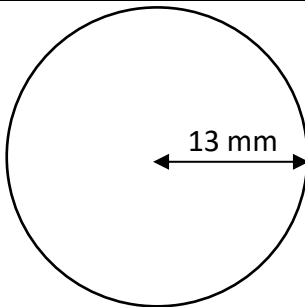
$$C = \underline{56.5 \text{ mm}}$$

9)



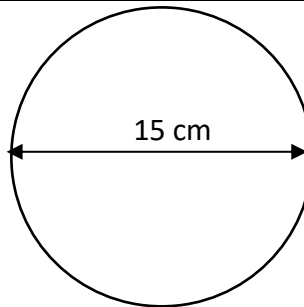
$$C = \underline{26.7 \text{ m}}$$

10)



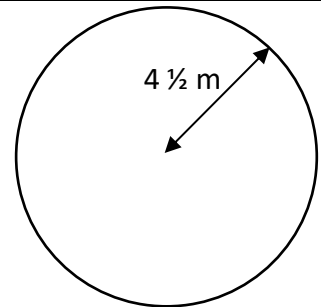
$$C = \underline{81.7 \text{ mm}}$$

11)



$$C = \underline{47.1 \text{ cm}}$$

12)



$$C = \underline{28.3 \text{ m}}$$