

Name \_\_\_\_\_

Date \_\_\_\_\_

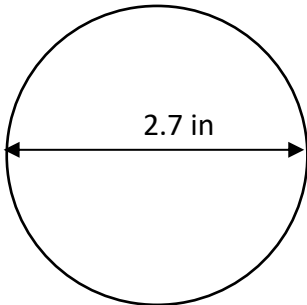


## CIRCUMFERENCE OF A CIRCLE 4A

Work out the circumference of these circles using the diameter or radius measurements.

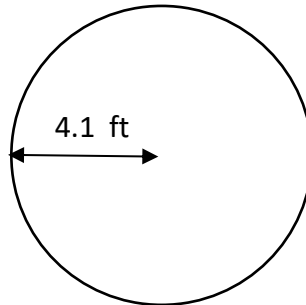
Give your answers to 1dp.

1)



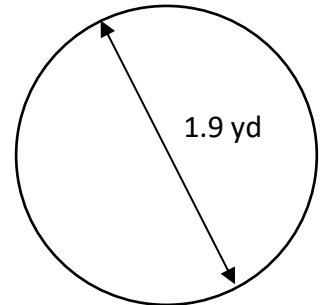
C = \_\_\_\_\_

2)



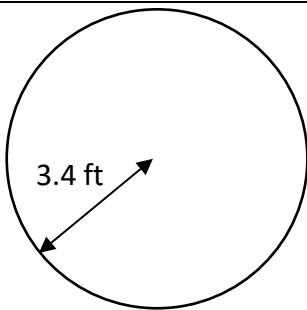
C = \_\_\_\_\_

3)



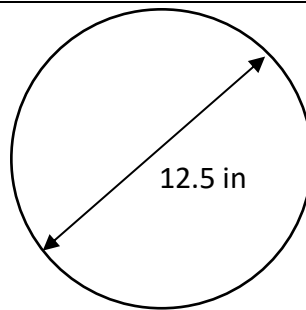
C = \_\_\_\_\_

4)



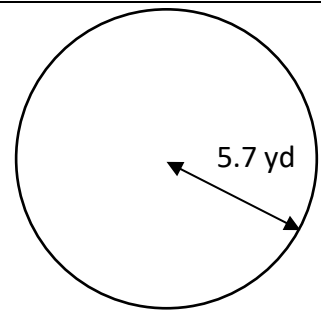
C = \_\_\_\_\_

5)



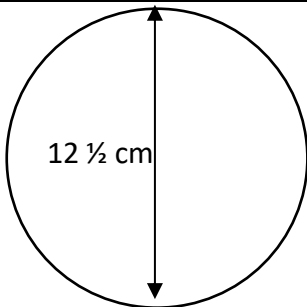
C = \_\_\_\_\_

6)



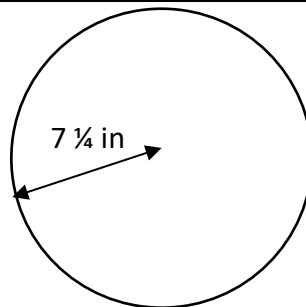
C = \_\_\_\_\_

7)



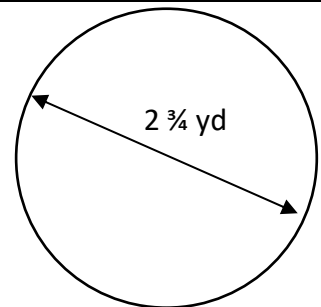
C = \_\_\_\_\_

8)



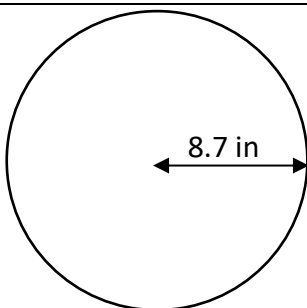
C = \_\_\_\_\_

9)



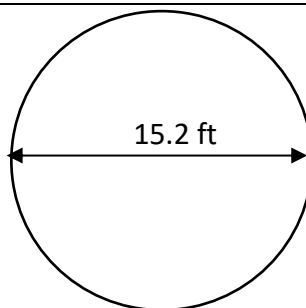
C = \_\_\_\_\_

10)



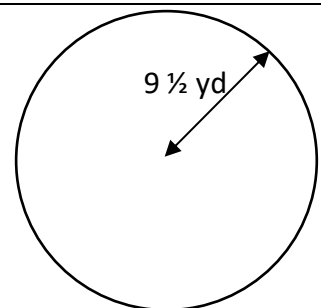
C = \_\_\_\_\_

11)



C = \_\_\_\_\_

12)



C = \_\_\_\_\_

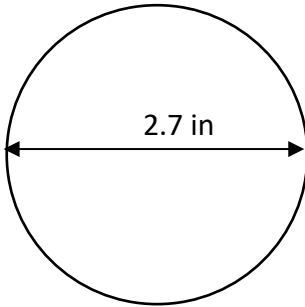
Name

Date



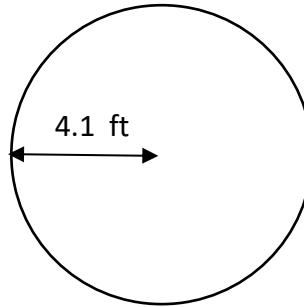
# CIRCUMFERENCE OF A CIRCLE 4A ANSWERS

1)



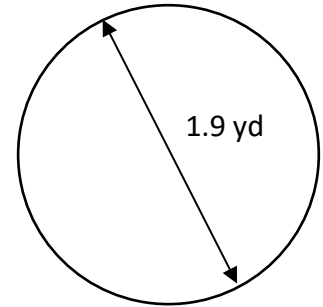
$$C = \underline{8.5 \text{ in}}$$

2)



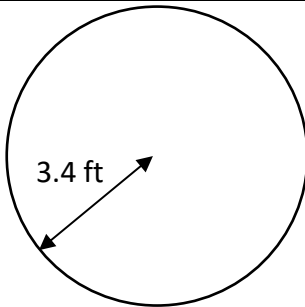
$$C = \underline{25.8 \text{ ft}}$$

3)



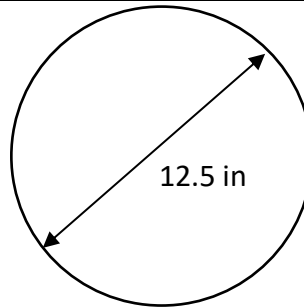
$$C = \underline{6.0 \text{ yd}}$$

4)



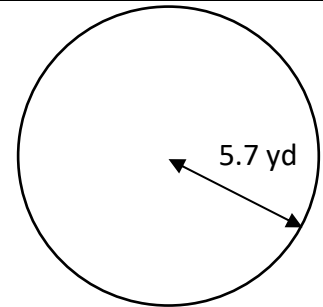
$$C = \underline{21.4 \text{ ft}}$$

5)



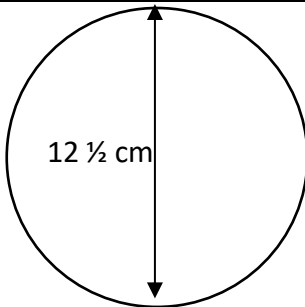
$$C = \underline{39.3 \text{ in}}$$

6)



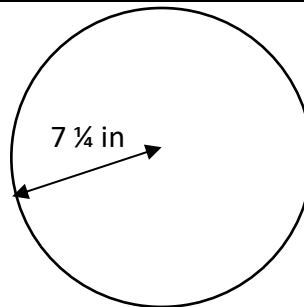
$$C = \underline{35.8 \text{ yd}}$$

7)



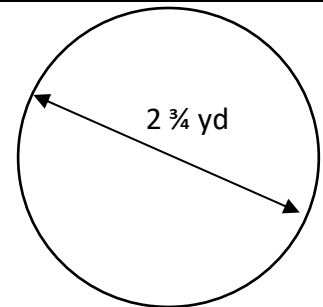
$$C = \underline{39.3 \text{ cm}}$$

8)



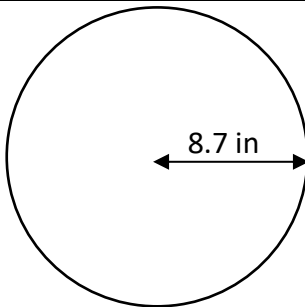
$$C = \underline{45.6 \text{ in}}$$

9)



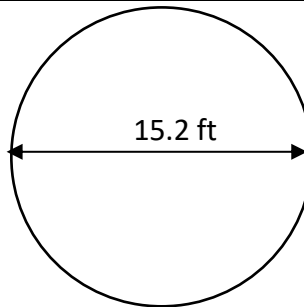
$$C = \underline{8.6 \text{ yd}}$$

10)



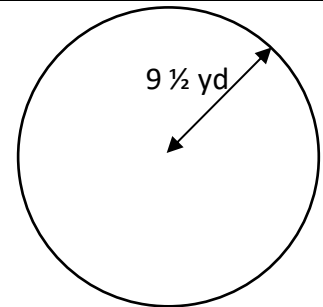
$$C = \underline{54.7 \text{ in}}$$

11)



$$C = \underline{47.8 \text{ ft}}$$

12)



$$C = \underline{59.7 \text{ yd}}$$