

Name _____

Date _____

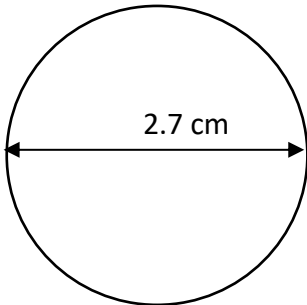


CIRCUMFERENCE OF A CIRCLE 4B

Work out the circumference of these circles using the diameter or radius measurements.

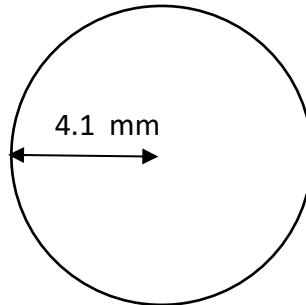
Give your answers to 1dp.

1)



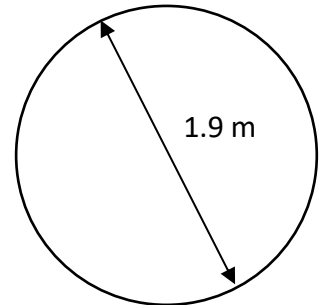
C = _____

2)



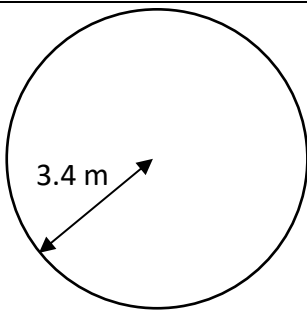
C = _____

3)



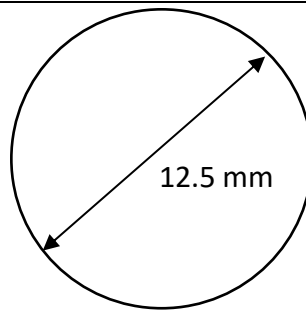
C = _____

4)



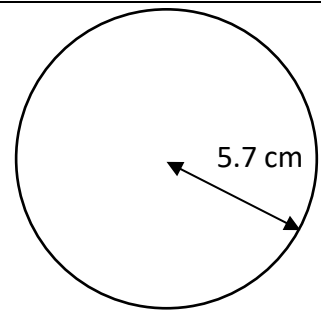
C = _____

5)



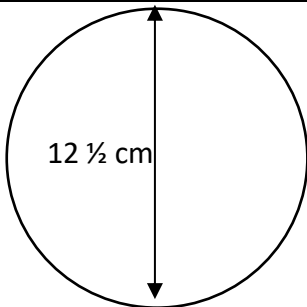
C = _____

6)



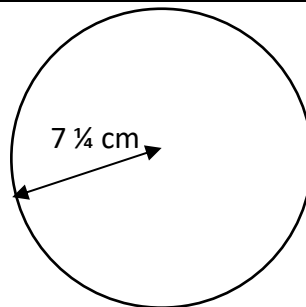
C = _____

7)



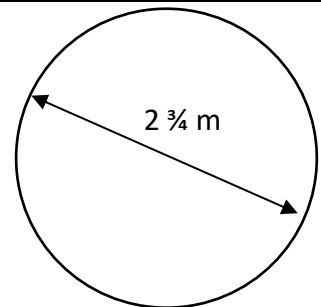
C = _____

8)



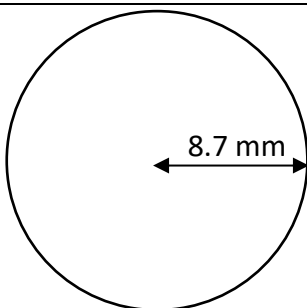
C = _____

9)



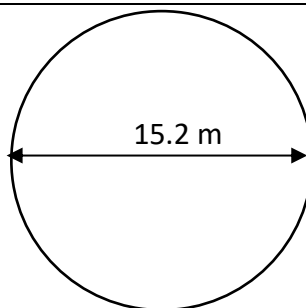
C = _____

10)



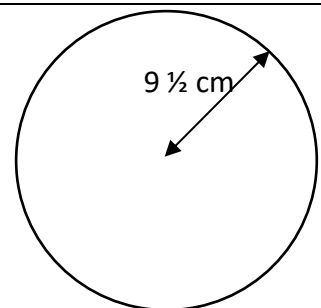
C = _____

11)



C = _____

12)



C = _____

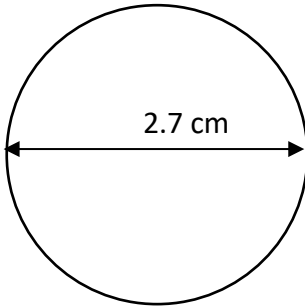
Name

Date



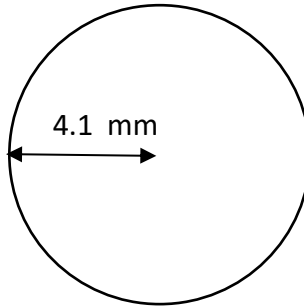
CIRCUMFERENCE OF A CIRCLE 4B ANSWERS

1)



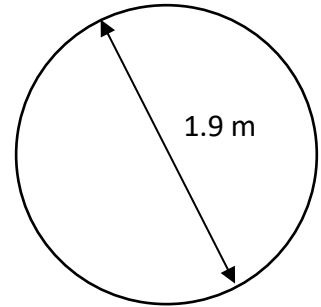
$$C = \underline{8.5 \text{ cm}}$$

2)



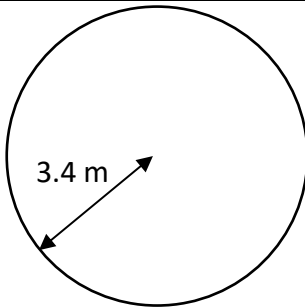
$$C = \underline{25.8 \text{ mm}}$$

3)



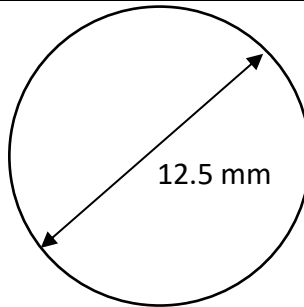
$$C = \underline{6.0 \text{ m}}$$

4)



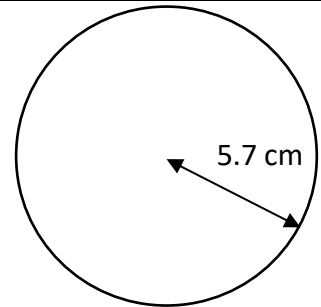
$$C = \underline{21.4 \text{ m}}$$

5)



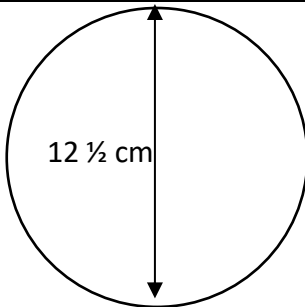
$$C = \underline{39.3 \text{ mm}}$$

6)



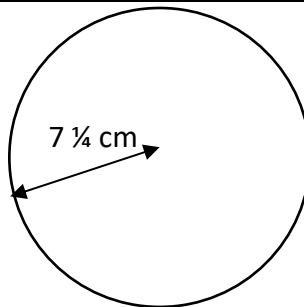
$$C = \underline{35.8 \text{ cm}}$$

7)



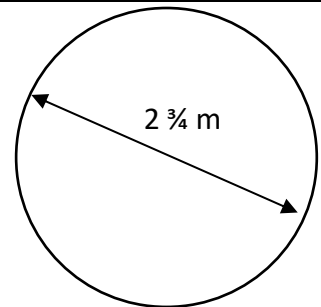
$$C = \underline{39.3 \text{ cm}}$$

8)



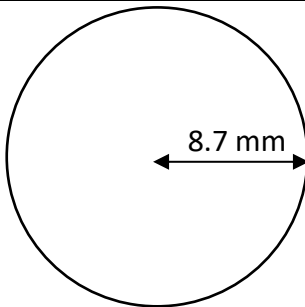
$$C = \underline{45.6 \text{ cm}}$$

9)



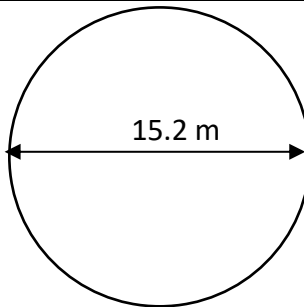
$$C = \underline{8.6 \text{ m}}$$

10)



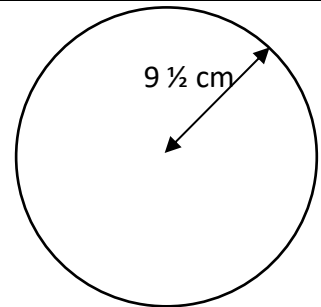
$$C = \underline{54.7 \text{ mm}}$$

11)



$$C = \underline{47.8 \text{ m}}$$

12)



$$C = \underline{59.7 \text{ cm}}$$