

Name _____

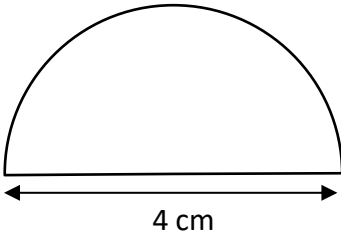
Date _____



PERIMETER OF A SEMI-CIRCLE 2A

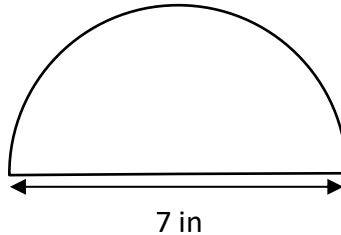
Work out the circumference of these semicircles using the radius and diameter measurements.
Give your answers to 1dp.

1)



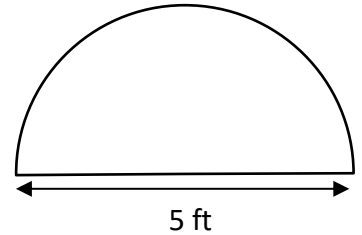
$C =$ _____

2)



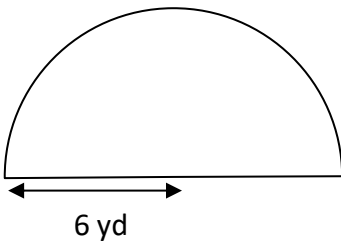
$C =$ _____

3)



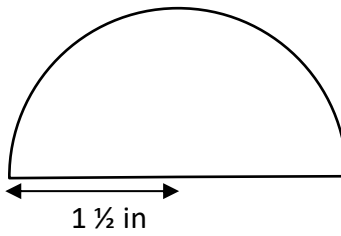
$C =$ _____

4)



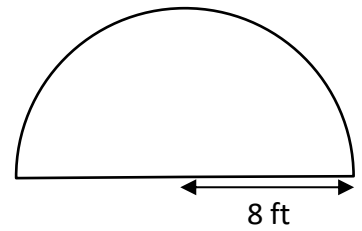
$C =$ _____

5)



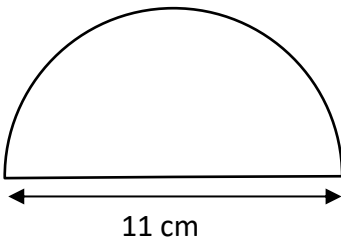
$C =$ _____

6)



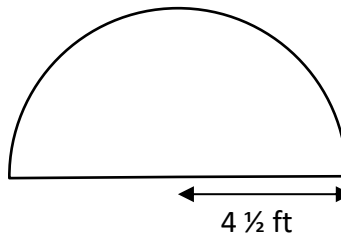
$C =$ _____

7)



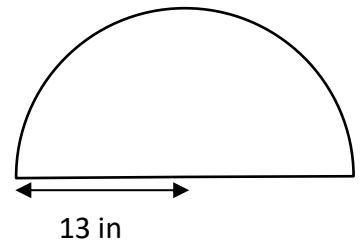
$C =$ _____

8)



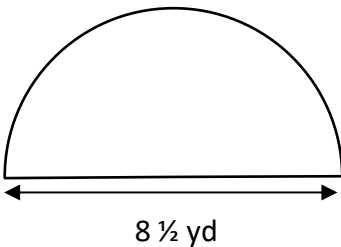
$C =$ _____

9)



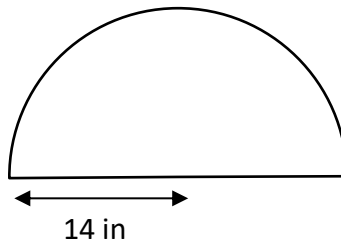
$C =$ _____

10)



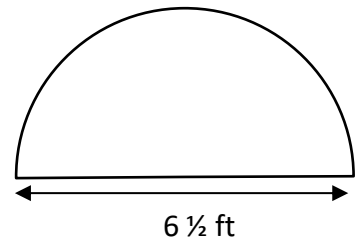
$C =$ _____

11)



$C =$ _____

12)



$C =$ _____

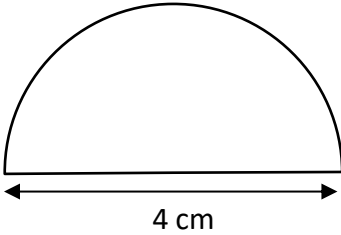
Name

Date



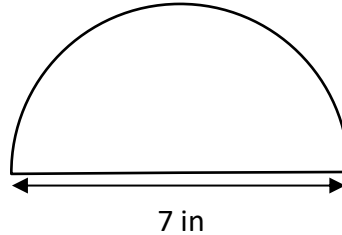
PERIMETER OF A SEMI-CIRCLE 2A ANSWERS

1)



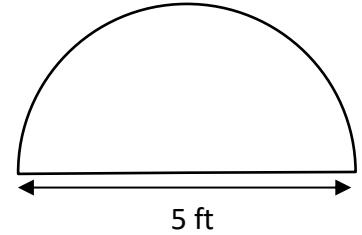
$$C = \underline{10.3 \text{ cm}}$$

2)



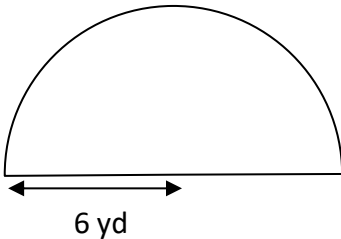
$$C = \underline{18.0 \text{ in}}$$

3)



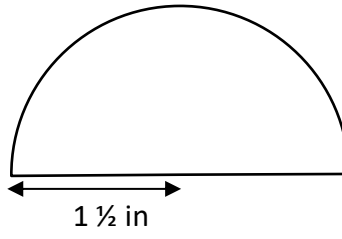
$$C = \underline{12.9 \text{ ft}}$$

4)



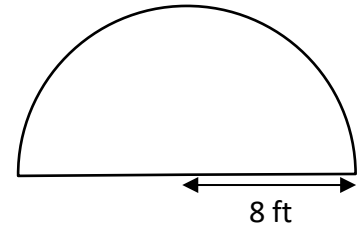
$$C = \underline{30.8 \text{ yd}}$$

5)



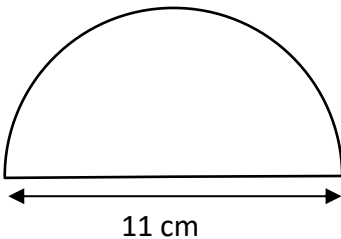
$$C = \underline{7.7 \text{ in}}$$

6)



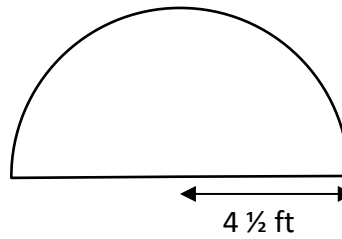
$$C = \underline{41.1 \text{ ft}}$$

7)



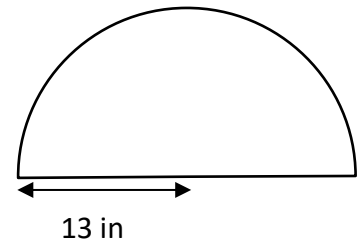
$$C = \underline{28.3 \text{ cm}}$$

8)



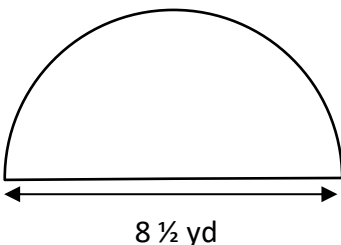
$$C = \underline{23.1 \text{ ft}}$$

9)



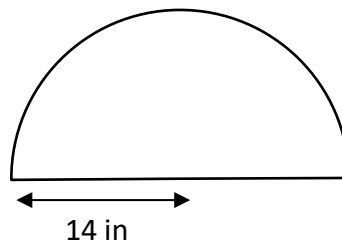
$$C = \underline{66.8 \text{ in}}$$

10)



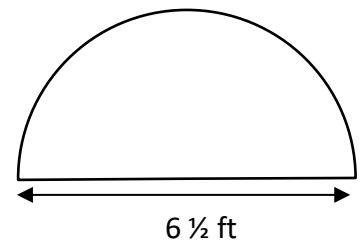
$$C = \underline{21.9 \text{ yd}}$$

11)



$$C = \underline{72.0 \text{ in}}$$

12)



$$C = \underline{16.7 \text{ ft}}$$