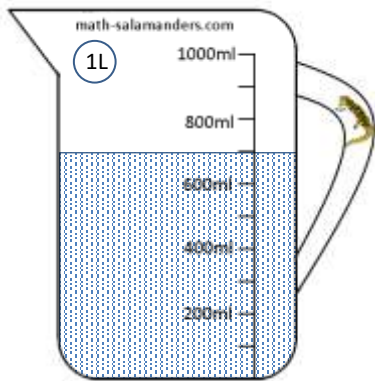




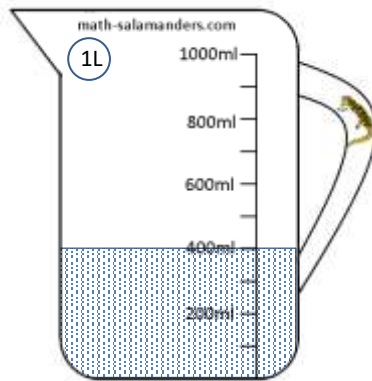
# READING SCALES 2C

Use your knowledge of the number system to read these scales which are going up in ones, tens or hundreds.

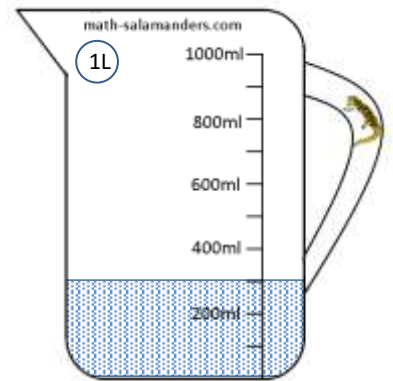
1) How many ml? \_\_\_\_\_




2) How many ml? \_\_\_\_\_




3) How many ml? \_\_\_\_\_




4) How long is the line? \_\_\_\_\_ cm




5) How long is the line? \_\_\_\_\_ cm



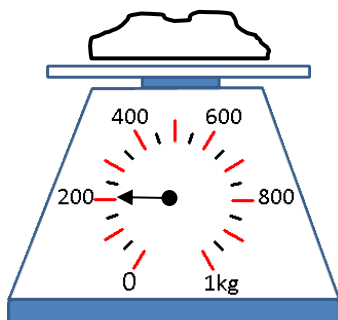
6) How long is the line? \_\_\_\_\_ mm



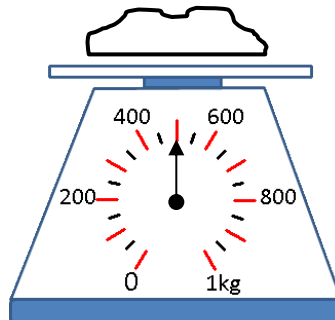
7) How long is the line? \_\_\_\_\_ mm



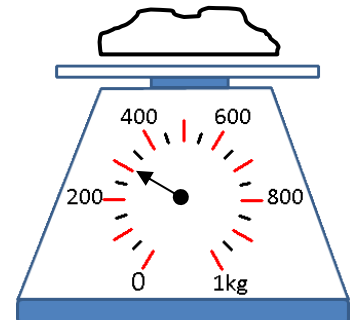
8) How many g? \_\_\_\_\_



9) How many g? \_\_\_\_\_



10) How many g? \_\_\_\_\_



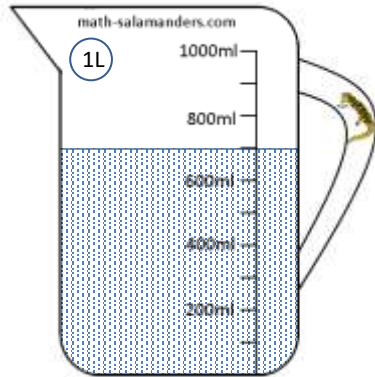
Name

Date

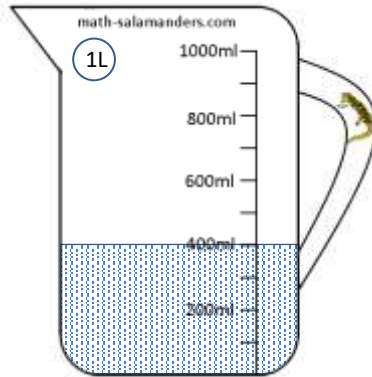


# READING SCALES 2C ANSWERS

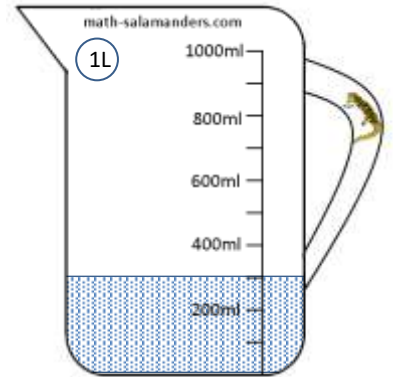
1) How many ml? 700



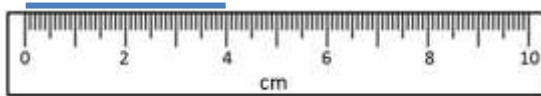
2) How many ml? 400




3) How many ml? 300




4) How long is the line? 4 cm




5) How long is the line? 9 cm



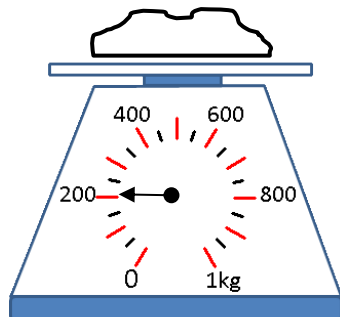
6) How long is the line? 10 mm



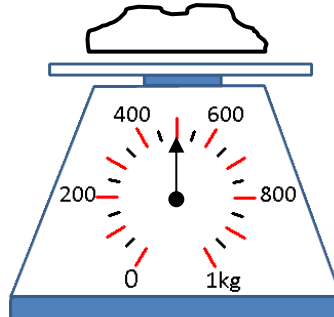
7) How long is the line? 70 mm



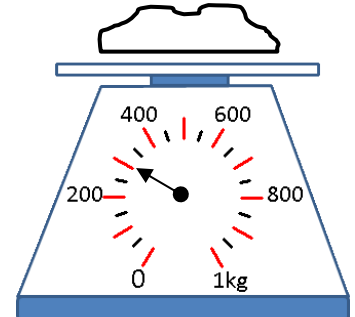
8) How many g? 200



9) How many g? 500



10) How many g? 300



Free Math Sheets, Math Games and Math Help

**MATH-SALAMANDERS.COM**