

Name \_\_\_\_\_

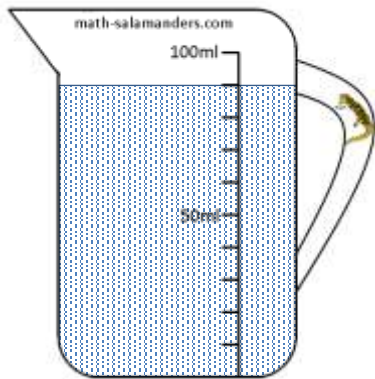
Date \_\_\_\_\_



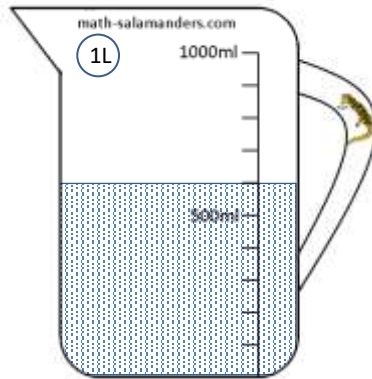
# READING SCALES 2F

Use your knowledge of the number system to read these scales which are going up in ones, tens or hundreds.

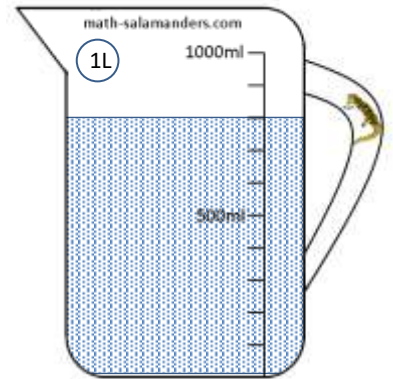
1) How many ml? \_\_\_\_\_




2) How many ml? \_\_\_\_\_




3) How many ml? \_\_\_\_\_




4) How long is the line? \_\_\_\_\_ cm




5) How long is the line? \_\_\_\_\_ cm



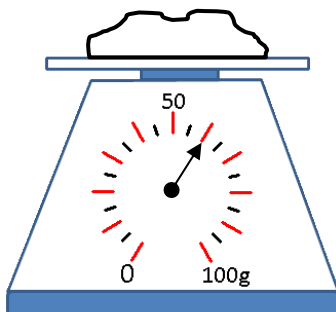
6) How long is the line? \_\_\_\_\_ mm



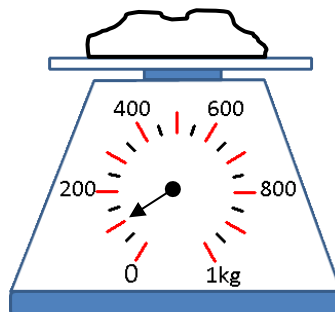
7) How long is the line? \_\_\_\_\_ mm



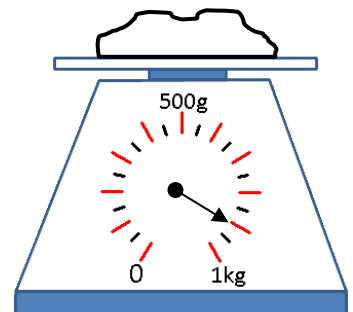
8) How many g? \_\_\_\_\_



9) How many g? \_\_\_\_\_



10) How many g? \_\_\_\_\_



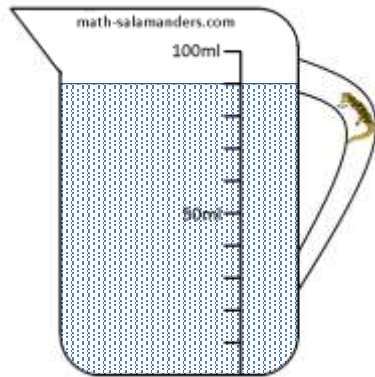
Name

Date

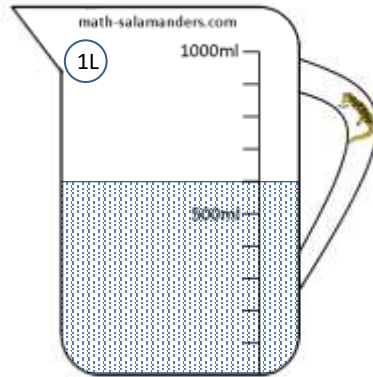


# READING SCALES 2F ANSWERS

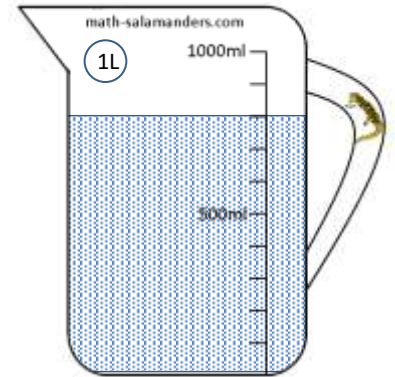
1) How many ml? 90




2) How many ml? 600




3) How many ml? 800




4) How long is the line? 4 cm




5) How long is the line? 9 cm



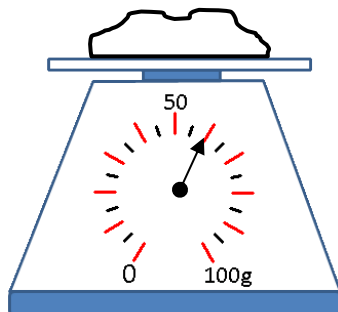
6) How long is the line? 70 mm



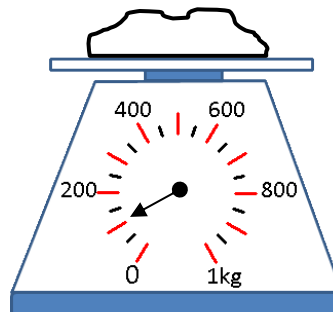
7) How long is the line? 30 mm



8) How many g? 60



9) How many g? 100



10) How many g? 900

