

Name _____

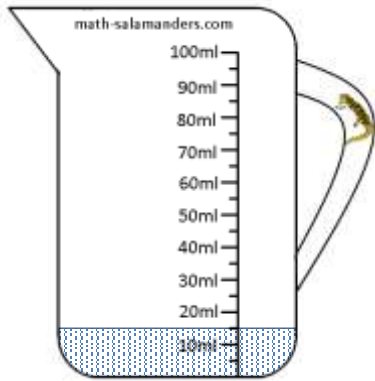
Date _____



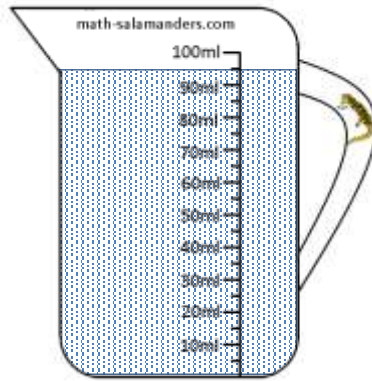
READING SCALES 2H

Use your knowledge of the number system to read these scales which are going up ones, fives and tens.

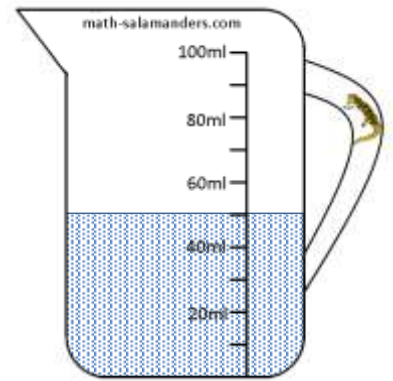
1) How many ml? _____




2) How many ml? _____




3) How many ml? _____




4) How long is the line? _____ mm




5) How long is the line? _____ mm



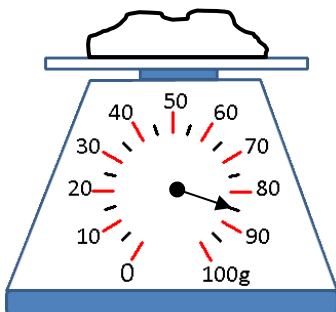
6) How long is the line? _____ mm



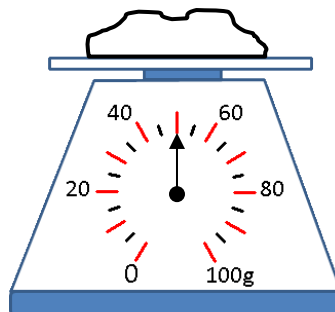
7) How long is the line? _____ mm



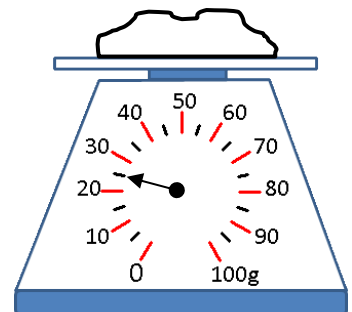
8) How many g? _____



9) How many g? _____



10) How many g? _____



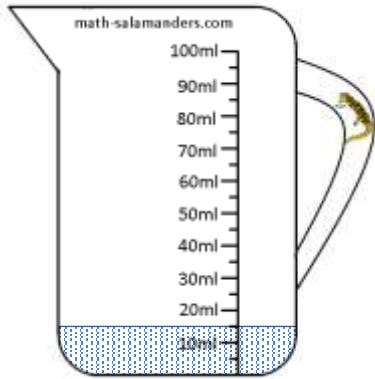
Name

Date

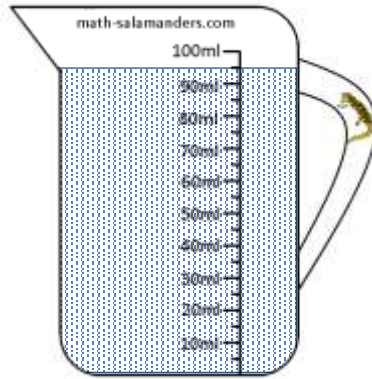


READING SCALES 2H ANSWERS

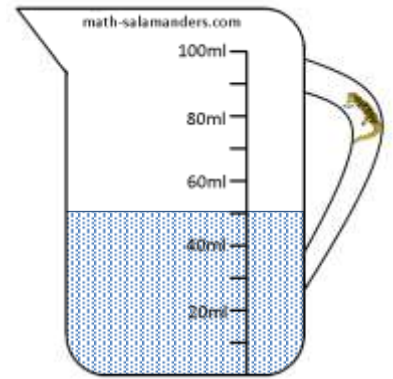
1) How many ml? 15




2) How many ml? 95




3) How many ml? 50




4) How long is the line? 45 mm




5) How long is the line? 75 mm



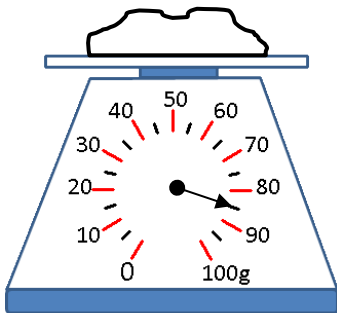
6) How long is the line? 25 mm



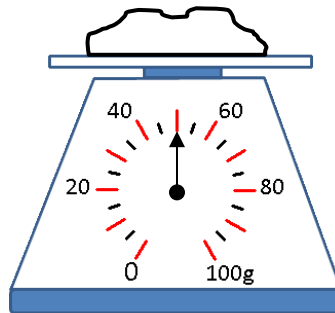
7) How long is the line? 95 mm



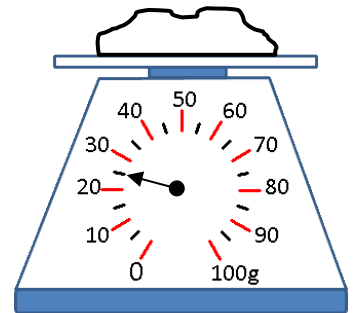
8) How many g? 85



9) How many g? 50



10) How many g? 25



Free Math Sheets, Math Games and Math Help

MATH-SALAMANDERS.COM