

Name _____


Date _____



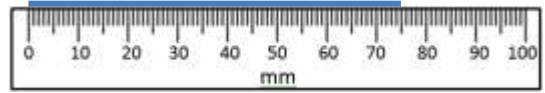
READING SCALES 3A

Use your knowledge of the number system to read these scales which are going up ones, fives and tens.

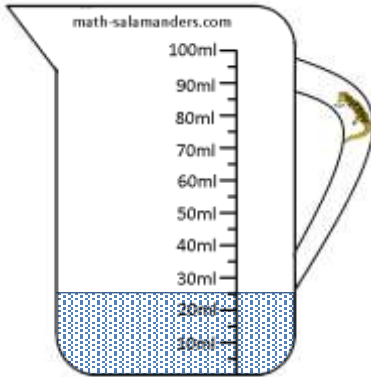
1) How long is the line? _____ mm



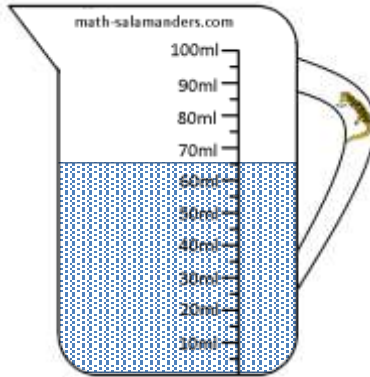
2) How long is the line? _____ mm



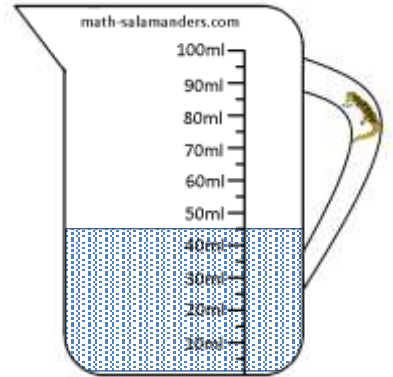
3) How many ml? _____




4) How many ml? _____




5) How many ml? _____



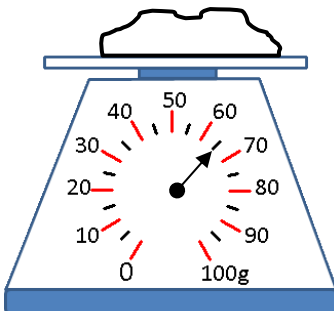
6) How long is the line? _____ cm



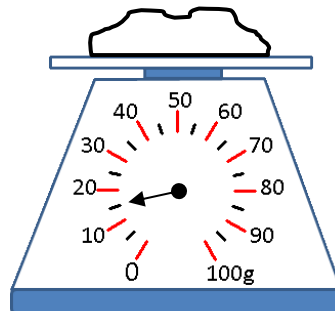
7) How long is the line? _____ cm



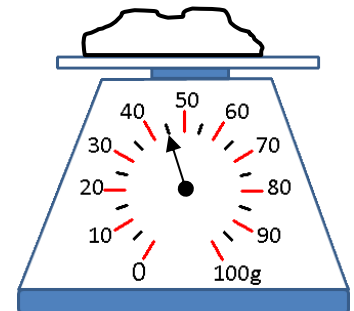
8) How many g? _____



9) How many g? _____



10) How many g? _____



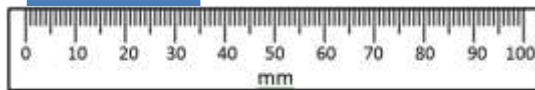
Name

Date

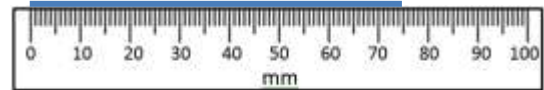


READING SCALES 3A ANSWERS

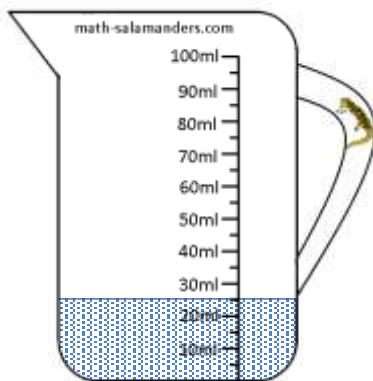
1) How long is the line? 35 mm



2) How long is the line? 75 mm



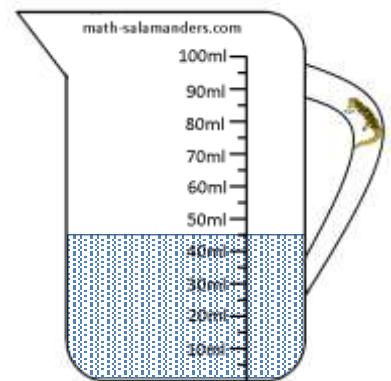
3) How many ml? 25




4) How many ml? 65



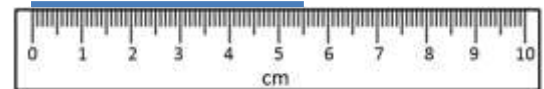
5) How many ml? 45



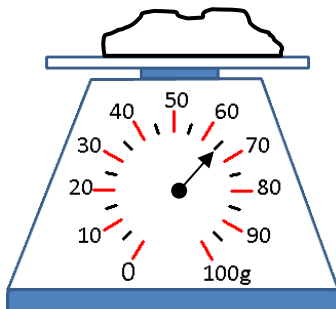
6) How long? 3.5 or 3½ cm



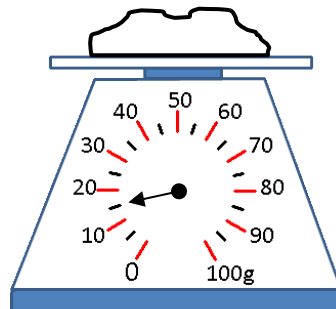
7) How long? 5.5 or 5½ cm



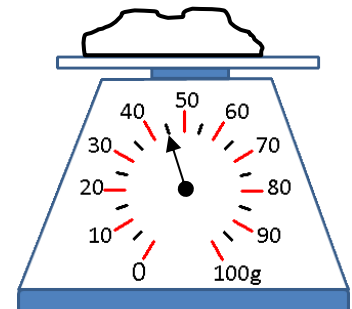
8) How many g? 65



9) How many g? 15



10) How many g? 45



Free Math Sheets, Math Games and Math Help

MATH-SALAMANDERS.COM