

Name \_\_\_\_\_

Date \_\_\_\_\_




# READING SCALES 3B

Use your knowledge of the number system to read these scales which are going up ones, fives and tens.

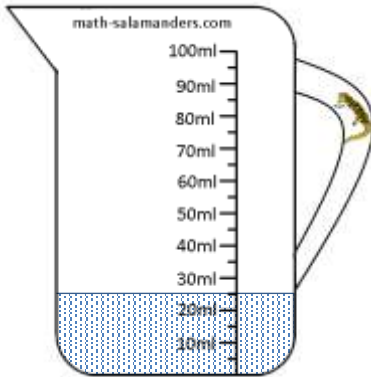
1) How long is the line? \_\_\_\_\_ mm



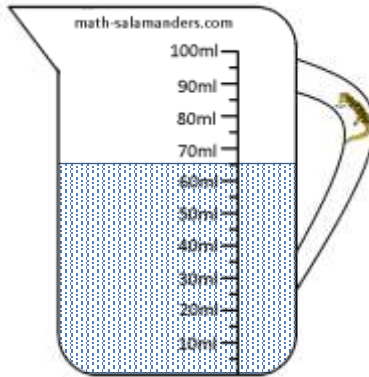
2) How long is the line? \_\_\_\_\_ mm



3) How many ml? \_\_\_\_\_




4) How many ml? \_\_\_\_\_




5) How many ml? \_\_\_\_\_



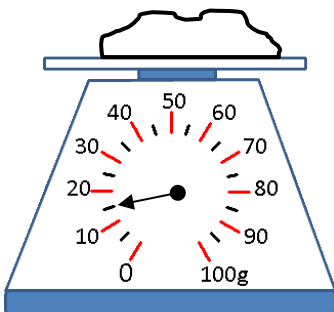
6) How long is the line? \_\_\_\_\_ cm



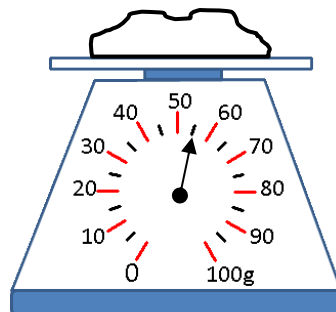
7) How long is the line? \_\_\_\_\_ cm



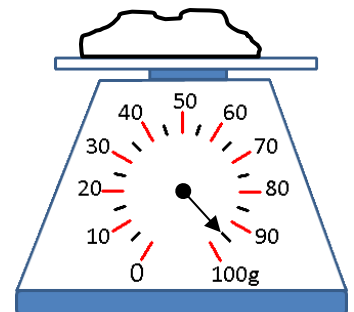
8) How many g? \_\_\_\_\_



9) How many g? \_\_\_\_\_



10) How many g? \_\_\_\_\_



Name

Date

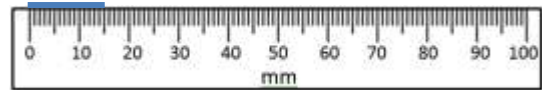


# READING SCALES 3B ANSWERS

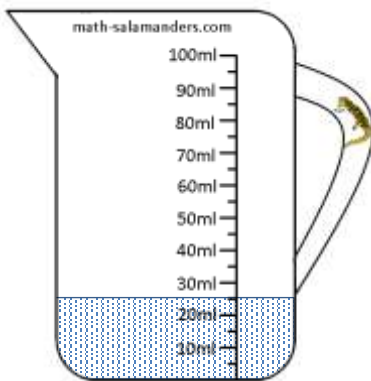
1) How long is the line? 95 mm



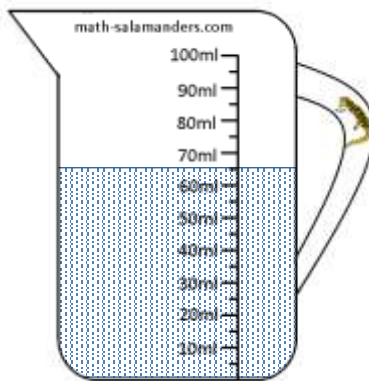
2) How long is the line? 15 mm



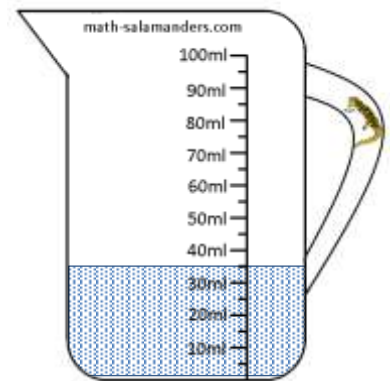
3) How many ml? 25




4) How many ml? 65




5) How many ml? 35



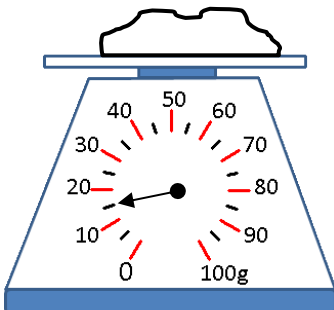
6) How long? 8.5 or 8½ cm



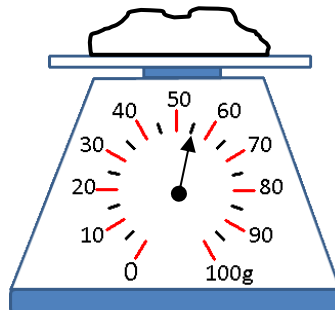
7) How long? 2.5 or 2½ cm



8) How many g? 15



9) How many g? 55



10) How many g? 95

