

Name _____

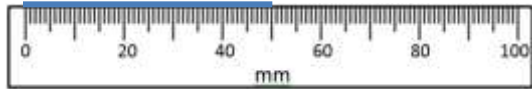
Date _____



READING SCALES 3C

Use your knowledge of the number system to read these scales which are going up ones, fives and tens. Remember to include the units of measurement.

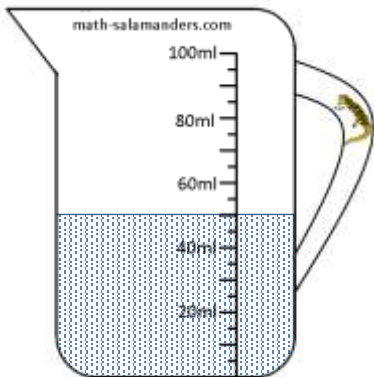
1) How long? _____



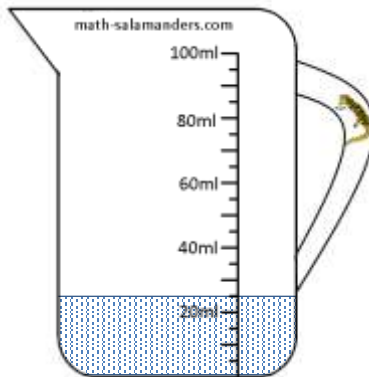
2) How long? _____



3) How much? _____



4) How much? _____



5) How much? _____



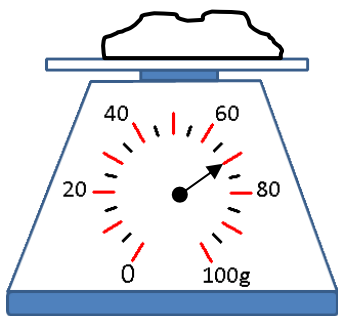
6) How long? _____ cm



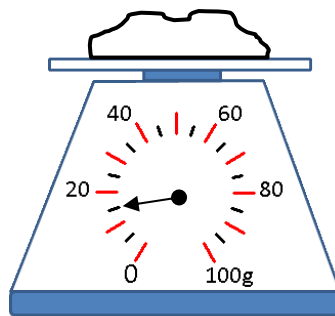
7) How long? _____ cm



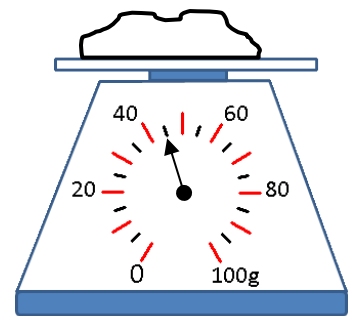
8) How heavy? _____



9) How heavy? _____



10) How heavy? _____



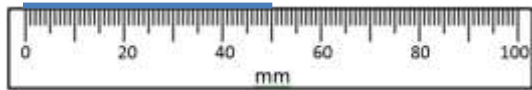
Name

Date

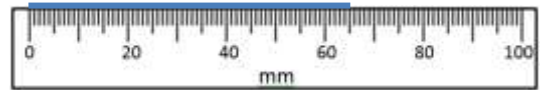


READING SCALES 3C ANSWERS

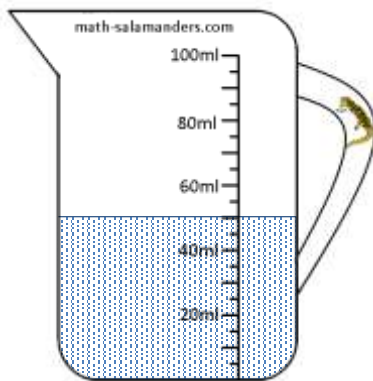
1) How long? 50mm



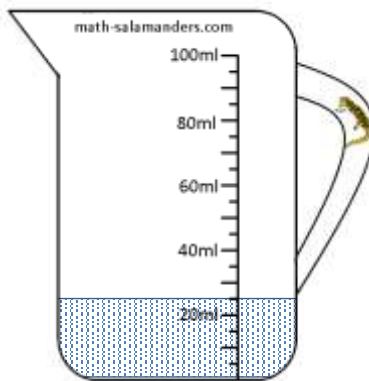
2) How long? 65mm



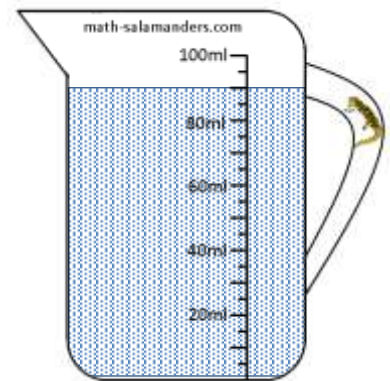
3) How much? 50ml



4) How much? 25ml



5) How much? 90ml



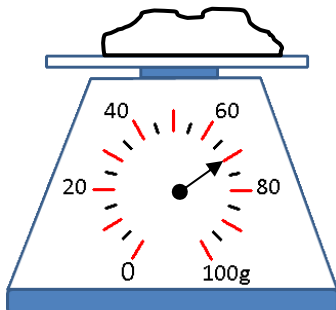
6) How long? 7cm



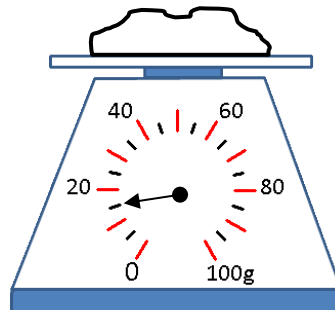
7) How long? 4.5 (or 4 1/2) cm



8) How heavy? 70g



9) How heavy? 15g



10) How heavy? 45g

