

Name \_\_\_\_\_

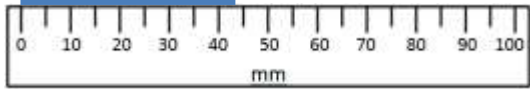
Date \_\_\_\_\_



# READING SCALES 3H - ESTIMATION

Use your knowledge of the number system to estimate these measurements. Remember to include the units of measurement.

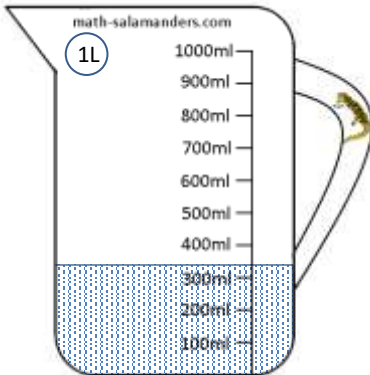
1) How long? \_\_\_\_\_



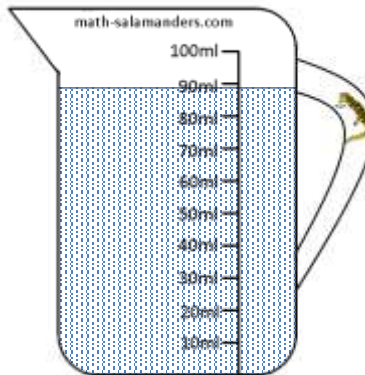
2) How long? \_\_\_\_\_



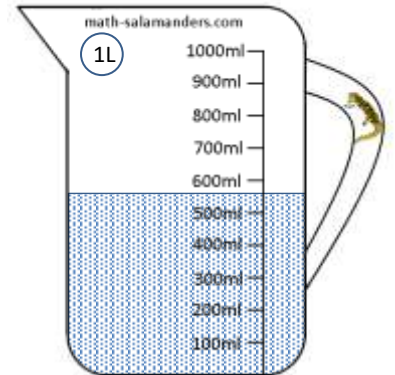
3) How much? \_\_\_\_\_



4) How much? \_\_\_\_\_



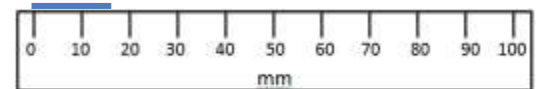
5) How much? \_\_\_\_\_



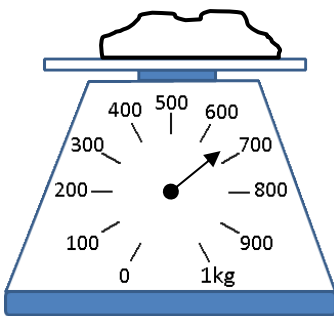
6) How long? \_\_\_\_\_



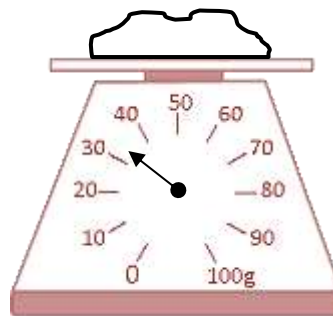
7) How long? \_\_\_\_\_



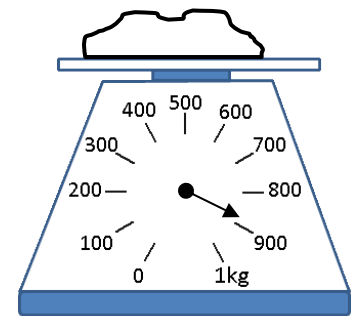
8) How heavy? \_\_\_\_\_



9) How heavy? \_\_\_\_\_



10) How heavy? \_\_\_\_\_



Name

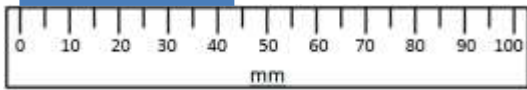
Date



# READING SCALES 3H - ESTIMATION ANSWERS

Please note that all the answers are approximate, and a small degree of inaccuracy is expected.

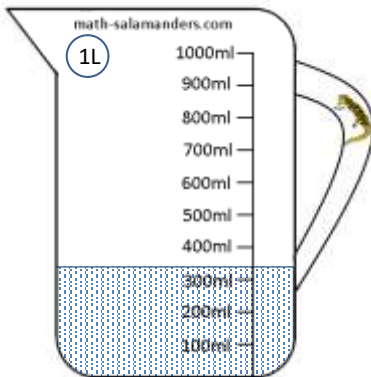
1) How long? 43mm



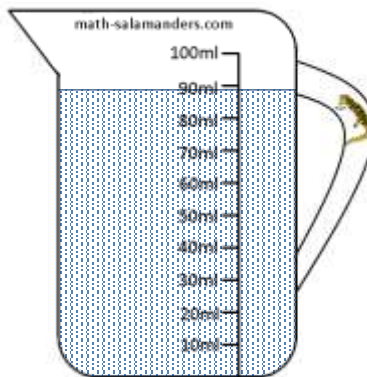
2) How long? 86mm




3) How much? 330ml



4) How much? 88ml



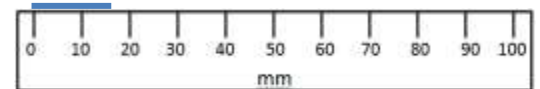
5) How much? 560ml



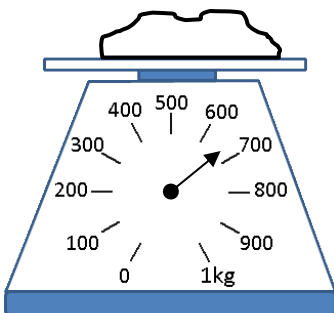
6) How long? 92mm



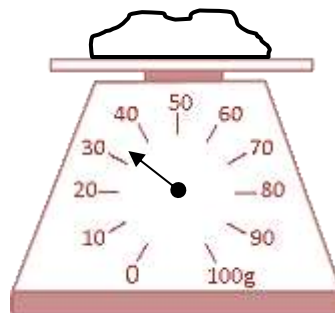
7) How long? 17mm



8) How heavy? 670g



9) How heavy? 33g



10) How heavy? 880g

