

Name _____


Date _____




READING SCALES METRIC 4A

Use your knowledge of fraction and the number system to work out these measurements. Remember to write down the units of measurement.

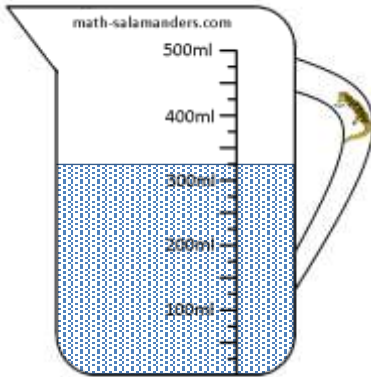
1) How long? _____



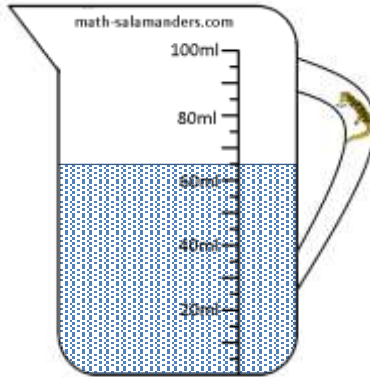
2) How long? _____



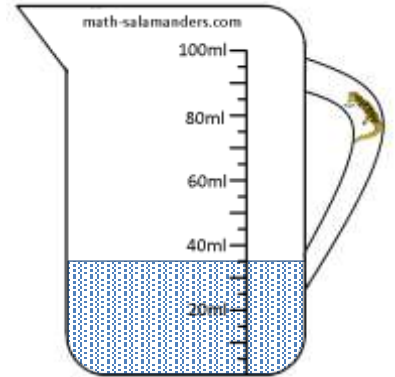
3) How much? _____



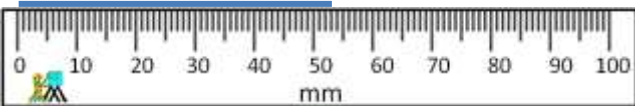
4) How much? _____




5) How much? _____



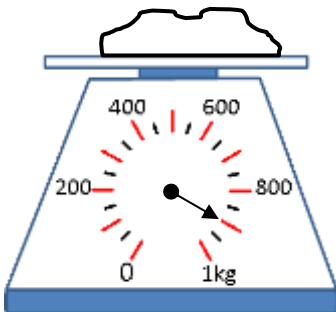
6) How long? _____



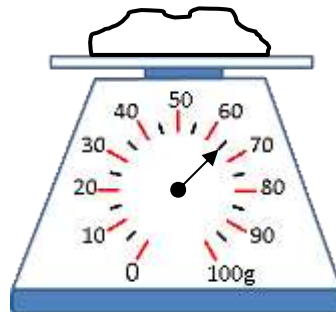
7) How long? _____



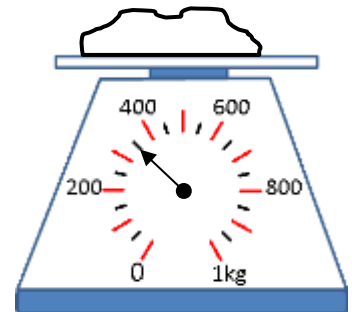
8) How heavy? _____



9) How heavy? _____



10) How heavy? _____



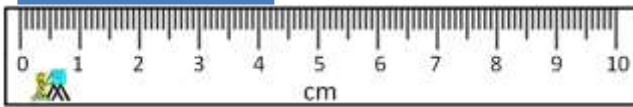
Name

Date




READING SCALES METRIC 4A ANSWERS

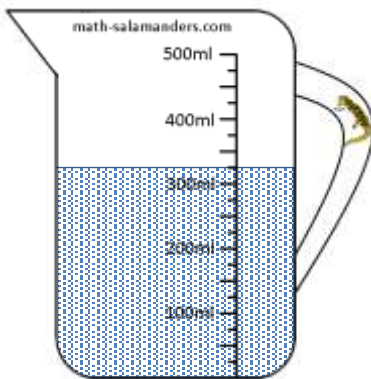
1) How long? 4.3cm



2) How long? 7.2cm



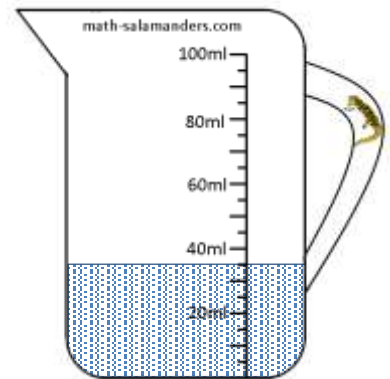
3) How much? 325ml



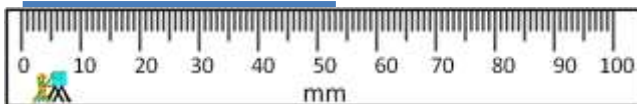
4) How much? 65ml




5) How much? 35ml



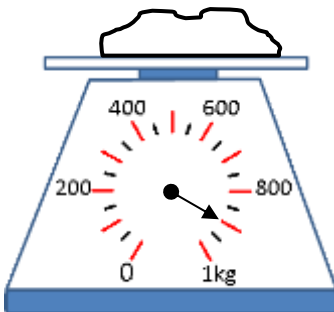
6) How long? 53mm



7) How long? 15mm



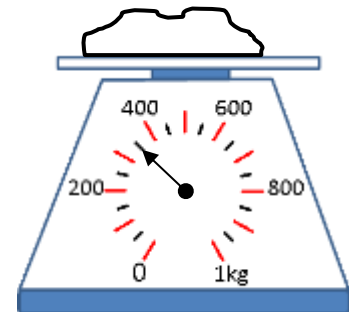
8) How heavy? 900g



9) How heavy? 65g



10) How heavy? 350g



Free Math Sheets, Math Games and Math Help

MATH-SALAMANDERS.COM