

Name \_\_\_\_\_


Date \_\_\_\_\_




# READING SCALES METRIC 4C

Use your knowledge of fraction and the number system to work out these measurements. Remember to write down the units of measurement.

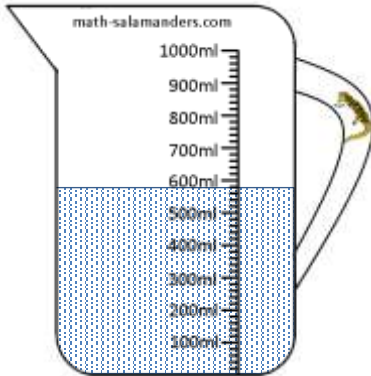
1) How long? \_\_\_\_\_




2) How long? \_\_\_\_\_



3) How much? \_\_\_\_\_



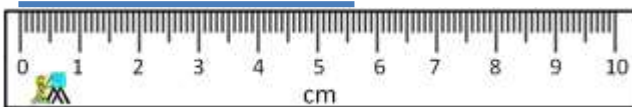
4) How much? \_\_\_\_\_



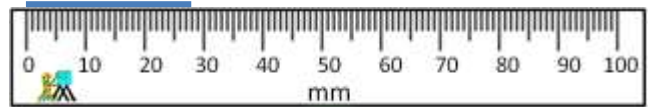
5) How much? \_\_\_\_\_



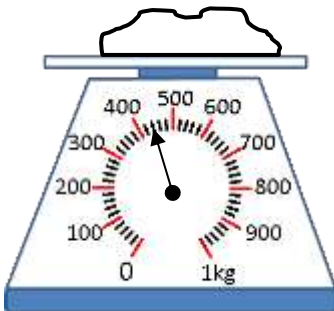
6) How long? \_\_\_\_\_



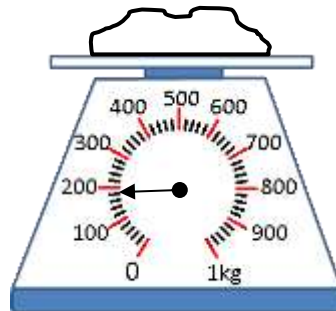
7) How long? \_\_\_\_\_



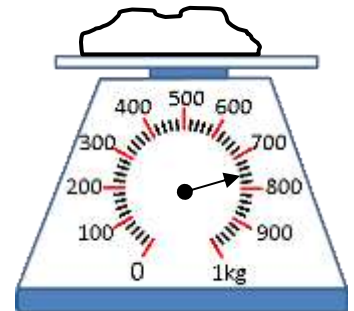
8) How heavy? \_\_\_\_\_



9) How heavy? \_\_\_\_\_



10) How heavy? \_\_\_\_\_



Free Math Sheets, Math Games and Math Help

MATH-SALAMANDERS.COM


Name

Date




# READING SCALES METRIC 4C ANSWERS


1) How long? 9.4cm




2) How long? 38mm



3) How much? 580ml



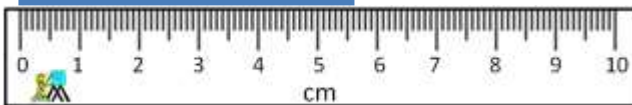
4) How much? 440ml



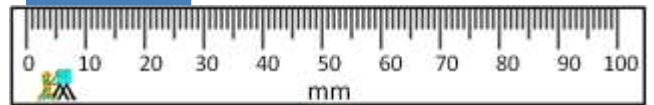
5) How much? 920ml



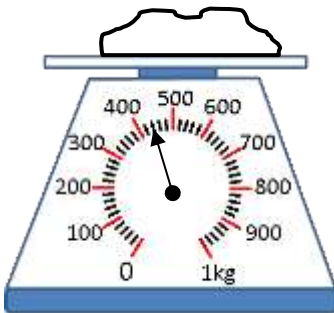
6) How long? 5.6cm



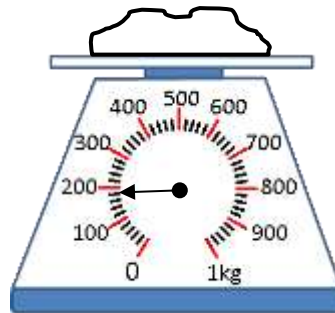
7) How long? 28mm



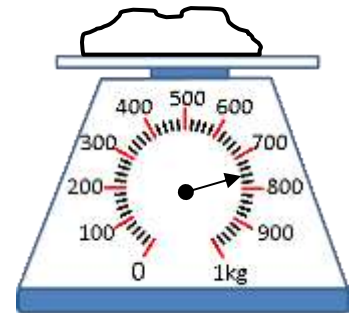
8) How heavy? 440g



9) How heavy? 180g



10) How heavy? 760g



Free Math Sheets, Math Games and Math Help

MATH-SALAMANDERS.COM