

Name \_\_\_\_\_


Date \_\_\_\_\_




# READING SCALES METRIC 4D

Use your knowledge of fraction and the number system to work out these measurements. Remember to write down the units of measurement.

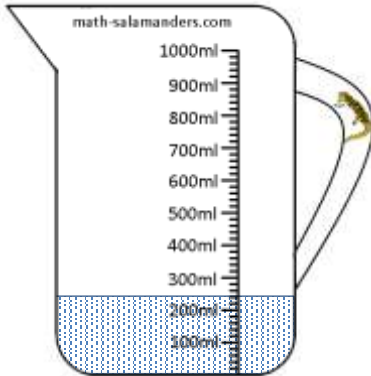
1) How long? \_\_\_\_\_



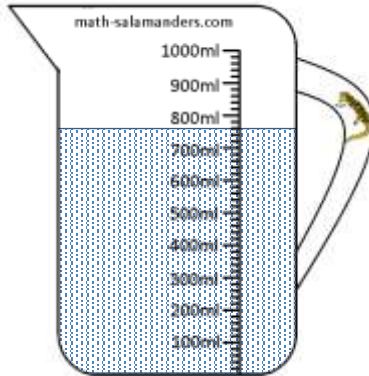
2) How long? \_\_\_\_\_




3) How much? \_\_\_\_\_



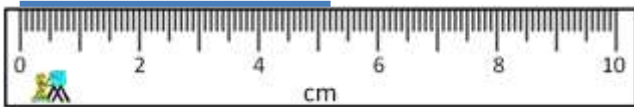
4) How much? \_\_\_\_\_




5) How much? \_\_\_\_\_



6) How long? \_\_\_\_\_



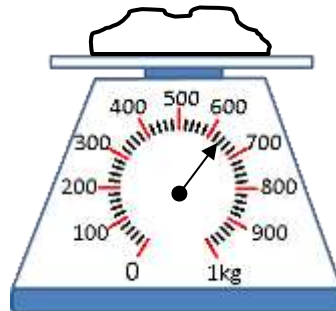
7) How long? \_\_\_\_\_



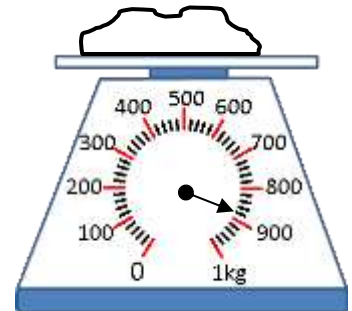
8) How heavy? \_\_\_\_\_



9) How heavy? \_\_\_\_\_



10) How heavy? \_\_\_\_\_




Name

Date




# READING SCALES METRIC 4D ANSWERS


1) How long? 6.7cm



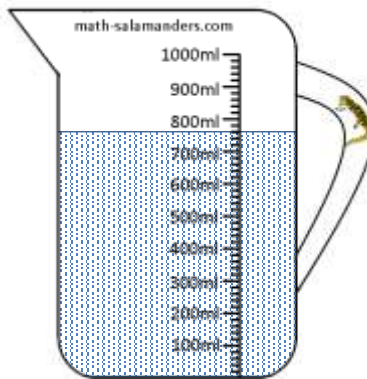
2) How long? 26mm




3) How much? 240ml



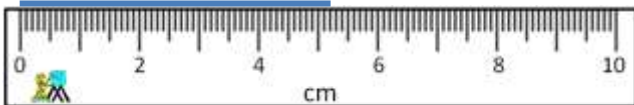
4) How much? 760ml




5) How much? 580ml



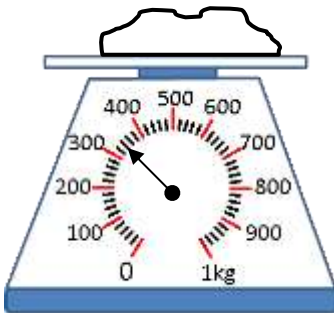
6) How long? 5.2cm



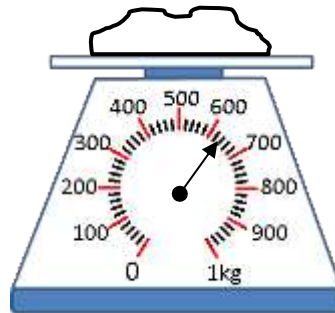
7) How long? 88mm



8) How heavy? 320g



9) How heavy? 640g



10) How heavy? 880g

