

Name _____

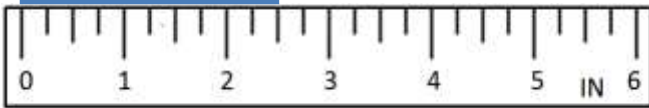
Date _____



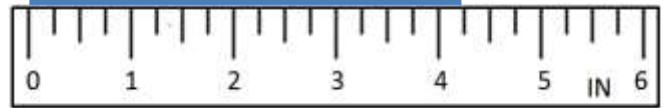
READING SCALES STANDARD 4A

Use your knowledge of fraction and the number system to work out these measurements.


1) How many inches? _____



2) How many inches? _____



3) How much? _____



4) How much? _____



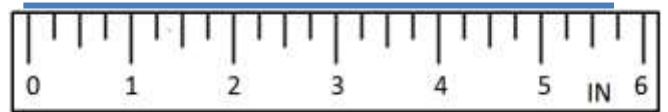
5) How much? _____



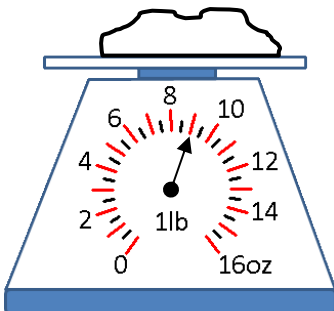
6) How many inches? _____



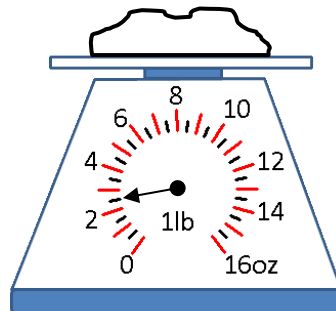
7) How many inches? _____



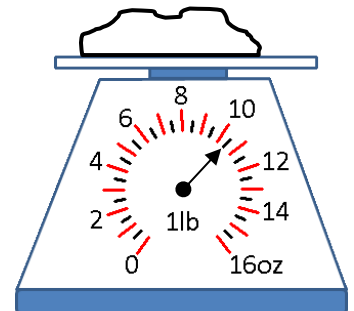
8) How heavy? _____



9) How heavy? _____



10) How heavy? _____



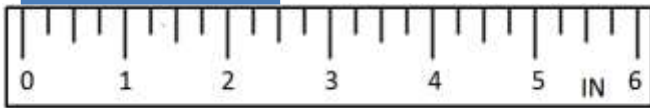
Name

Date



READING SCALES STANDARD 4A ANSWERS


1) How many inches? $2\frac{1}{2}$



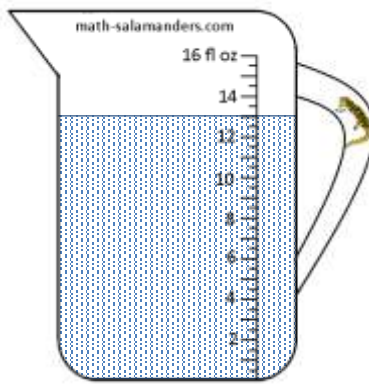
2) How many inches? $4\frac{1}{4}$



3) How much? 9 fl oz



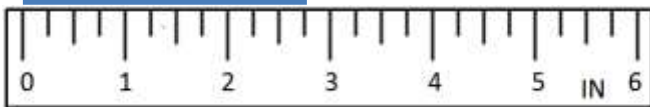
4) How much? 13 fl oz



5) How much? $6\frac{1}{2}$ fl oz



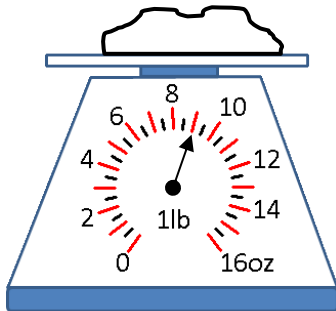
6) How many inches? $2\frac{3}{4}$



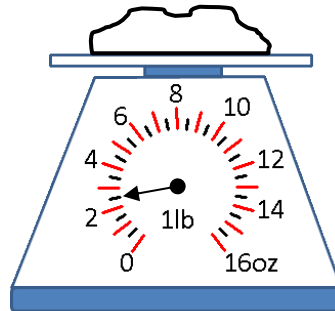
7) How many inches? $5\frac{3}{4}$



8) How heavy? 9 oz



9) How heavy? $2\frac{1}{2}$ oz



10) How heavy? $10\frac{1}{2}$ oz

