

Name _____

Date _____



READING SCALES STANDARD 4B

Use your knowledge of fraction and the number system to work out these measurements.


1) How many inches? _____




2) How many inches? _____



3) How much? _____



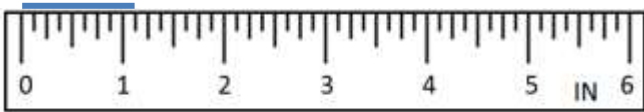
4) How much? _____



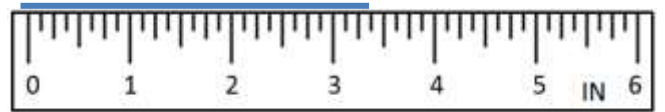
5) How much? _____



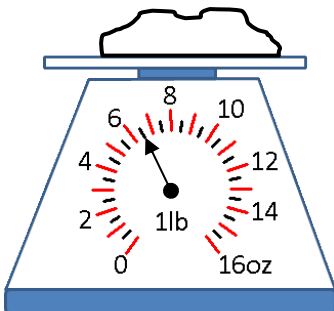
6) How many inches? _____



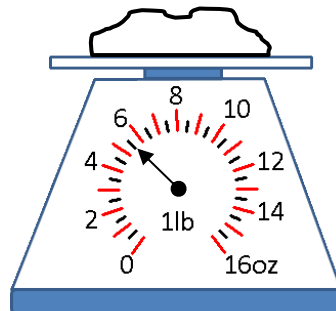
7) How many inches? _____



8) How heavy? _____



9) How heavy? _____



10) How heavy? _____




Name _____

Date _____



READING SCALES STANDARD 4B ANSWERS


1) How many inches? $4 \frac{1}{2}$




2) How many inches? $2 \frac{3}{4}$ (or $2 \frac{6}{8}$)



3) How much? $6 \frac{1}{2}$ fl oz




4) How much? $11 \frac{1}{2}$ fl oz



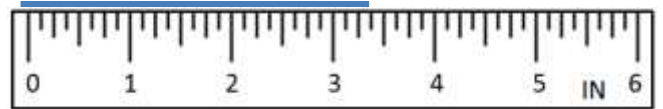
5) How much? $14 \frac{1}{2}$ fl oz



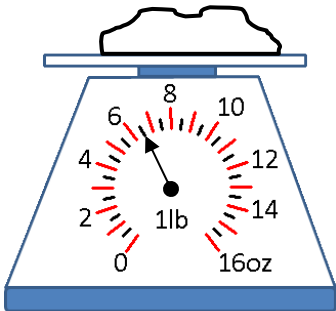
6) How many inches? $1 \frac{1}{8}$



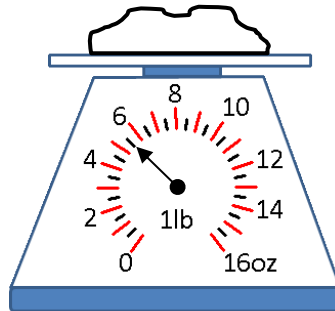
7) How many inches? $3 \frac{3}{8}$



8) How heavy? $6 \frac{1}{2}$ oz



9) How heavy? $5 \frac{1}{2}$ oz



10) How heavy? 15 oz

