

Name \_\_\_\_\_


Date \_\_\_\_\_



# READING SCALES STANDARD 4C

Use your knowledge of fraction and the number system to work out these measurements. Remember to write down the units of measurement.

1) How long? \_\_\_\_\_



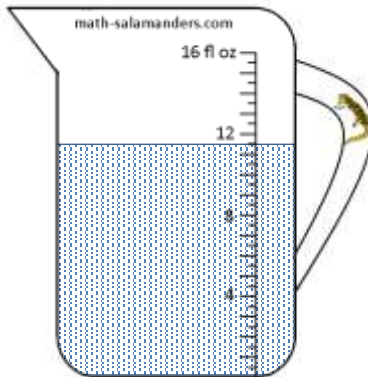
2) How long? \_\_\_\_\_



3) How much? \_\_\_\_\_



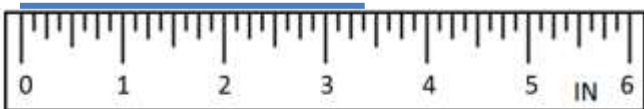
4) How much? \_\_\_\_\_



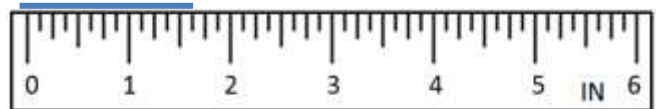
5) How much? \_\_\_\_\_



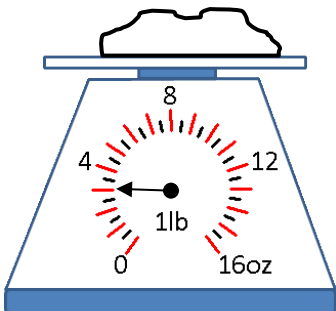
6) How long? \_\_\_\_\_



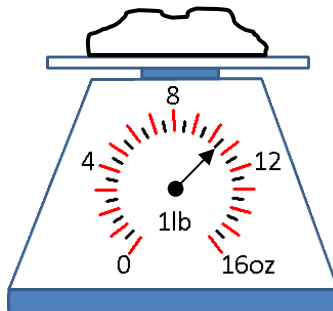
7) How long? \_\_\_\_\_



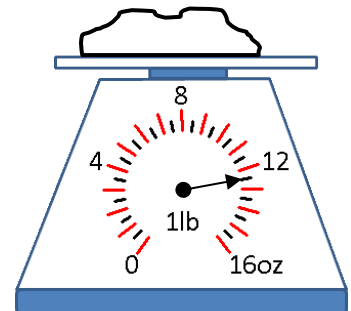
8) How heavy? \_\_\_\_\_



9) How heavy? \_\_\_\_\_



10) How heavy? \_\_\_\_\_




Name

Date



# READING SCALES STANDARD 4C ANSWERS


1) How long?  $2 \frac{7}{8}$  in



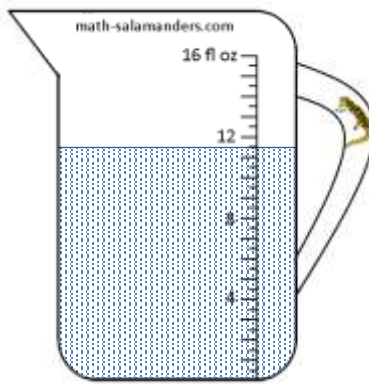
2) How long?  $5 \frac{1}{4}$  in



3) How much?  $6 \frac{1}{2}$  fl oz




4) How much?  $11 \frac{1}{2}$  oz




5) How much?  $14 \frac{1}{2}$  oz



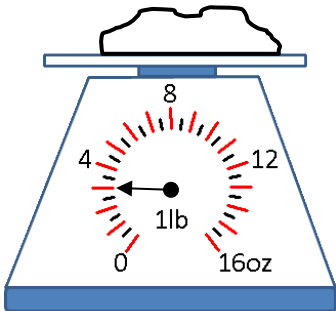
6) How long?  $3 \frac{3}{8}$  in



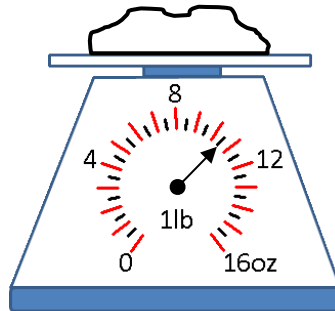
7) How long?  $1 \frac{5}{8}$  in



8) How heavy? 3 oz



9) How heavy?  $10 \frac{1}{2}$  oz



10) How heavy?  $12 \frac{1}{2}$  oz

