

Name _____


Date _____



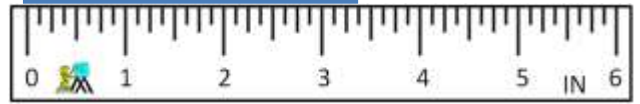
READING SCALES 5D

Use your knowledge of fraction and the number system to work out these measurements. The measurements are in both standard and metric form.

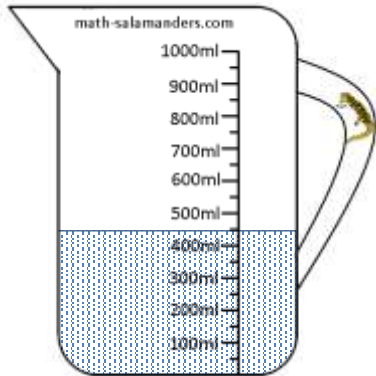
1) How long? _____




2) How long? _____



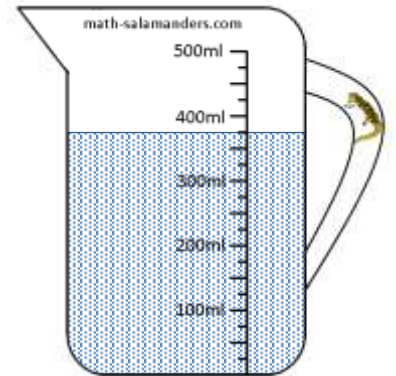
3) How much? _____



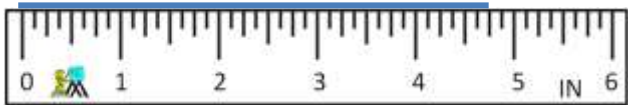
4) How much? _____




5) How much? _____



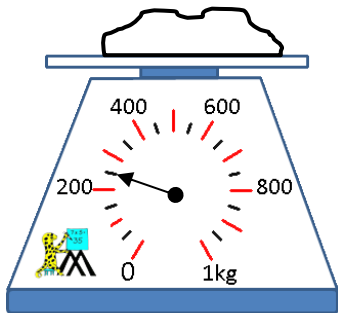
6) How long? _____



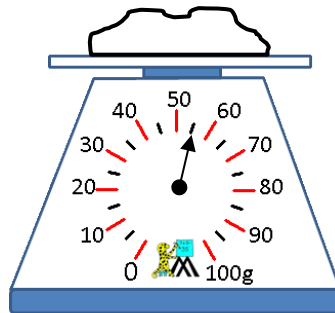
7) How long? _____



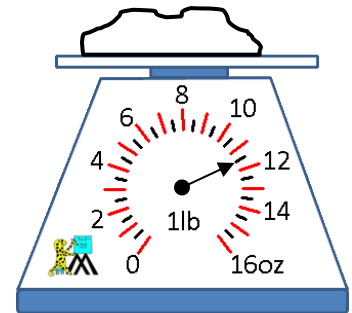
8) How heavy? _____



9) How heavy? _____



10) How heavy? _____




Name

Date




READING SCALES 5D ANSWERS

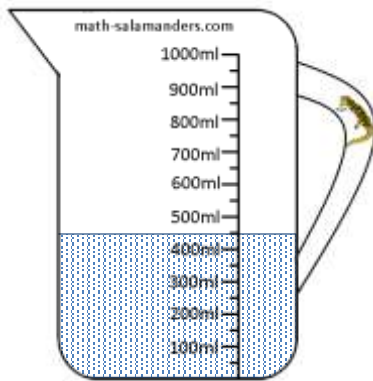
1) How long? 4.3cm




2) How long? 3 3/8 in



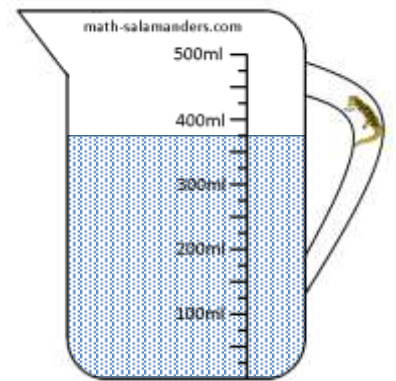
3) How much? 450ml




4) How much? 8 1/2 fl oz



5) How much? 375ml



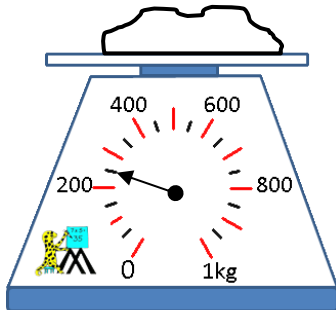
6) How long? 4 3/4 in



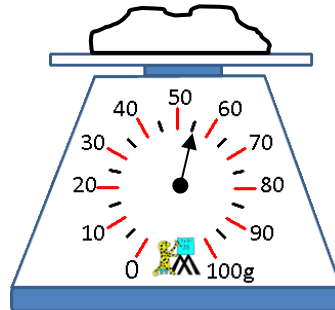
7) How long? 87mm



8) How heavy? 250g



9) How heavy? 55g



10) How heavy? 11 1/2 oz



Free Math Sheets, Math Games and Math Help

MATH-SALAMANDERS.COM