

Name _____


Date _____



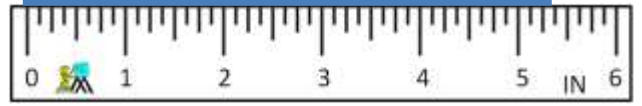
READING SCALES 5E

Use your knowledge of fraction and the number system to work out these measurements. The measurements are in both standard and metric form.

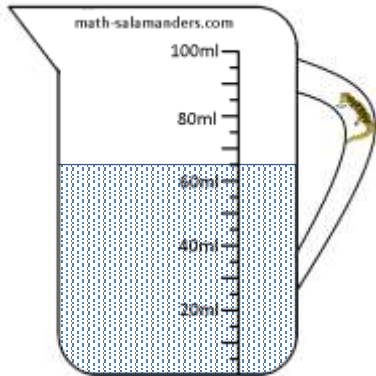
1) How long? _____




2) How long? _____



3) How much? _____




4) How much? _____



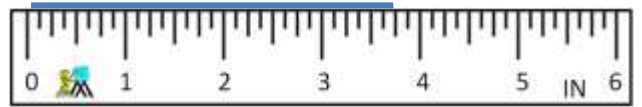
5) How much? _____



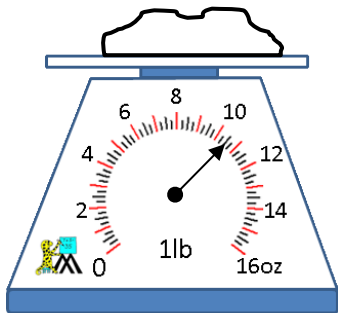
6) How long? _____



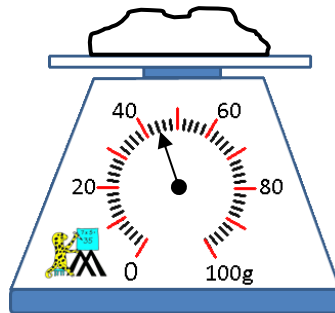
7) How long? _____



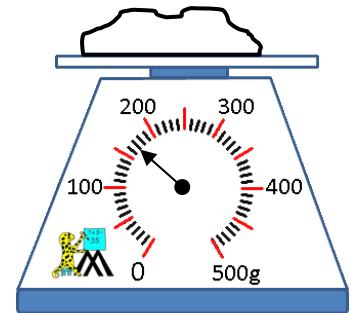
8) How heavy? _____



9) How heavy? _____



10) How heavy? _____




Name

Date




READING SCALES 5E ANSWERS

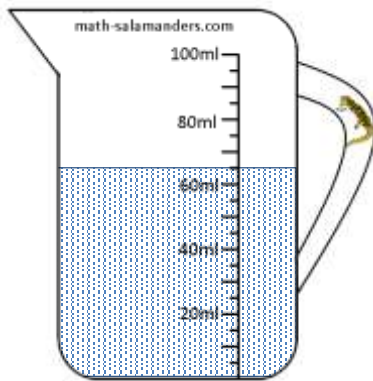
1) How long? 6.8cm



2) How long? 5 3/8 in



3) How much? 65ml




4) How much? 5 1/2 fl oz



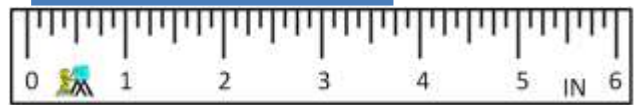
5) How much? 250ml



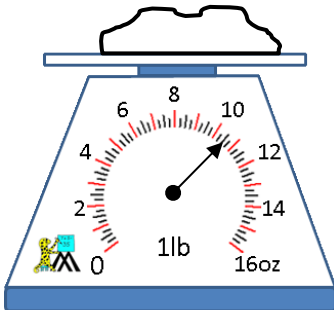
6) How long? 46mm



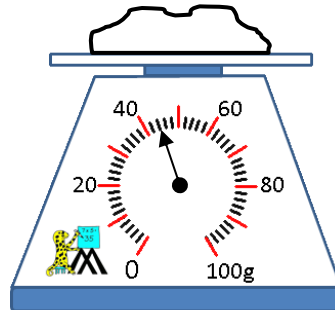
7) How long? 3 3/4 in



8) How heavy? 10 1/2 oz



9) How heavy? 44g



10) How heavy? 170g

