

Name \_\_\_\_\_


Date \_\_\_\_\_




# READING SCALES 5F

Use your knowledge of fraction and the number system to work out these measurements. The measurements are in both standard and metric form.


1) How long? \_\_\_\_\_



2) How long? \_\_\_\_\_



3) How much? \_\_\_\_\_



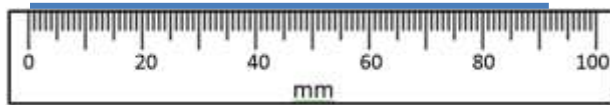
4) How much? \_\_\_\_\_



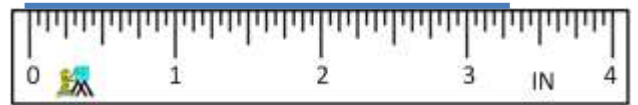
5) How much? \_\_\_\_\_



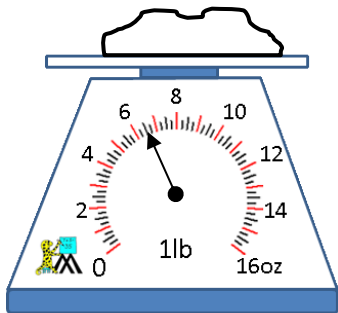
6) How long? \_\_\_\_\_



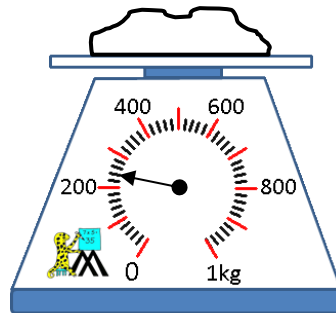
7) How long? \_\_\_\_\_



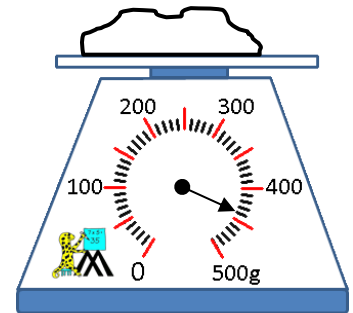
8) How heavy? \_\_\_\_\_



9) How heavy? \_\_\_\_\_



10) How heavy? \_\_\_\_\_




Name

Date




# READING SCALES STANDARD 5F ANSWERS


1) How long? 5.2cm



2) How long? 2 5/8 in



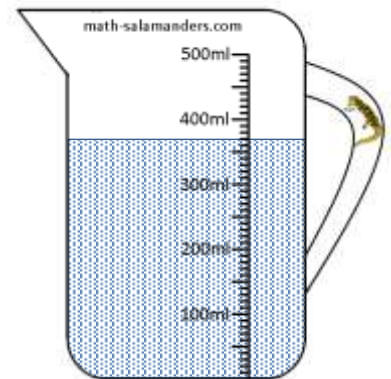
3) How much? 440ml



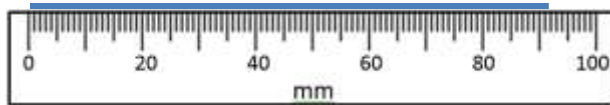
4) How much? 9 1/2 fl oz



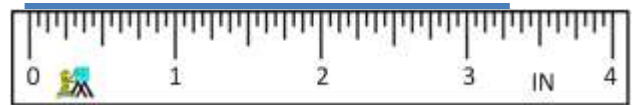
5) How much? 370ml



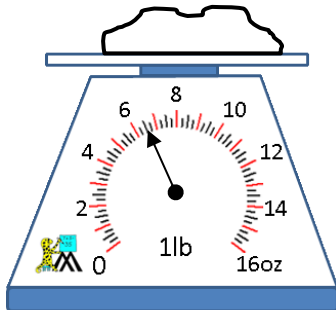
6) How long? 92mm



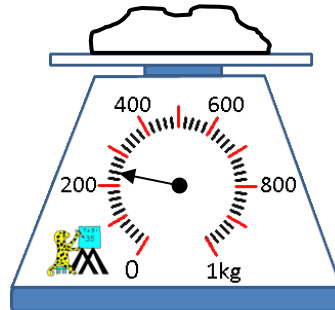
7) How long? 3 5/16 in



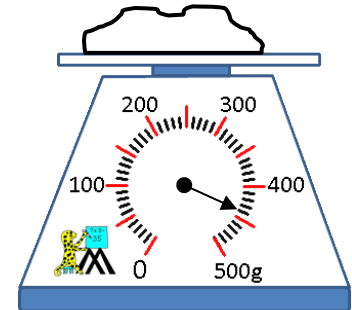
8) How heavy? 6 1/2 oz



9) How heavy? 240g



10) How heavy? 440g



Free Math Sheets, Math Games and Math Help

MATH-SALAMANDERS.COM