

Name \_\_\_\_\_


Date \_\_\_\_\_



# READING SCALES METRIC 5A

Use your knowledge of fraction and the number system to work out these measurements. Remember to write down the units of measurement.

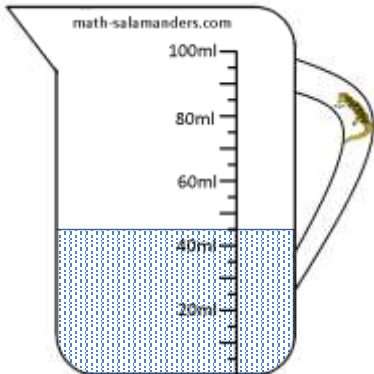
1) How long? \_\_\_\_\_



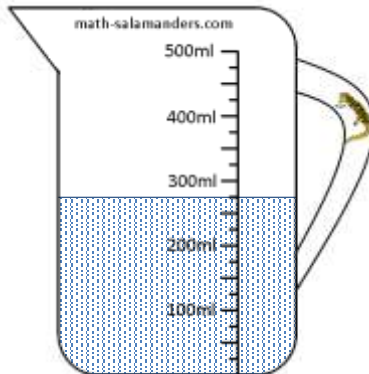
2) How long? \_\_\_\_\_



3) How much? \_\_\_\_\_




4) How much? \_\_\_\_\_




5) How much? \_\_\_\_\_



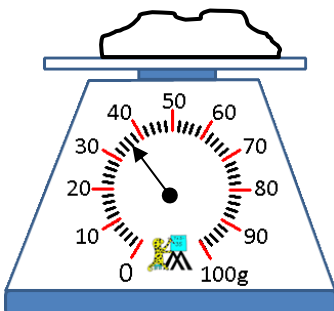
6) How long? \_\_\_\_\_



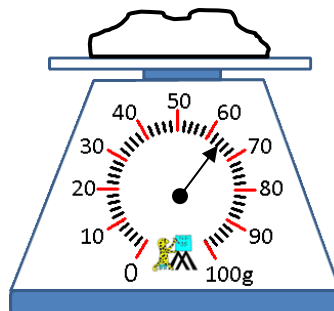
7) How long? \_\_\_\_\_



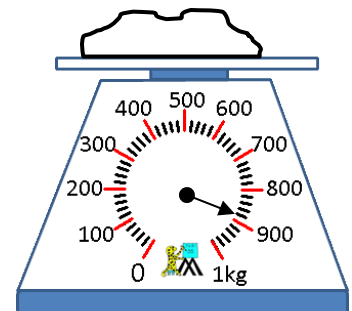
8) How heavy? \_\_\_\_\_



9) How heavy? \_\_\_\_\_



10) How heavy? \_\_\_\_\_




Name \_\_\_\_\_

Date \_\_\_\_\_




# READING SCALES STANDARD 5A ANSWERS

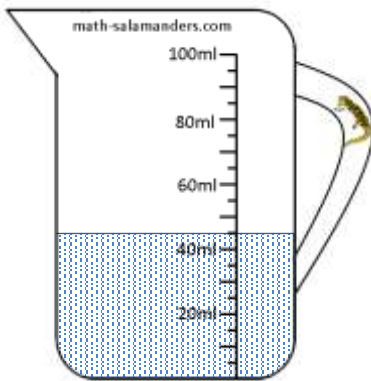
1) How long? 6.8cm



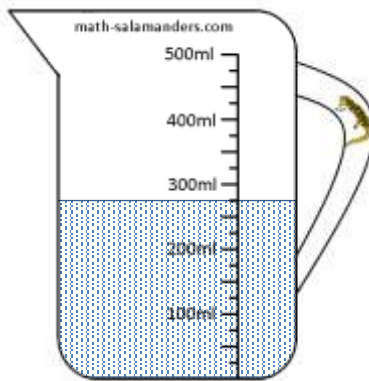
2) How long? 62mm



3) How much? 45ml




4) How much? 275ml



5) How much? 900ml



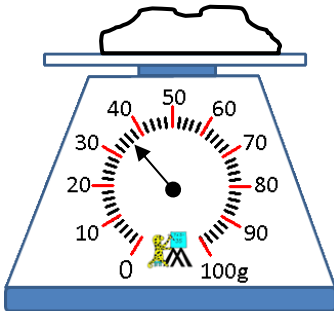
6) How long? 1.7cm



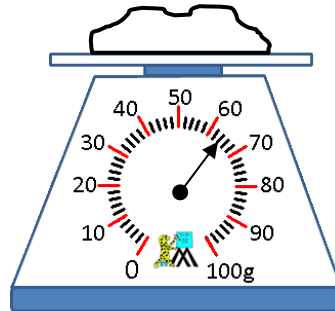
7) How long? 74mm



8) How heavy? 36g



9) How heavy? 64g



10) How heavy? 880g

