

Name _____

Date _____




READING SCALES STANDARD 5A

Use your knowledge of fraction and the number system to work out these measurements. Remember to write down the units of measurement.

1) How long? _____



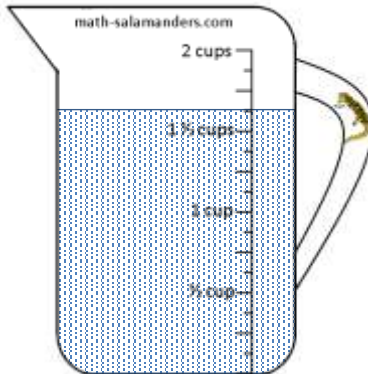
2) How long? _____



3) How many cups? _____



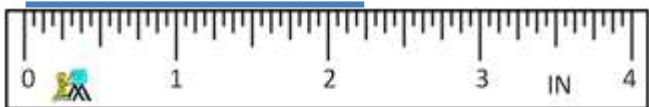
4) How many cups? _____



5) How many cups? _____



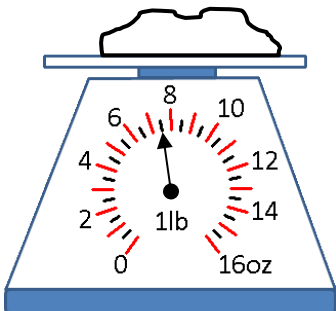
6) How long? _____



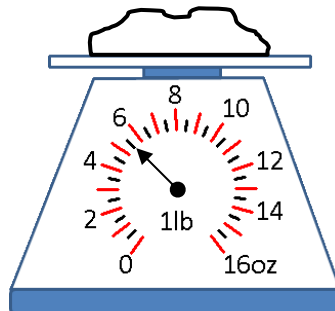
7) How long? _____



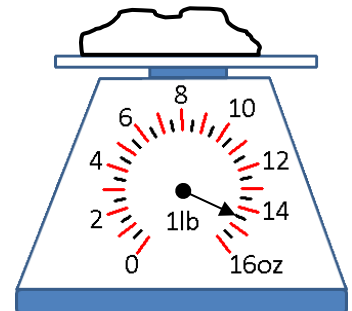
8) How heavy? _____



9) How heavy? _____



10) How heavy? _____




Name

Date




READING SCALES STANDARD 5A ANSWERS


1) How long? $3\frac{7}{8}$ in



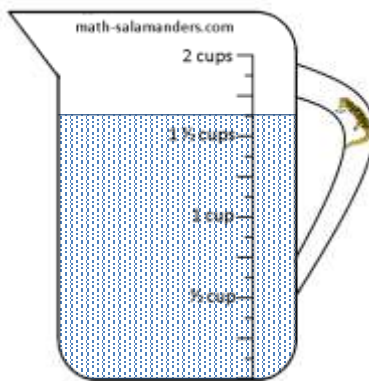
2) How long? $1\frac{1}{4}$ in



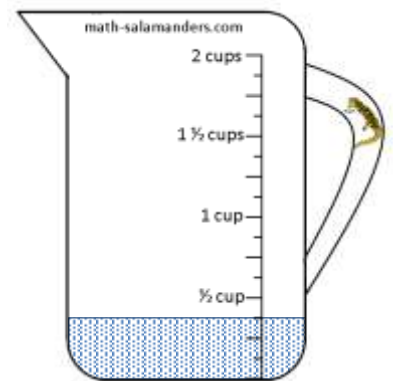
3) How many cups? $1\frac{1}{8}$



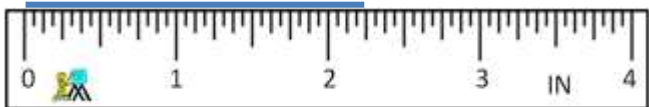
4) How many cups? $1\frac{5}{8}$



5) How many cups? $\frac{3}{8}$



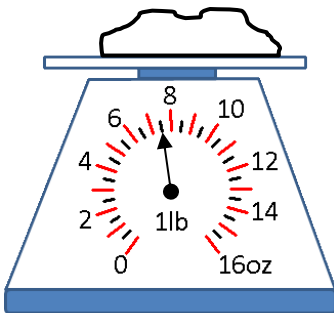
6) How long? $2\frac{1}{4}$ in



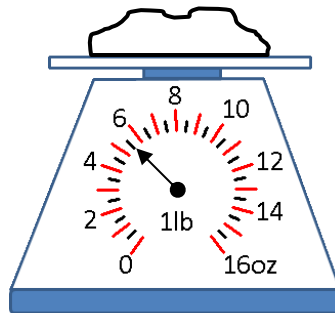
7) How long? $3\frac{3}{8}$ in



8) How heavy? $7\frac{1}{2}$ oz



9) How heavy? $5\frac{1}{2}$ oz



10) How heavy? $14\frac{1}{2}$ oz

