

Name _____


Date _____




READING SCALES STANDARD 5B

Use your knowledge of fraction and the number system to work out these measurements. Remember to write down the units of measurement.


1) How long? _____



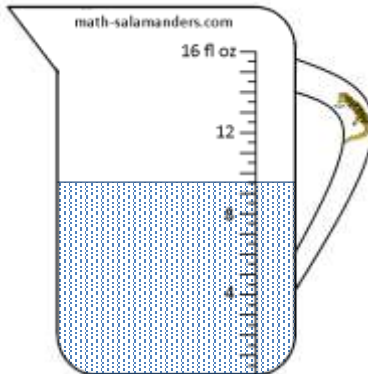
2) How long? _____



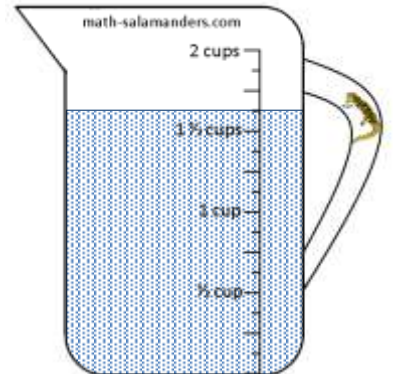
3) How many cups? _____



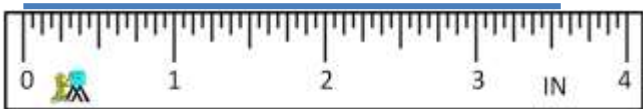
4) How much? _____




5) How many cups? _____



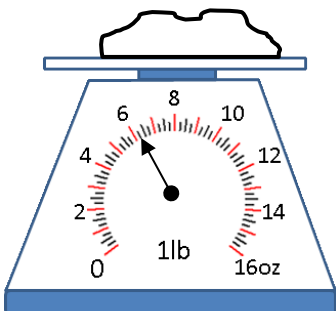
6) How long? _____



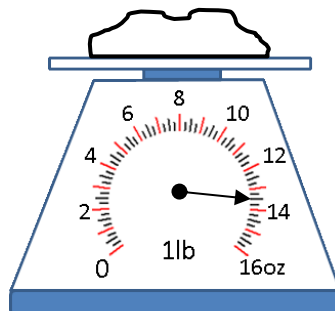
7) How long? _____



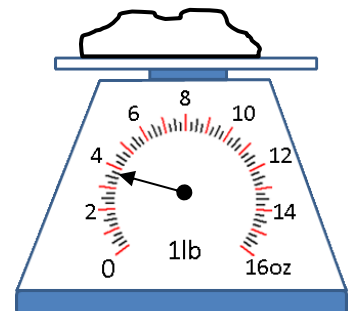
8) How heavy? _____



9) How heavy? _____



10) How heavy? _____



Name

Date




READING SCALES STANDARD 5B ANSWERS


1) How long? $2\frac{9}{16}$ in



2) How long? $1\frac{5}{8}$ in




3) How many cups? $\frac{7}{8}$



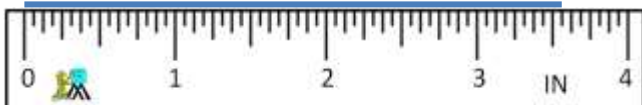
4) How much? $9\frac{1}{2}$ fl oz




5) How many cups? $1\frac{5}{8}$



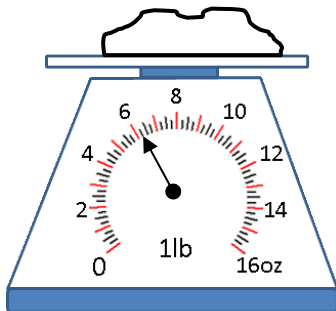
6) How long? $3\frac{9}{16}$ in



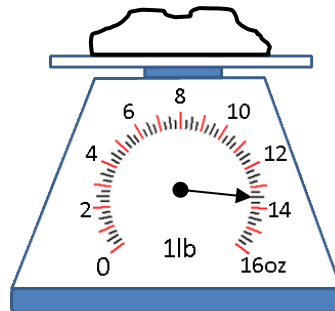
7) How long? $1\frac{1}{4}$ in



8) How heavy? $6\frac{1}{4}$ oz



9) How heavy? $13\frac{1}{2}$ oz



10) How heavy? $3\frac{3}{4}$ oz

