

Name _____


Date _____




READING SCALES STANDARD 5C

Use your knowledge of fraction and the number system to work out these measurements. Remember to write down the units of measurement.

1) How long? _____



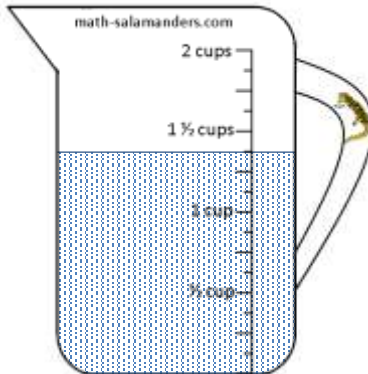
2) How long? _____



3) How much? _____



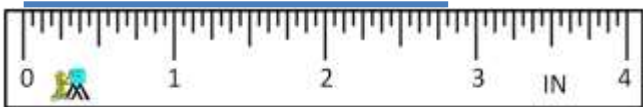
4) How much? _____




5) How much? _____



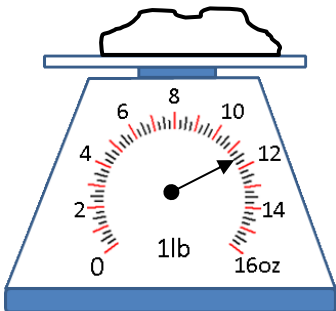
6) How long? _____



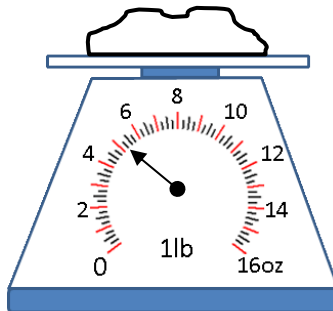
7) How long? _____



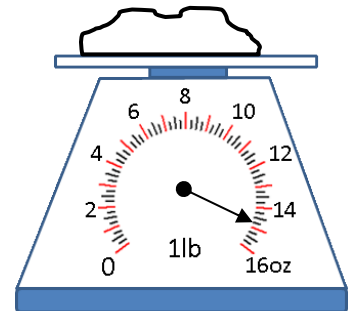
8) How heavy? _____



9) How heavy? _____



10) How heavy? _____




Name

Date



READING SCALES STANDARD 5C ANSWERS

1) How long? $1\frac{3}{16}$ in



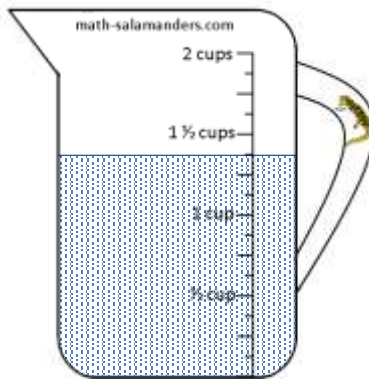
2) How long? $2\frac{1}{16}$ in



3) How much? $10\frac{1}{2}$ fl oz



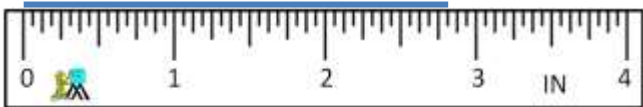
4) How much? $1\frac{3}{8}$ cups




5) How much? $14\frac{1}{2}$ fl oz



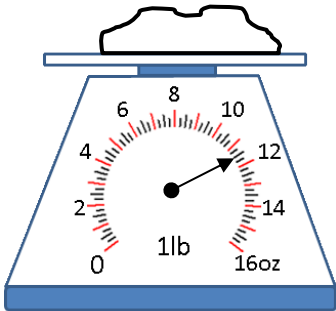
6) How long? $2\frac{13}{16}$ in



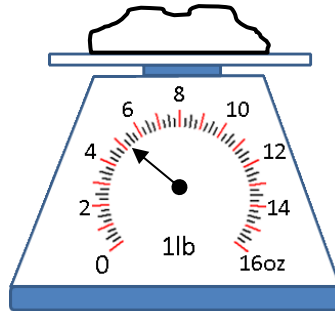
7) How long? $3\frac{11}{16}$ in



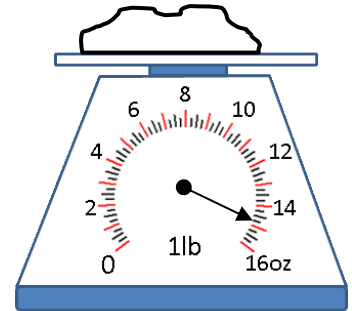
8) How heavy? $11\frac{1}{2}$ oz



9) How heavy? $5\frac{1}{4}$ oz



10) How heavy? $14\frac{3}{4}$ oz



Free Math Sheets, Math Games and Math Help

MATH-SALAMANDERS.COM