

Name _____

Date _____



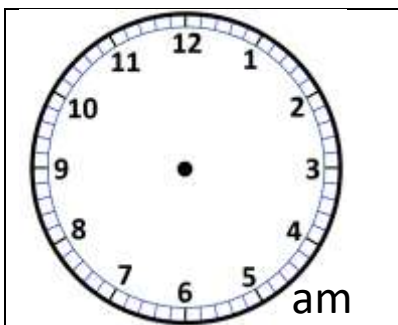
CONVERTING 24- TO 12-HOUR CLOCK TIMES SHEET 2

1) Convert these 24-hour times into am and pm times.

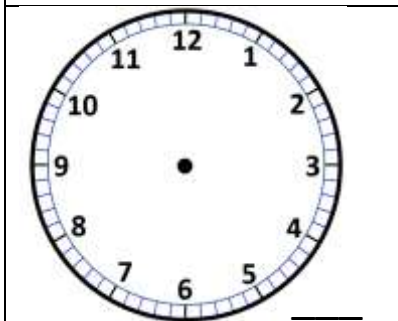
24-hour	12-hour
13:25	1:25pm
10:50	
16:41	
05:37	
12:10	
09:29	
17:02	

24-hour	12-hour
18:53	
22:05	
07:54	
00:17	
02:50	
21:12	
23:46	

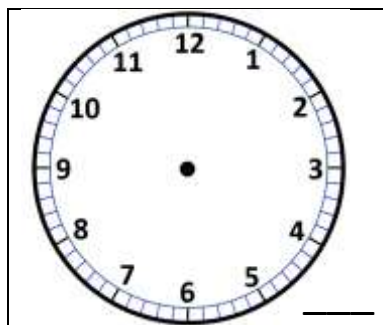
2) Draw the correct time on the clock faces to match the 24 clock time.
Write down 'am' or 'pm' in the bottom corner of each clock.



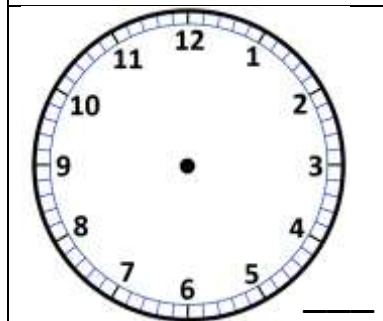
06:25



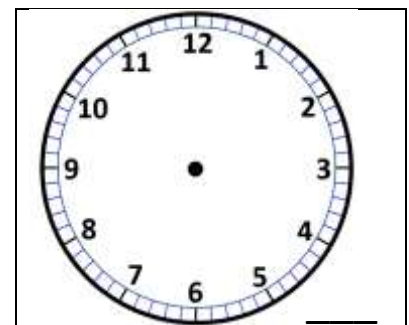
18:05



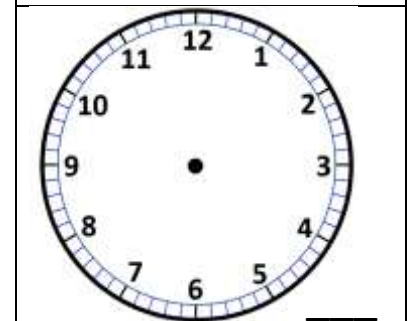
14:50



22:20



00:15



15:55



Free Math Sheets, Math Games and Math Help

MATH-SALAMANDERS.COM

Name

Date



CONVERTING 24- TO 12-HOUR CLOCK TIMES

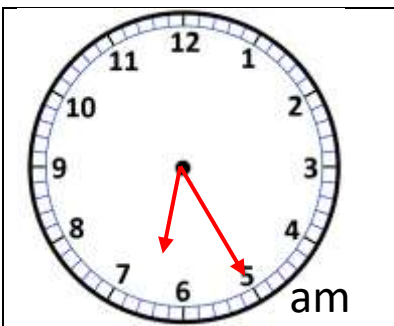
SHEET 2 ANSWERS

1) Convert these 24 hour times into am and pm times.

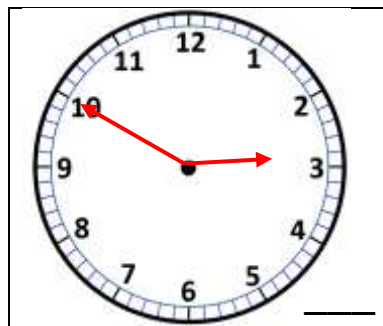
24-hour	12-hour
13:25	1:25pm
10:50	<u>10:50am</u>
16:41	<u>4:41pm</u>
05:37	<u>5:37am</u>
12:10	<u>12:10pm</u>
09:29	<u>9:29am</u>
17:02	<u>5:02pm</u>

24-hour	12-hour
18:53	<u>6:53pm</u>
22:05	<u>10:05pm</u>
07:54	<u>7:54am</u>
00:17	<u>12:17am</u>
02:50	<u>2:50am</u>
21:12	<u>9:12pm</u>
23:46	<u>11:46pm</u>

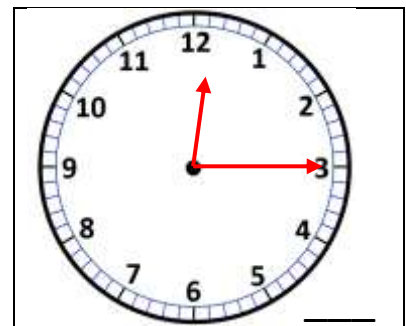
2) Draw the correct time on the clock faces to match the 24 clock time.
Write down 'am' or 'pm' in the bottom corner of each clock.



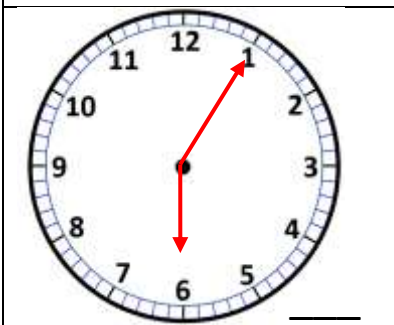
06:25



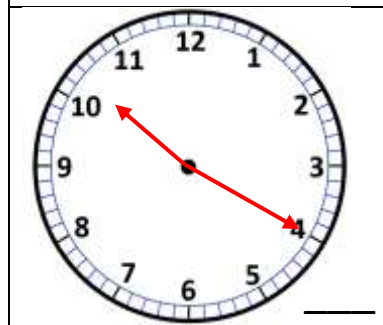
14:50



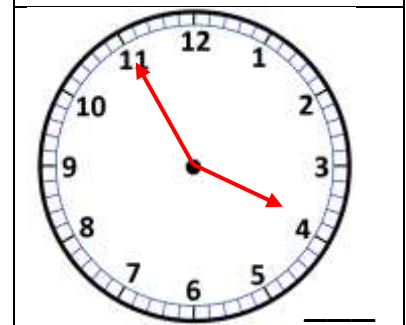
00:15



18:05



22:20



15:55



Free Math Sheets, Math Games and Math Help

MATH-SALAMANDERS.COM