

Name

Date



# CONVERTING 24-HOUR CLOCK TIMES SHEET 3

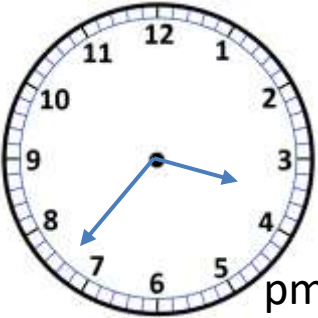
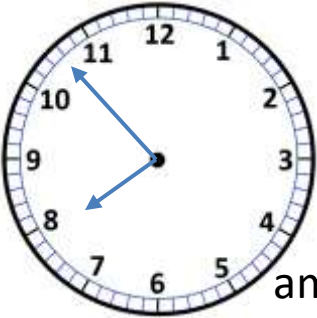
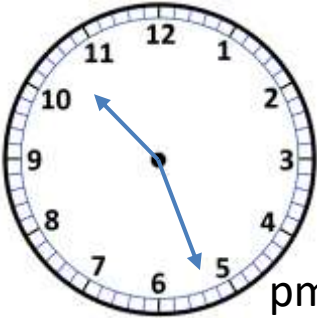
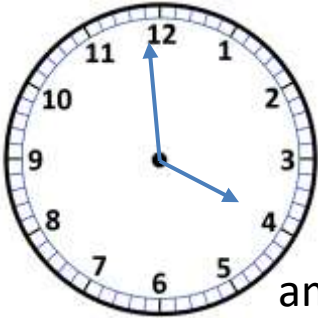
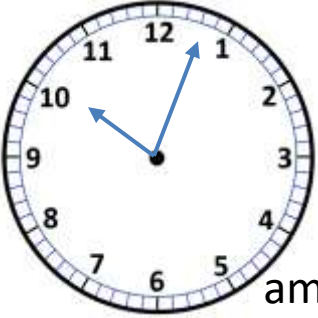
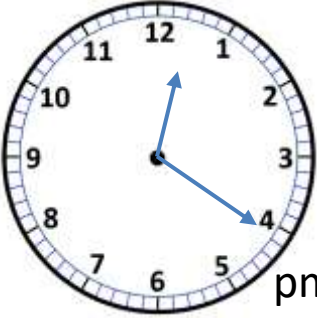
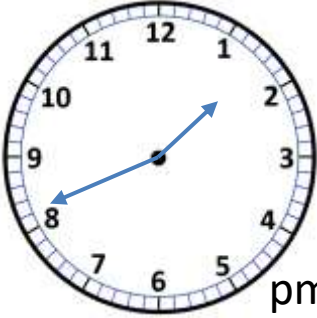
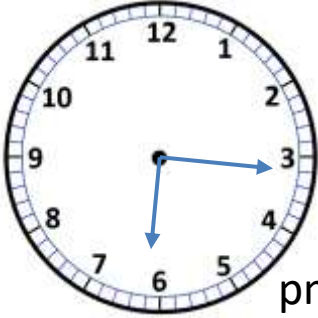
Convert these am and pm times into the 24 hour clock:

1)	1:24pm =	2)	2:56am =	3)	7:45pm =
4)	5:16am =	5)	3:56pm =	6)	12:25pm =
7)	11:27pm =	8)	8:13pm =	9)	12:42am =

Convert these 24 hour clock times to am and pm times:

1)	13:41 =	2)	17:50 =	3)	04:32 =
4)	12:36 =	5)	23:25 =	6)	08:53 =
7)	00:51 =	8)	19:08 =	9)	15:39 =

Write the correct 24 hour clock time with each analogue clock.

 pm	 am	 pm	 am
 am	 pm	 pm	 pm



Free Math Sheets, Math Games and Math Help

MATH-SALAMANDERS.COM

Name

Date



## CONVERTING 24-HOUR CLOCK TIMES SHEET 3 ANSWERS

1)	1:24pm = <u>13:24</u>	2)	2:56am = <u>02:56</u>	3)	7:45pm = <u>19:45</u>
4)	5:16am = <u>05:16</u>	5)	3:56pm = <u>15:56</u>	6)	12:25pm = <u>12:25</u>
7)	11:27pm = <u>23:27</u>	8)	8:13pm = <u>20:13</u>	9)	12:42am = <u>00:42</u>

1)	13:41 = <u>1:41pm</u>	2)	17:50 = <u>5:50pm</u>	3)	04:32 = <u>4:32am</u>
4)	12:36 = <u>12:36pm</u>	5)	23:25 = <u>11:25pm</u>	6)	08:53 = <u>8:53am</u>
7)	00:51 = <u>12:51am</u>	8)	19:08 = <u>7:08pm</u>	9)	15:39 = <u>3:39pm</u>

<u>15:37</u>	<u>07:48</u>	<u>22:27</u>	<u>03:59</u>
<u>10:03</u>	<u>12:21</u>	<u>13:41</u>	<u>18:16</u>



Free Math Sheets, Math Games and Math Help

[MATH-SALAMANDERS.COM](http://MATH-SALAMANDERS.COM)