

Name \_\_\_\_\_

Date \_\_\_\_\_



# TELLING THE TIME - O'CLOCK & HALF PAST SHEET 3

For each time, you need to either draw in the hands or write the time.

		Half past 10
1 o'clock		Half past 3

Complete the missing digital times:

Half past 2 → \_\_\_:\_\_\_    4 o'clock → \_\_\_:\_\_\_    Half past 12 → \_\_\_:\_\_\_



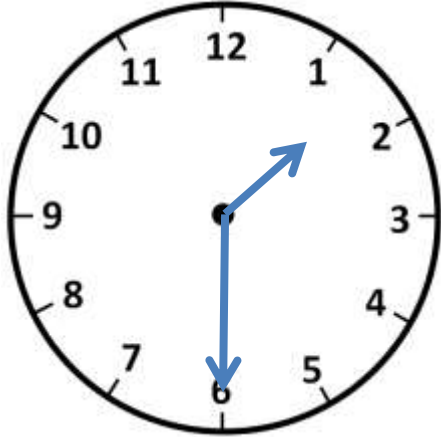
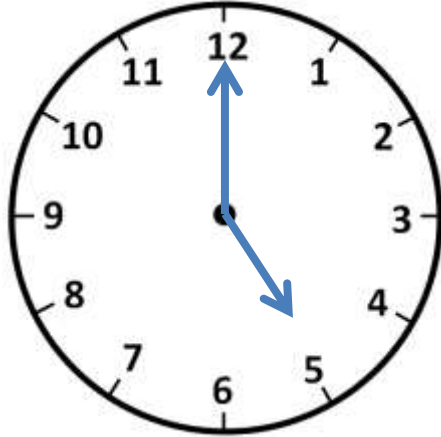
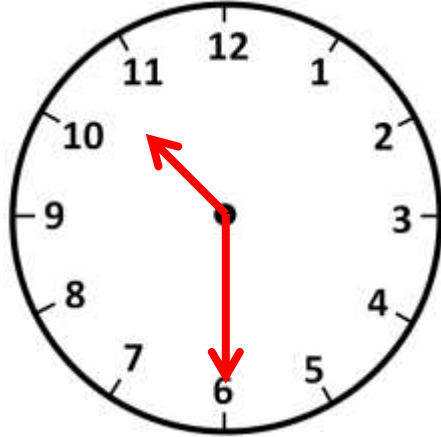
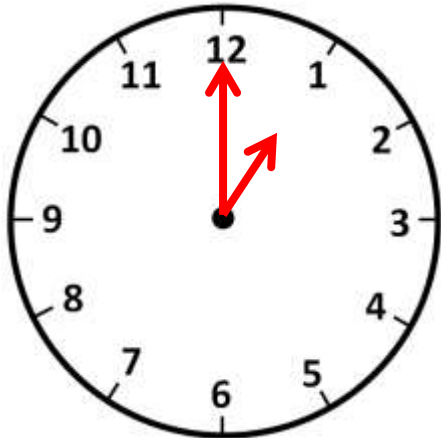
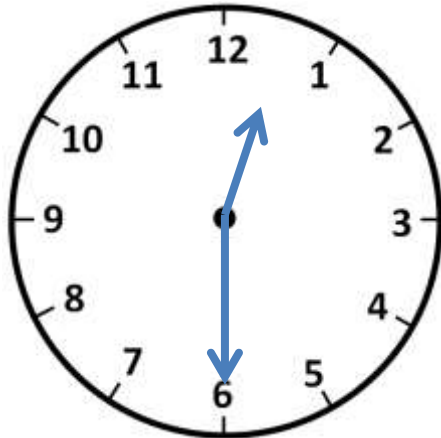
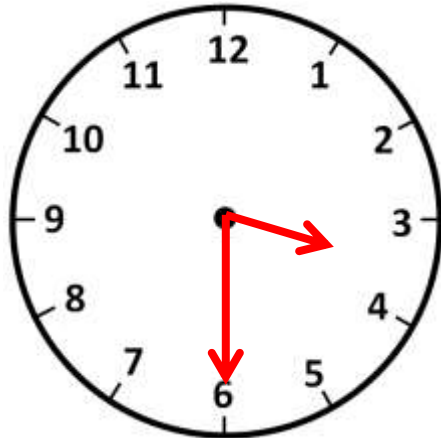
Name

Date



# TELLING THE TIME - O'CLOCK & HALF PAST

## SHEET 3 ANSWERS

		
Half past 1	5 o'clock	Half past 10
		
1 o'clock	Half past 12	Half past 3

Complete the missing digital times:

Half past 2 → 2:30

4 o'clock → 4:00

Half past 12 → 12:30

