

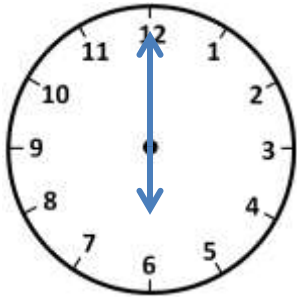
Name

Date

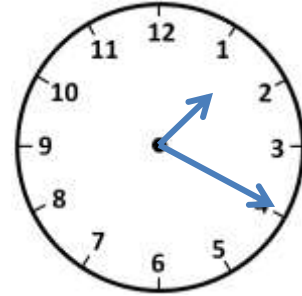


CORRECT THE TIME TO 5 MINUTES SHEET 1A

Each of the clocks is 10 minutes slow. Match each clock to the correct time.

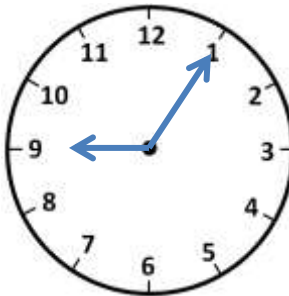


Half past 1

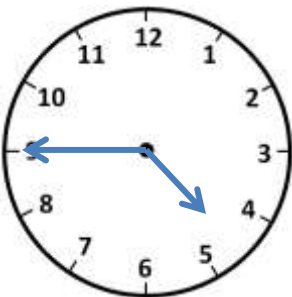


5 past 12

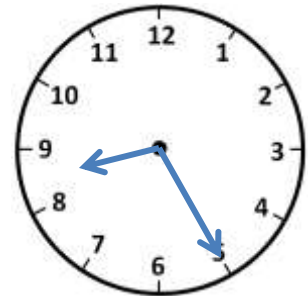
25 to 9



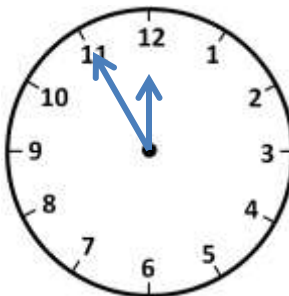
5 past 12



10 past 6



5 to 5



Quarter past 9



Free Math Sheets, Math Games and Math Help

MATH-SALAMANDERS.COM



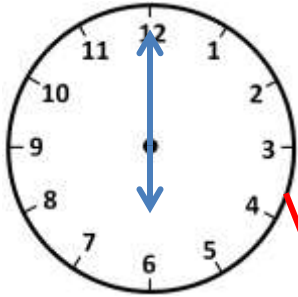
Name

Date

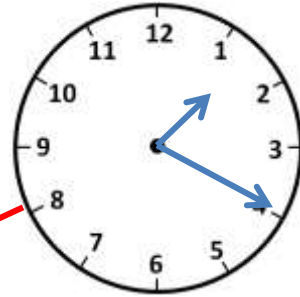


CORRECT THE TIME TO 5 MINUTES SHEET 1A ANSWERS

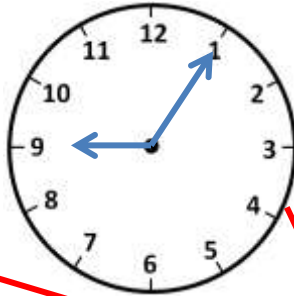
Each of the clocks is 10 minutes slow. Match each clock to the correct digital time.



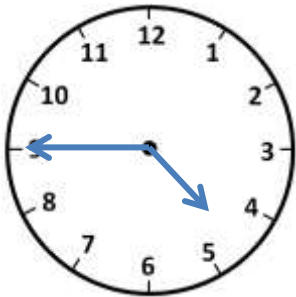
Half past 1



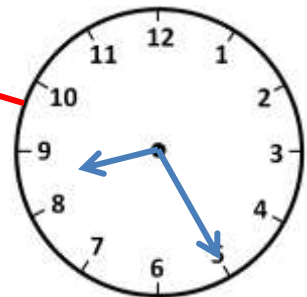
25 to 9



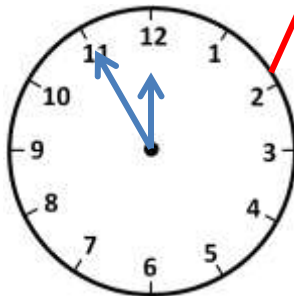
5 past 12



10 past 6



5 to 5



Quarter past 9

