

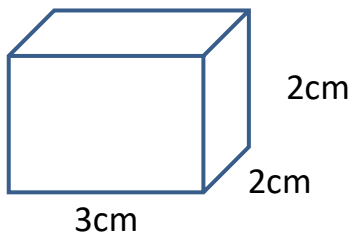
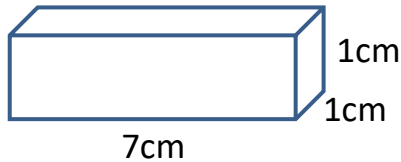
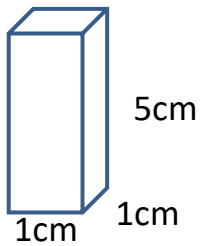
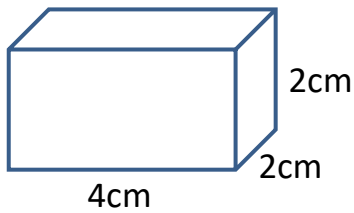
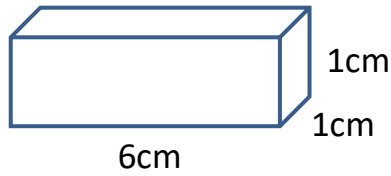
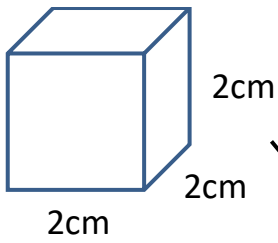
Name

Date



# MATCH THE VOLUME 1

Draw lines to match the shapes to their volumes.



Volume  $5\text{cm}^3$

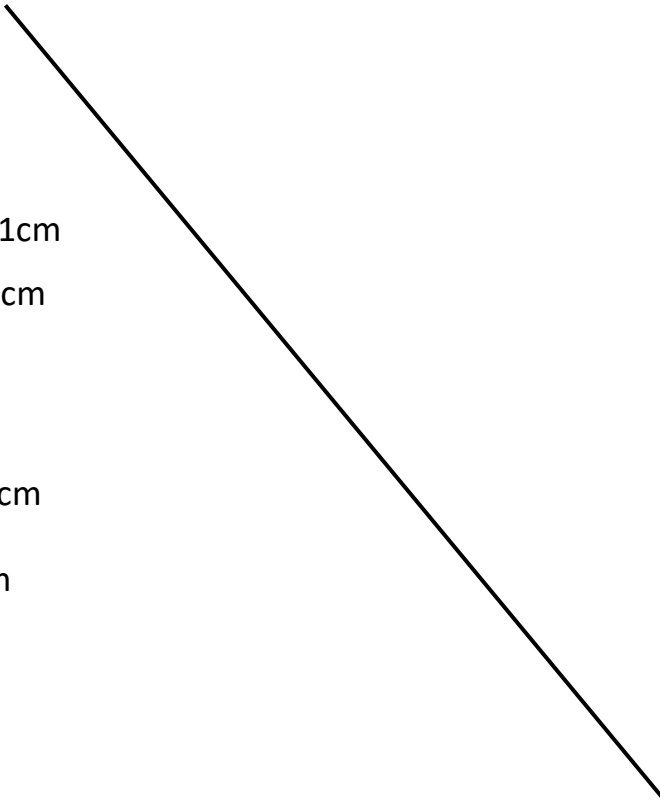
Volume  $6\text{cm}^3$

Volume  $7\text{cm}^3$

Volume  $8\text{cm}^3$

Volume  $12\text{cm}^3$

Volume  $16\text{cm}^3$



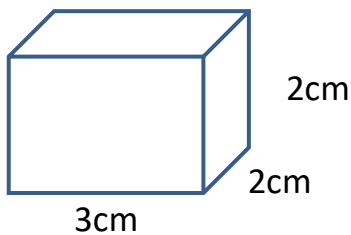
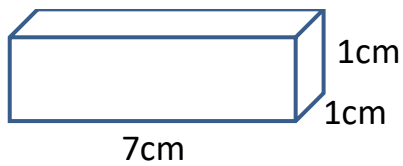
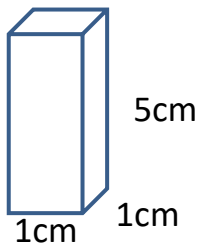
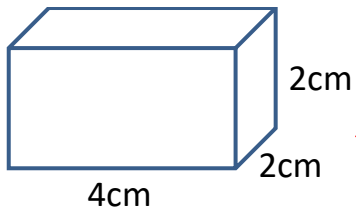
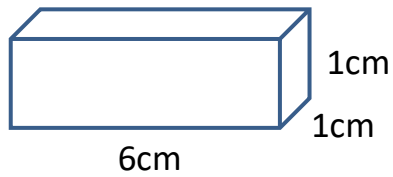
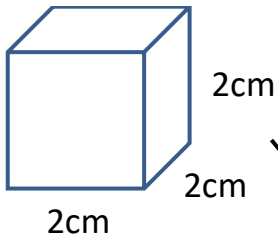
Name

Date



# MATCH THE VOLUME 1 ANSWERS

Draw lines to match the shapes to their volumes.



Volume  $5\text{cm}^3$

Volume  $6\text{cm}^3$

Volume  $7\text{cm}^3$

Volume  $8\text{cm}^3$

Volume  $12\text{cm}^3$

Volume  $16\text{cm}^3$