

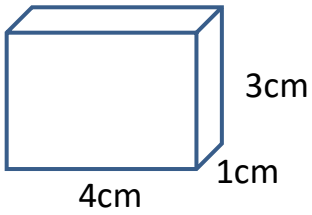
Name

Date

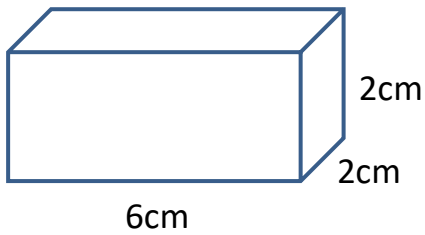


## MATCH THE VOLUME 2

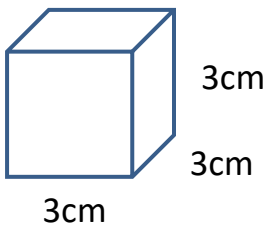
Draw lines to match the shapes to their volumes.



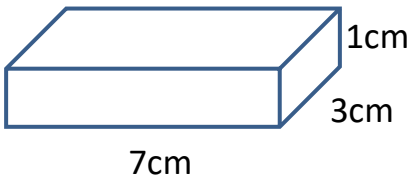
\_\_\_\_\_ Volume 12cm<sup>3</sup>



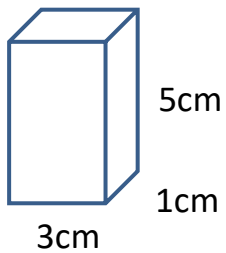
Volume 15cm<sup>3</sup>



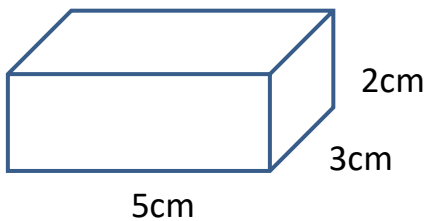
Volume 21cm<sup>3</sup>



Volume 24cm<sup>3</sup>



Volume 27cm<sup>3</sup>



Volume 30cm<sup>3</sup>

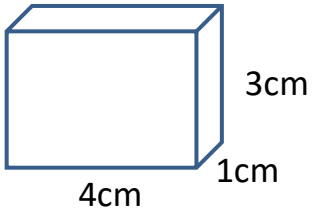
Name

Date

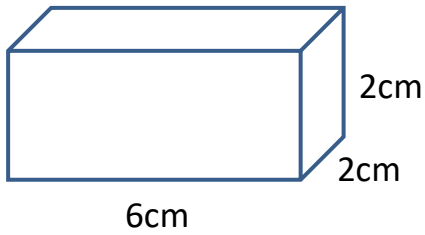


## MATCH THE VOLUME 2 ANSWERS

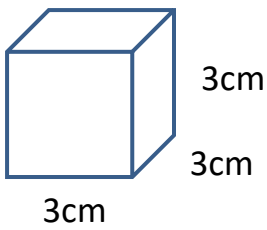
Draw lines to match the shapes to their volumes.



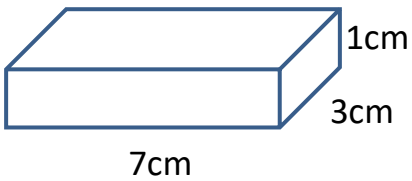
Volume  $12\text{cm}^3$



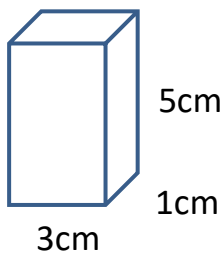
Volume  $15\text{cm}^3$



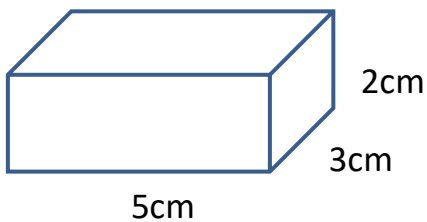
Volume  $21\text{cm}^3$



Volume  $24\text{cm}^3$



Volume  $27\text{cm}^3$



Volume  $30\text{cm}^3$