



Name

Date





# MENTAL MATH QUIZ 3:1

1)	Work out $4 + 5 + 6$	
2)	How many sides does a pentagon have?	
3)	What number is halfway between 10 and 20?	
4)	$20 - 4$	
5)	Write down the number three hundred seven	
6)	Fill in the missing number $56 = 50 + \underline{\quad}$	
7)	What is the missing number in this sequence? $2, 5, 8, 11, 14, 17, \underline{\quad}$	
8)	$5 \times 3$	
9)	Which of these numbers is <b>not</b> even? $12, 28, 57, 32, 46, 70$	
10)	What is the value of the digit 3 in the number 735?	
11)	I have \$1. I spend 40¢. How much do I have left?	
12)	Which is the correct name of this shape? <div style="text-align: center;">   <b>kite rhombus parallelogram trapezoid rectangle</b> </div>	
13)	How many groups of 3 make 15?	
14)	The date is the 15 <sup>th</sup> March. What will it be in a week's time?	
15)	What is double 40?	
16)	2 apples costs 30¢. How much does 1 apple cost? 	



# MENTAL MATH QUIZ 3:1 ANSWERS

1)	Work out $4 + 5 + 6$	15
2)	How many sides does a pentagon have?	5
3)	What number is halfway between 10 and 20?	15
4)	$20 - 4$	16
5)	Write down the number three hundred seven	307
6)	Fill in the missing number $56 = 50 + \underline{\quad}$	6
7)	What is the missing number in this sequence? 2, 5, 8, 11, 14, 17, $\underline{\quad}$	20
8)	$5 \times 3$	15
9)	Which of these numbers is <b>not</b> even? 12, 28, 57, 32, 46, 70	57
10)	What is the value of the digit 3 in the number 735?	30
11)	I have \$1. I spend 40¢. How much do I have left?	60¢
12)	Which is the correct name of this shape?  <b>kite rhombus parallelogram trapezoid rectangle</b>	Parallelogram
13)	How many groups of 3 make 15?	5
14)	The date is the 15 <sup>th</sup> March. What will it be in a week's time?	22 <sup>nd</sup> March
15)	What is double 40?	80
16)	2 apples costs 30¢. How much does 1 apple cost? 	15¢