
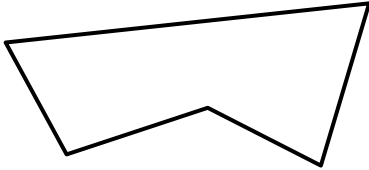






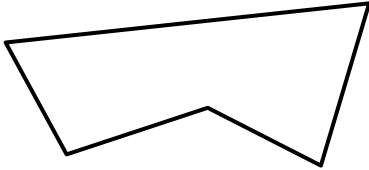

MENTAL MATH QUIZ 3:10

1)	$42 \div 6$	
2)	Circle 4 coins which make 65¢? 	
3)	$10 \times 4 = 33 + \underline{\quad}$	
4)	What is the name of this shape? 	
5)	$20 + 300 + 7 + 1000$	
6)	What is the product of 8 and 6?	
7)	Round 5638 to the nearest 100.	
8)	What is $\frac{3}{7} + \frac{2}{7}$	
9)	There are 54 eggs that need to be put into boxes of 6. How many boxes of eggs will be filled? 	
10)	Four thousand subtract 4	
11)	Joe is 6 years older than Molly. Molly is half the age of Luke. If Luke is 26 years old, how old is Joe?	
12)	How many pints in 2 gallons?	
13)	A banana costs 24¢. How much does a bunch of 3 cost?	
14)	Measure this line in cm. _____	
15)	I have \$1. I spend 68¢. How much do I have left?	
16)	An egg weighs about..... 7g 70g 700g 7000g?	





MENTAL MATH QUIZ 3:10 ANSWERS

1)	$42 \div 6$	7
2)	Circle 4 coins which make 65¢? 	
3)	$10 \times 4 = 33 + \underline{\hspace{1cm}}$	7
4)	What is the name of this shape? 	(irregular) pentagon
5)	$20 + 300 + 7 + 1000$	1327
6)	What is the product of 8 and 6?	48
7)	Round 5638 to the nearest 100.	5600
8)	What is $\frac{3}{7} + \frac{2}{7}$	$\frac{5}{7}$
9)	There are 54 eggs that need to be put into boxes of 6. How many boxes of eggs will be filled? 	9
10)	Four thousand subtract 4	3996
11)	Joe is 6 years older than Molly. Molly is half the age of Luke. If Luke is 26 years old, how old is Joe?	19 years old
12)	How many pints in 2 gallons?	16
13)	A banana costs 24¢. How much does a bunch of 3 cost?	72¢
14)	Measure this line in cm. _____	approx. 8.7cm
15)	I have \$1. I spend 68¢. How much do I have left?	32¢
16)	An egg weighs about..... 7g 70g 700g 7000g?	70g

Name

Date

