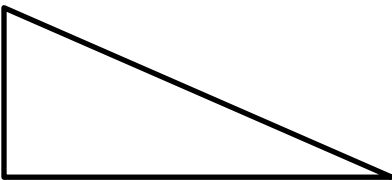




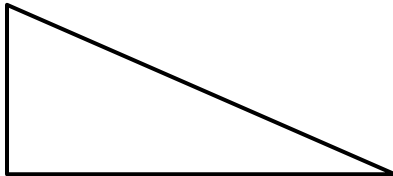




MENTAL MATH QUIZ 3:2

1)	$500 + 70 + 4$	
2)	Half of 30	
3)	What is this triangle called? 	
4)	$30 - 6$	
5)	What is the value of the digit 7 in the number 1726?	
6)	Double 14	
7)	5×6	
8)	Write down all the odd numbers from the list below 42, 37, 21, 26, 38, 63	
9)	Round 67 to the nearest 10.	
10)	What number comes halfway between 30 and 50?	
11)	How many nickels make 30¢?	
12)	The time is 4:30pm. What will the time be in half an hour?	
13)	How much is 3 dimes and 3 nickels? 	
14)	What fraction of this shape is shaded? 	
15)	I am facing north. I turn 2 half turns. Which way am I facing now?	
16)	How many inches in 2 feet?	



MENTAL MATH QUIZ 3:2 ANSWERS

1)	$500 + 70 + 4$	574
2)	Half of 30	15
3)	What is this triangle called? 	right triangle
4)	$30 - 6$	24
5)	What is the value of the digit 7 in the number 1726?	700
6)	Double 14	28
7)	5×6	30
8)	Write down all the odd numbers from the list below 42, 37, 21, 26, 38, 63	37, 21, 63
9)	Round 67 to the nearest 10.	70
10)	What number comes halfway between 30 and 50?	40
11)	How many nickels make 30¢?	6
12)	The time is 4:30pm. What will the time be in half an hour?	5:00pm
13)	How much is 3 dimes and 3 nickels? 	45¢
14)	What fraction of this shape is shaded? 	$\frac{3}{5}$
15)	I am facing north. I turn 2 half turns. Which way am I facing now?	north
16)	How many inches in 2 foot?	24 inches