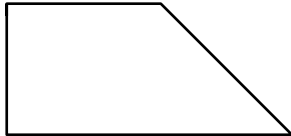



Name

Date



MENTAL MATH QUIZ 3:3

| | | |
|-----|---|--|
| 1) | $7 + \underline{\quad} = 12$ | |
| 2) | How many sides does a hexagon have? | |
| 3) | 10×7 | |
| 4) | What is the value of the digit 1 in the number 4215? | |
| 5) | Round 73 to the nearest 10 | |
| 6) | $18 - 15$ | |
| 7) | Half of 16 | |
| 8) | How many minutes in half an hour? | |
| 9) | How many right angles can you see in the shape?  | |
| 10) | The time is 10:20am. What will the time be in 2 hours? | |
| 11) | What is the missing number in the sequence: 39, 37, 35, 33, 31, <u> </u> | |
| 12) | $4 + 9 + 6$ | |
| 13) | Write down the number four hundred thirty-six | |
| 14) | What is the total of all the coins?  | |
| 15) | The date is April 28. What will the date be in 5 days' time? | |
| 16) | How many cm is 6 meters? | |



Free Math Sheets, Math Games and Math Help

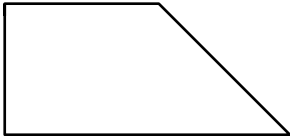

MATH-SALAMANDERS.COM

Name

Date



MENTAL MATH QUIZ 3:3 ANSWERS

| | | |
|-----|---|---------|
| 1) | $7 + \underline{\quad} = 12$ | 5 |
| 2) | How many sides does a hexagon have? | 6 |
| 3) | 10×7 | 70 |
| 4) | What is the value of the digit 1 in the number 4215? | 10 |
| 5) | Round 73 to the nearest 10 | 70 |
| 6) | $18 - 15$ | 3 |
| 7) | Half of 16 | 8 |
| 8) | How many minutes in half an hour? | 30 |
| 9) | How many right angles can you see in the shape?  | 2 |
| 10) | The time is 10:20am. What will the time be in 2 hours? | 12:20pm |
| 11) | What is the missing number in the sequence: 39, 37, 35, 33, 31, <u> </u> | 29 |
| 12) | $4 + 9 + 6$ | 19 |
| 13) | Write down the number four hundred thirty-six | 436 |
| 14) | What is the total of all the coins?  | 27¢ |
| 15) | The date is April 28. What will the date be in 5 days' time? | May 3 |
| 16) | How many cm is 6 meters? | 600 |



Free Math Sheets, Math Games and Math Help

MATH-SALAMANDERS.COM