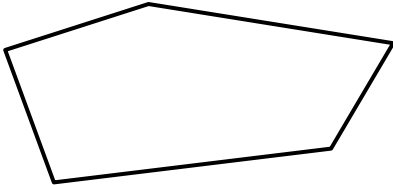




Name

Date

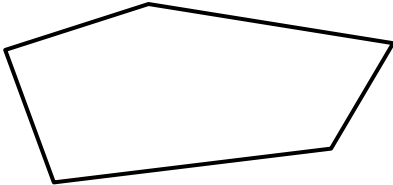




MENTAL MATH QUIZ 3:4

1)	$3 \times \underline{\quad} = 30$	
2)	Write down a multiple of 5 between 22 and 32	
3)	$40 \div 10$	
4)	$628 = 600 + \underline{\quad} + 8$	
5)	Write down nine hundred fourteen.	
6)	What is the next number? 17, 21, 25, 29, 33, $\underline{\quad}$	
7)	How many vertices does this shape have? 	
8)	How many 2s make 14?	
9)	Round 165 to the nearest 10.	
10)	What fraction of the shape below is shaded? 	
11)	How much is 5 dimes and 3 nickels?	
12)	$48 - \underline{\quad} = 42$	
13)	The time is 3:40pm. What will the time be in half an hour?	
14)	How many dimes make 80¢?	
15)	A pencil costs 21¢. How much do 3 pencils cost? 	
16)	How many feet in 4 yards?	



MENTAL MATH QUIZ 3:4 ANSWERS

1)	$3 \times \underline{\quad} = 30$	10
2)	Write down a multiple of 5 between 22 and 32	25 or 30
3)	$40 \div 10$	4
4)	$628 = 600 + \underline{\quad} + 8$	20
5)	Write down nine hundred fourteen	914
6)	What is the next number? 17, 21, 25, 29, 33, <u> </u>	37
7)	How many vertices does this shape have? 	5
8)	How many 2s make 14?	7
9)	Round 165 to the nearest 10.	170
10)	What fraction of the shape below is shaded? 	$\frac{5}{8}$
11)	How much is 5 dimes and 3 nickels?	65¢
12)	$48 - \underline{\quad} = 42$	6
13)	The time is 3:40pm. What will the time be in half an hour?	4:10pm
14)	How many dimes make 80¢?	8
15)	A pencil costs 21¢. How much do 3 pencils cost? 	63¢
16)	How many feet in 4 yards?	12