
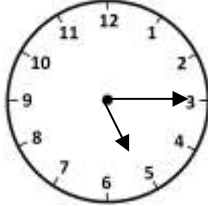


Name _____

Date _____



MENTAL MATH QUIZ 3:5

1)	Write down 3 odd numbers that add up to 19	
2)	___ - 4 = 11	
3)	Write down the number one thousand three hundred twenty.	
4)	$21 \div 3$	
5)	Round 827 to the nearest 100.	
6)	What is the perimeter of this rectangle? <div style="text-align: right; margin-right: 100px;"> 6cm  </div>	
7)	What is the next number in this sequence? 83, 80, 77, 74, 71, ___	
8)	What is the time in digital? <div style="text-align: center;">  </div>	
9)	Write down a multiple of 4 between 29 and 37	
10)	I have \$1. I spend 35¢. How much do I have left?	
11)	A ladder is 10 _____ tall. Which word is missing? inches feet cm	
12)	How many nickels makes 4 dimes?	
13)	What number comes halfway between 7 and 8?	
14)	How many wheels on 8 cars?	
15)	Half of 32	
16)	The date is the August 15. What was the date 2 weeks ago?	


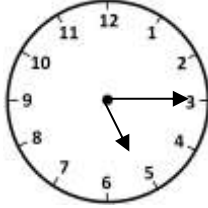


Name

Date



MENTAL MATH QUIZ 3:5 ANSWERS

1)	Write down 3 odd numbers that add up to 19	e.g. 1, 3, 15
2)	___ - 4 = 11	15
3)	Write down the number one thousand three hundred twenty.	1320
4)	$21 \div 3$	7
5)	Round 827 to the nearest 100.	800
6)	What is the perimeter of this rectangle? <div style="text-align: right; margin-right: 100px;">6cm</div> <div style="display: inline-block; vertical-align: middle;">2cm</div> 	16cm
7)	What is the next number in this sequence? 83, 80, 77, 74, 71, ___	68
8)	What is the time in digital? 	5:15
9)	Write down a multiple of 4 between 29 and 37	32 or 36
10)	I have \$1. I spend 35¢. How much do I have left?	65¢
11)	A ladder is 10 _____ tall. Which word is missing? inches feet cm	feet
12)	How many nickels makes 4 dimes?	8
13)	What number comes halfway between 7 and 8?	$7 \frac{1}{2}$
14)	How many wheels on 8 cars?	32
15)	Half of 32	16
16)	The date is the August 15. What was the date 2 weeks ago?	August 1



Free Math Sheets, Math Games and Math Help

MATH-SALAMANDERS.COM