







MENTAL MATH QUIZ 3:6

1)	20 - 13	
2)	How many sides does an octagon have?	
3)	How much more is 6×4 than 3×5 ?	
4)	Write down a multiple of 7 between 20 and 30.	
5)	$800 + 6$	
6)	Make 7 ten times bigger.	
7)	<p>What is the perimeter of this shape?</p> <div style="display: flex; align-items: center; justify-content: center;"> <div style="margin-right: 10px;">4 in.</div>  </div> <p style="text-align: center; margin-top: 10px;">5 in.</p>	
8)	What is $\frac{1}{2}$ as a decimal?	
9)	What is the difference between 22 and 18?	
10)	<p>How much money?</p> 	
11)	How many minutes in $\frac{1}{4}$ of an hour?	
12)	I am a 3d shape. I have 6 faces and all my faces are square. Who am I?	
13)	$18 \div 6$	
14)	Round 864 to the nearest 10.	
15)	In a school, a fourth of a class are boys. What fraction are girls?	
16)	$5 + 7 = \underline{\quad} \times 3$	





MENTAL MATH QUIZ 3:6 ANSWERS

1)	20 - 13	7
2)	How many sides does an octagon have?	8
3)	How much more is 6×4 than 3×5 ?	9
4)	Write down a multiple of 7 between 20 and 30.	21 or 28
5)	$800 + 6$	806
6)	Make 7 ten times bigger.	70
7)	<p>What is the perimeter of this shape?</p> <div style="display: flex; align-items: center; justify-content: center;"> <div style="margin-right: 10px;">4 in.</div>  </div> <div style="text-align: center; margin-top: 10px;">5 in.</div>	18 in.
8)	What is $\frac{1}{2}$ as a decimal?	0.5
9)	What is the difference between 22 and 18?	4
10)	<p>How much money?</p> 	56¢
11)	How many minutes in $\frac{1}{4}$ of an hour?	15
12)	I am a 3d shape. I have 6 faces and all my faces are square. Who am I?	cube
13)	$18 \div 6$	3
14)	Round 864 to the nearest 10.	860
15)	In a school, a fourth of a class are boys. What fraction are girls?	$\frac{3}{4}$
16)	$5 + 7 = \underline{\quad} \times 3$	4