
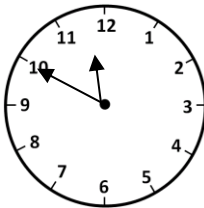


Name

Date


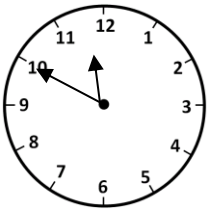


# MENTAL MATH QUIZ 3:9

1)	Write down the number four thousand sixteen.	
2)	$54 + 30$	
3)	How many tens in 180?	
4)	Round 853 to the nearest 100.	
5)	Add 20 to 6 and then halve the result.	
6)	40 subtract 17	
7)	<p>What is the perimeter of this rectangle?</p> <div style="display: flex; align-items: center; justify-content: center;"> <div style="margin-right: 10px;">2 cm</div>  </div> <p style="text-align: center; margin-top: 10px;">12 cm</p>	
8)	$4000 + 300 + 5 =$	
9)	$24 \div 8$	
10)	<p>What digital time is shown on the clock.</p> 	
11)	What is the remainder when 22 is divide by 5?	
12)	A train journey takes 1 hour 40 minutes. If I set off at 9:30am what time would I arrive?	
13)	How many meters is 3 kilometers?	
14)	Which is the biggest fraction? $\frac{1}{2}$ $\frac{1}{3}$ $\frac{1}{4}$ $\frac{1}{5}$	
15)	$3 \frac{1}{2} + \underline{\quad} = 10$	
16)	I am a square with sides length 4cm. What is my area?	



# MENTAL MATH QUIZ 3:9 ANSWERS

1)	Write down the number four thousand sixteen.	4016
2)	$54 + 30$	84
3)	How many tens in 180?	18
4)	Round 853 to the nearest 100.	900
5)	Add 20 to 6 and then halve the result.	13
6)	40 subtract 17	23
7)	<p>What is the perimeter of this rectangle?</p> <div style="display: flex; align-items: center; justify-content: center;"> <div style="margin-right: 10px;">2 cm</div>  </div> <p style="text-align: center; margin-top: 10px;">12 cm</p>	28cm
8)	$4000 + 300 + 5 =$	4305
9)	$24 \div 8$	3
10)	<p>What digital time is shown on the clock.</p> 	11:50
11)	What is the remainder when 22 is divide by 5?	2
12)	A train journey takes 1 hour 40 minutes. If I set off at 9:30am what time would I arrive?	11:10am
13)	How many meters is 3 kilometers?	3000
14)	Which is the biggest fraction? $\frac{1}{2}$ $\frac{1}{3}$ $\frac{1}{4}$ $\frac{1}{5}$	$\frac{1}{2}$
15)	$3 \frac{1}{2} + \underline{\hspace{1cm}} = 10$	$6 \frac{1}{2}$
16)	I am a square with sides length 4cm. What is my area?	$16\text{cm}^2$