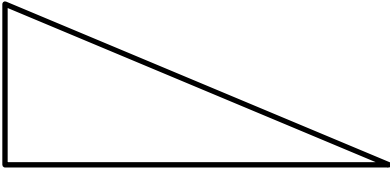
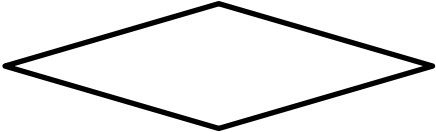


Name

Date



# MENTAL MATH QUIZ 4:2

1)	$0.6 \times 4$	
2)	Which two of the numbers below are prime? 17 14 15 18 19 10	
3)	How many acute angles? 	
4)	What is the perimeter of a square with sides 5 inches?	
5)	Which of these numbers are divisible by 5? 32 51 45 20 18	
6)	Add together $\frac{2}{10}$ , $\frac{3}{10}$ and $\frac{4}{10}$	
7)	$9278 = 9008 + \underline{\hspace{2cm}}$	
8)	What is the name of this shape?  trapezoid rectangle rhombus square	
9)	Round 3.48 to the nearest whole number.	
10)	A 6lb chicken takes 15 minutes plus 20 minutes per pound to cook. How long do I need to cook it for? <u>   </u> h <u>   </u> min	
11)	I buy 10 raffle tickets at \$1.60 per ticket. How much money have I spent?	
12)	$\frac{1}{4}$ of 32 subtract $\frac{1}{3}$ of 18	
13)	What is the value of $2x + 1$ if $x = 6$ ?	
14)	Sally spends \$4.30 on a sandwich and \$2.50 on a drink. How much change from \$10?	
15)	In a class, $\frac{2}{5}$ of the children are boys. What fraction are girls?	
16)	I set off at 7:40am. My journey takes 45 min. When do I arrive?	

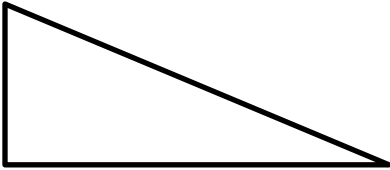
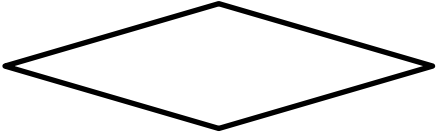


Name

Date



# MENTAL MATH QUIZ 4:2 ANSWERS

1)	$0.6 \times 4$	<b>2.4</b>
2)	Which two of the numbers below are prime? 17 14 15 18 19 10	<b>17 and 19</b>
3)	How many acute angles? 	<b>2</b>
4)	What is the perimeter of a square with sides 5 inches?	<b>20 inches</b>
5)	Which of these numbers are divisible by 5? 32 51 45 20 18	<b>45 and 20</b>
6)	Add together $\frac{2}{10}$ , $\frac{3}{10}$ and $\frac{4}{10}$	<b><math>\frac{9}{10}</math></b>
7)	$9278 = 9008 + \underline{\quad}$	<b>270</b>
8)	What is the name of this shape?  trapezoid rectangle rhombus square	<b>rhombus</b>
9)	Round 3.48 to the nearest whole number.	<b>3</b>
10)	A 6lb chicken takes 15 minutes plus 20 minutes per pound to cook. How long do I need to cook it for? <u>   </u> h <u>   </u> min	<b>2 h 15 min</b>
11)	I buy 10 raffle tickets at \$1.60 per ticket. How much money have I spent?	<b>\$16</b>
12)	$\frac{1}{4}$ of 32 subtract $\frac{1}{3}$ of 18	<b>8-6=2</b>
13)	What is the value of $2x + 1$ if $x = 6$ ?	<b>13</b>
14)	Sally spends \$4.30 on a sandwich and \$2.50 on a drink. How much change from \$10?	<b>\$3.20</b>
15)	In a class, $\frac{2}{5}$ of the children are boys. What fraction are girls?	<b><math>\frac{3}{5}</math></b>
16)	I set off at 7:40am. My journey takes 45 min. When do I arrive?	<b>8:25am</b>



Free Math Sheets, Math Games and Math Help

[MATH-SALAMANDERS.COM](http://MATH-SALAMANDERS.COM)