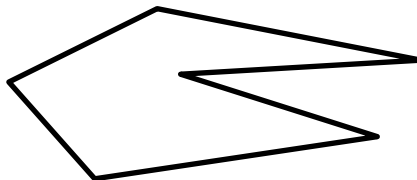
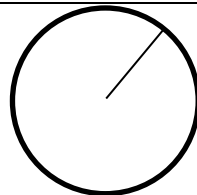


Name

Date

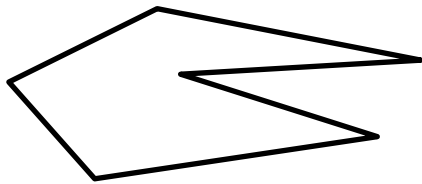
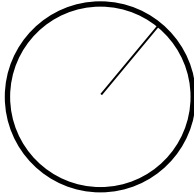


MENTAL MATH QUIZ 4:5

1)	Halve 540	
2)	What number is halfway between 7 and 19?	
3)	0.8×4	
4)	What is the name of this shape? 	
5)	Three consecutive numbers add up to 21. What are they?	
6)	What is this part of the circle called? <i>diameter radius chord sector</i> 	
7)	3 quarters is worth 4 dimes + ____ nickels	
8)	What is the cost of 100 packs of NFL cards at \$18 a pack?	
9)	$40 \div 5 = 20 - \underline{\hspace{1cm}}$	
10)	Which of these numbers is divisible by 3? 76 53 81 94 62	
11)	In a throwing competition, Tyger throws 615cm, Captain throws $4\frac{1}{2}$ m. How much further did Tyger throw?	
12)	Write down a prime number between 20 and 30.	
13)	Write down the decimal 0.27 as a fraction.	
14)	Reduce $\frac{28}{32}$ to its lowest terms.	
15)	In a class, $\frac{3}{5}$ of the children are going to a special event. If there are 30 children in the class, how many are going?	
16)	I set off from home at 8:55am. I arrive at 10:40am. How many minutes was my journey?	



MENTAL MATH QUIZ 4:5 ANSWERS

1)	Halve 540	270
2)	What number is halfway between 7 and 19?	13
3)	0.8×4	3.2
4)	What is the name of this shape? 	hexagon
5)	Three consecutive numbers add up to 21. What are they?	6,7 and 8
6)	What is this part of the circle called? <i>diameter radius chord sector</i> 	radius
7)	3 quarters is worth 4 dimes + ____ nickels	7
8)	What is the cost of 100 packs of NFL cards at \$18 a pack?	\$1800
9)	$40 \div 5 = 20 - \underline{\hspace{1cm}}$	12
10)	Which of these numbers is divisible by 3? 76 53 81 94 62	81
11)	In a throwing competition, Tyger throws 615cm, Captain throws $4\frac{1}{2}$ m. How much further did Tyger throw?	1.65m or 165cm
12)	Write down a prime number between 20 and 30.	23 or 29
13)	Write down the decimal 0.27 as a fraction.	$\frac{27}{100}$
14)	Reduce $\frac{28}{32}$ to its lowest terms.	$\frac{7}{8}$
15)	In a class, $\frac{3}{5}$ of the children are going to a special event. If there are 30 children in the class, how many are going?	18
16)	I set off from home at 8:55am. I arrive at 10:40am. How many minutes was my journey?	105 minutes