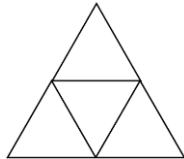
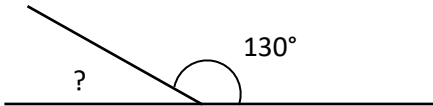


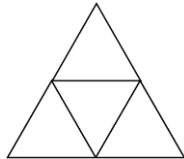
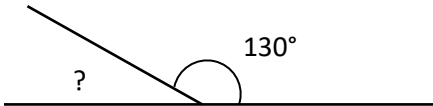


MENTAL MATH QUIZ 5:4

1)	$7 + (8 \times 6)$	
2)	$\frac{3}{5} - \frac{3}{10}$	
3)	Write 0.6 as a fraction in simplest form	
4)	$\frac{1}{3}$ of 21 = ____ - 10	
5)	Round 4.639 to 1dp	
6)	Find the difference between $6\frac{1}{2}$ and $4\frac{3}{4}$.	
7)	Find $\frac{2}{9}$ of 36	
8)	Which of these numbers is prime ? 33 45 57 69 53 49	
9)	What is the difference between 6000 and 60?	
10)	Which two measurements add up to 3 feet? 14 inches 2 feet 1 inch 1 foot 7 inches 11 inches	
11)	How many months in $\frac{3}{4}$ of a year?	
12)	Put the missing operations in the spaces (+, -, x or \div) to make it correct: $5 \quad 6 \quad 3 \quad 2 = 8$	
13)	A rectangular swimming pool measures 6 meters by 4 meters. What is the area ?	
14)	What 3d shape does this net make? 	
15)	What is the missing angle? 	
16)	Two numbers have a sum of 15 and a product of 26. What are they?	
17)	I eat half of a box of chocolates. There are now 16 left. How much were in the box at the start?	
18)	What is $9 \times 10 + 2 \times 1 + 3 \times (1/10) + 5 \times (1/100)$?	



MENTAL MATH QUIZ 5:4 ANSWERS

1)	$7 + (8 \times 6)$	55
2)	$\frac{3}{5} - \frac{3}{10}$	$\frac{3}{10}$
3)	Write 0.6 as a fraction in simplest form	$\frac{3}{5}$
4)	$\frac{1}{3}$ of 21 = ____ - 10	17
5)	Round 4.639 to 1dp	4.6
6)	Find the difference between $6\frac{1}{2}$ and $4\frac{3}{4}$.	$1\frac{3}{4}$
7)	Find $\frac{2}{9}$ of 36	8
8)	Which of these numbers is prime ? 33 45 57 69 53 49	53
9)	What is the difference between 6000 and 60?	5940
10)	Which two measurements add up to 3 feet? 14 inches 2 feet 1 inch 1 foot 7 inches 11 inches	2 feet 1 inch and 11 inches
11)	How many months in $\frac{3}{4}$ of a year?	9
12)	Put the missing operations in the spaces (+, -, x or \div) to make it correct: $5 \quad 6 \quad 3 \quad 2 = 8$	$5 \times 6 \div 3 - 2$
13)	A rectangular swimming pool measures 6 meters by 4 meters. What is the area ?	24m^2
14)	What 3d shape does this net make? 	tetrahedron or triangular pyramid
15)	What is the missing angle? 	50°
16)	Two numbers have a sum of 15 and a product of 26. What are they?	2 and 13
17)	I eat half of a box of chocolates. There are now 16 left. How much were in the box at the start?	32 chocolates
18)	What is $9 \times 10 + 2 \times 1 + 3 \times (1/10) + 5 \times (1/100)$?	92.35