
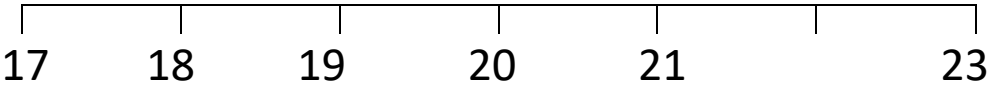





Name

Date



# MENTAL MATHS QUIZ 2:1


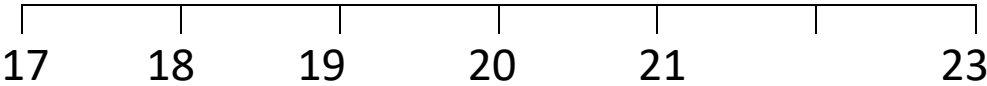




1) $3 + 9$	
2) Write down the next number: 18 19 20 21 22 23 24 _____	
3) How many sides? 	
4) $11 - 5$	
5) Which number is missing from the number line? 	
6) How many fish? 	
7) What number comes <b>after</b> 26?	
8) How much money? 	p
9) I have 10 bananas. I eat 3 of them. How many are left?	
10) Sally has 5 cakes. She makes 2 more. How many does she have now?	
11) Draw the next shape in the sequence. 	
12) Which number comes <b>before</b> 18?	

Name

Date



# MENTAL MATHS QUIZ 2:1 ANSWERS

1)	$3 + 9$	<b>12</b>
2)	Write down the next number: 18 19 20 21 22 23 24 _____	<b>25</b>
3)	How many sides? 	<b>4</b>
4)	$11 - 5$	<b>6</b>
5)	Which number is missing from the number line? 	<b>22</b>
6)	How many fish? 	<b>8</b>
7)	What number comes <b>after</b> 26?	<b>27</b>
8)	How much money? 	<b>12p</b>
9)	I have 10 bananas. I eat 3 of them. How many are left?	<b>7</b>
10)	Sally has 5 cakes. She makes 2 more. How many does she have now?	<b>7</b>
11)	Draw the next shape in the sequence. 	
12)	Which number comes <b>before</b> 18?	<b>17</b>

