

Name

Date



MENTAL MATHS QUIZ 2:10

1)	14 subtract 10	
2)	$60 + 7$	
3)	Write down the number ninety-five.	
4)	Tick the shapes that are half shaded.	
5)	A large bag of flour weighs 2 kg. How much do 6 bags of flour weigh?	kg
6)	How many?	
7)	Circle the smallest number.	
	72 81 68 159 93	
8)	$10 - \underline{\quad} = 3$	
9)	The date is 3 rd June. What will the date be in a week?	
10)	What has been done to this shape? flip turn or slide	
11)	I have 3 TENS and 3 FIVES. How much money do I have?	¢
12)	A can of cola contains about 8 spoons of sugar. How much sugar in 2 cans?	spoons
13)	Circle the numbers which are multiples of 5?	
	32 10 15 18 52 30	



Free Math Sheets, Math Games and Math Help




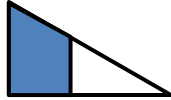
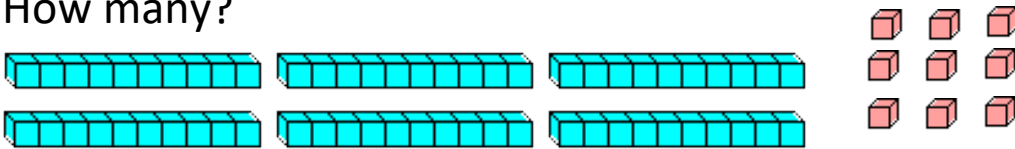
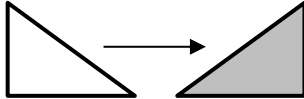

MATH-SALAMANDERS.COM

Name

Date



MENTAL MATHS QUIZ 2:10 ANSWERS

1)	14 subtract 10	4
2)	$60 + 7$	67
3)	Write down the number ninety-five.	95
4)	Tick the shapes that are half shaded.    	
5)	A large bag of flour weighs 2 kg. How much do 6 bags of flour weigh?	12 kg
6)	How many? 	69
7)	Circle the smallest number. <p style="text-align: center;">72 81 68 159 93</p>	
8)	$10 - \underline{\quad} = 3$	7
9)	The date is 3 rd June. What will the date be in a week?	10th June
10)	What has been done to this shape? flip turn or slide 	flip
11)	I have 3 TENS and 3 FIVES. How much money do I have?	45p
12)	A can of cola contains about 8 spoons of sugar. How much sugar in 2 cans? 	16 spoons
13)	Circle the numbers which are multiples of 5? <p style="text-align: center;">32 10 15 18 52 30</p>	



Free Math Sheets, Math Games and Math Help

MATH-SALAMANDERS.COM