

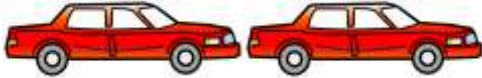
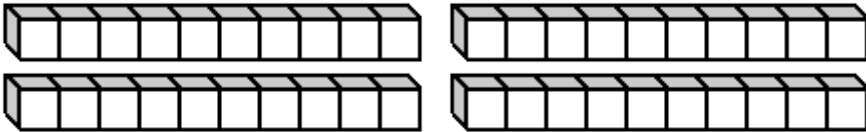


Name

Date



MENTAL MATHS QUIZ 2:3

1)	10 plus 8	
2)	Circle all the even numbers. 17 15 8 9 11 10	
3)	What is the next number: 5, 7, 9, 11, 13, ____	
4)	Write the number forty-five.	
5)	Tick the triangle. 	
6)	How much money? 	p
7)	I have £12. I spend £8. How much money do I have left?	
8)	13 subtract 0	
9)	What number comes after 69?	
10)	A toy car costs £7. How much do two cars cost? 	£
11)	The date is 26 th June. What was the date three days ago?	June
12)	How many cubes? 	



Free Math Sheets, Math Games and Math Help



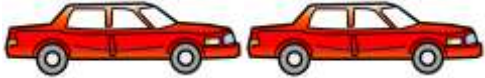
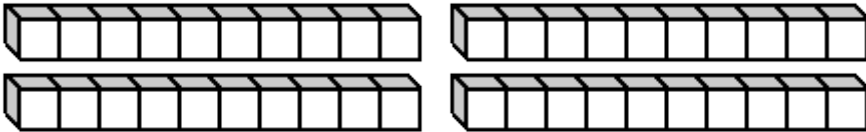
MATH-SALAMANDERS.COM

Name

Date



MENTAL MATHS QUIZ 2:3 ANSWERS

1) 10 plus 8	18
2) Circle all the even numbers. 17 15 8 9 11 10	
3) What is the next number: 5, 7, 9, 11, 13, ___	15
4) Write the number forty-five.	45
5) Tick the triangle. 	
6) How much money? 	14p
7) I have £12. I spend £8. How much money do I have left?	£4
8) 13 subtract 0	13
9) What number comes after 69?	70
10) A toy car costs £7. How much do two cars cost? 	£14
11) The date is 26 th June. What was the date three days ago?	23rd June
12) How many cubes? 	40



Free Math Sheets, Math Games and Math Help

MATH-SALAMANDERS.COM