

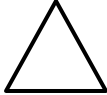

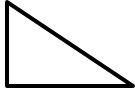






Name

Date



MENTAL MATHS QUIZ 2:4





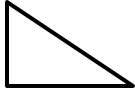




1) $16 - 4$	
2) Half of 8	
3) Which month comes after May? January March June October	
4) Tick the object below which has the same shapes as this:      	
5) How much money? 	p
6) How many sides does this shape have? 	
7) Circle the 3rd number in the list below: 52 27 18 46 50 14 71	
8) Bob is 3 years older than Sam. If Sam is 11 years old, how old is Bob?	
9) A pack of pencils has 4 pencils. I buy 3 packs. How many pencils? 	
10) Write down the number one hundred and seventy-eight.	
11) What is the next number: 2, 4, 6, 8, 10, _____	
12) Today is Friday. What will the day be in 2 days' time? Saturday Monday Thursday Sunday	

Name

Date



MENTAL MATHS QUIZ 2:4 ANSWERS

1)	16 - 4	12
2)	Half of 8	4
3)	Which month comes after May? January March June October	June
4)	Tick the object below which has the same shapes as this:      	
5)	How much money? 	42p
6)	How many sides does this shape have? 	6
7)	Circle the 3rd number in the list below: 52 27 18 46 50 14 71	
8)	Bob is 3 years older than Sam. If Sam is 11 years old, how old is Bob?	14 years old
9)	A pack of pencils has 4 pencils. I buy 3 packs. How many pencils? 	12
10)	Write down the number one hundred and seventy-eight.	178
11)	What is the next number: 2, 4, 6, 8, 10, _____	12
12)	Today is Friday. What will the day be in 2 days' time? Saturday Monday Thursday Sunday	Sunday



Free Math Sheets, Math Games and Math Help

MATH-SALAMANDERS.COM