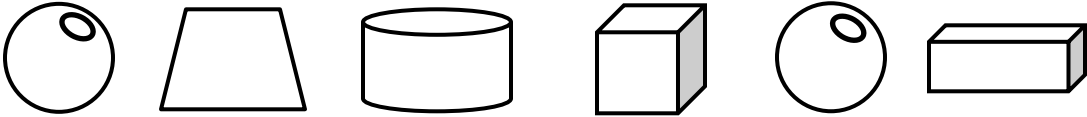



Name

Date



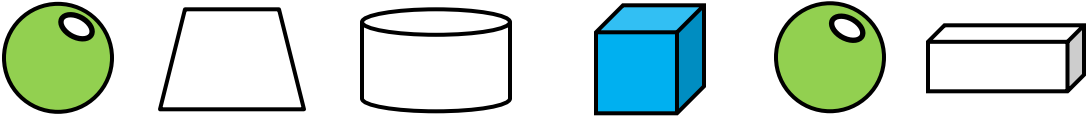

MENTAL MATHS QUIZ 2:8

1)	I have 2 FIVES and a TEN. How much money?	p						
2)	What is the next number in the sequence? 5, 10, 15, 20, 25, 30, 35, ____							
3)	Shade all the spheres green and the cubes blue. 							
4)	17 subtract 5							
5)	Which of these numbers is a multiple of 10 ? 26 32 19 40 55 12							
6)	What number is the Roman numeral V?							
7)	How much money? 	p						
8)	$5 + 7 + 3$							
9)	Fill in the missing numbers. <table border="1" data-bbox="438 1323 1339 1386"> <tbody> <tr> <td>42</td> <td>41</td> <td></td> <td>39</td> <td>38</td> <td></td> </tr> </tbody> </table>	42	41		39	38		
42	41		39	38				
10)	I have 2 FIVES. How much more money do I need to make 17p?	p						
11)	Circle the biggest number? 37 41 83 52 112 75							
12)	Quadra has 4 pencils. Tyger has 2 more than Quadra. How many pencils do they have in total?							





MENTAL MATHS QUIZ 2:8 ANSWERS

1)	I have 2 FIVES and a TEN. How much money?	20p						
2)	What is the next number in the sequence? 5, 10, 15, 20, 25, 30, 35, ____	40						
3)	Shade all the spheres green and the cubes blue. 							
4)	17 subtract 5	12						
5)	Which of these numbers is a multiple of 10 ? 26 32 19 40 55 12	40						
6)	What number is the Roman numeral V?	5						
7)	How much money? 	51p						
8)	$5 + 7 + 3$	15						
9)	Fill in the missing numbers. <table border="1" data-bbox="438 1344 1339 1417"> <tbody> <tr> <td>42</td> <td>41</td> <td>40</td> <td>39</td> <td>38</td> <td>37</td> </tr> </tbody> </table>	42	41	40	39	38	37	
42	41	40	39	38	37			
10)	I have 2 FIVES. How much more money do I need to make 17p?	7p						
11)	Circle the biggest number? 37 41 83 52 112 75							
12)	Quadra has 4 pencils. Tyger has 2 more than Quadra. How many pencils do they have in total?	10						

