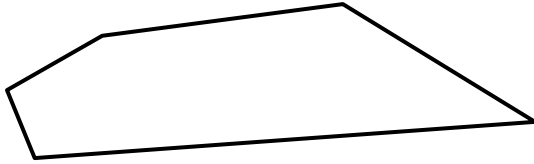







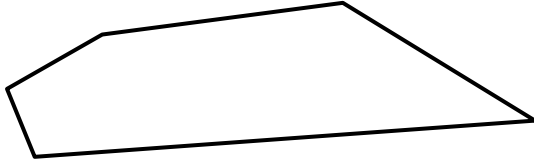



MENTAL MATHS QUIZ 2:9

<p>1) Circle all the odd numbers.</p> <p style="text-align: center;">18 26 35 42 50 61</p>	
<p>2) What is the next number?</p> <p style="text-align: center;">5 10 15 20 25 30 ____</p>	
<p>3) Add together 7, 8 and 2.</p>	
<p>4) How many vertices?</p>	
<p>5) How many FIVES are worth 2 TENS?</p>	
<p>6) $8 + \underline{\quad} = 13$</p>	
<p>7) How many TENS make 70p?</p>	
<p>8) Captain has 7 toy cars. Sally has 2 cars less than Captain. How many do they both have in total?</p>	
<p>9) 10 more than 6</p>	
<p>10) I have:</p>  <p>How much more do I need to make 30p?</p>	p
<p>11) A skipping rope is 3 meters long. How long are 3 ropes?</p>	m
<p>12) Circle the unit I would use to measure the length of a pencil?</p> <p style="text-align: center;">cm m km g kg</p>	





MENTAL MATHS QUIZ 2:9 ANSWERS

<p>1) Circle all the odd numbers.</p> <p style="text-align: center;">18 26 35 42 50 61</p>	
<p>2) What is the next number?</p> <p style="text-align: center;">5 10 15 20 25 30 ____</p>	35
<p>3) Add together 7, 8 and 2.</p>	17
<p>4) How many vertices?</p> <div style="text-align: center;">  </div>	5
<p>5) How many FIVES are worth 2 TENS?</p>	4
<p>6) $8 + \underline{\quad} = 13$</p>	5
<p>7) How many TENS make 70p?</p>	7
<p>8) Captain has 7 toy cars. Sally has 2 cars less than Captain. How many do they both have in total?</p> <div style="text-align: right;">  </div>	12
<p>9) 10 more than 6</p>	16
<p>10) I have:</p> <div style="text-align: center;">  </div> <p>How much more do I need to make 30p?</p>	3p
<p>11) A skipping rope is 3 meters long. How long are 3 ropes?</p>	9m
<p>12) Circle the unit I would use to measure the length of a pencil?</p> <p style="text-align: center;">cm m km g kg</p> <div style="text-align: right;">  </div>	

